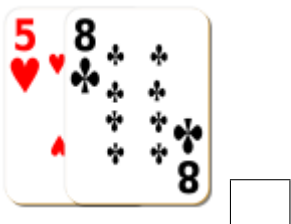

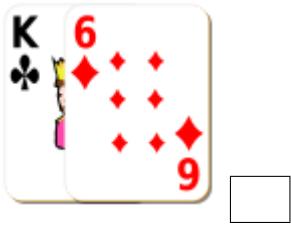



Sumar Cartas de Baraja (C)

Halle la suma de cada conjunto de cartas.



Sumar Cartas de Baraja (C) Answers

Halle la suma de cada conjunto de cartas.



20



5



15



23



19



14



19



16



11



11



13



15