


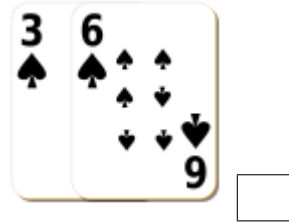


Sumar Cartas de Baraja (D)

Halle la suma de cada conjunto de cartas.



Sumar Cartas de Baraja (D) Answers

Halle la suma de cada conjunto de cartas.



20



9



12



12



16



16



23



5



7



5



10



11