

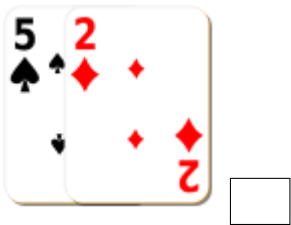
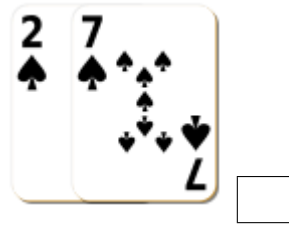
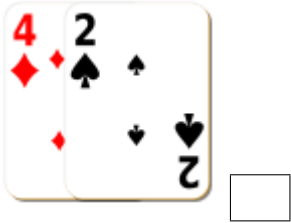


Sumar Cartas de Baraja (I)

Halle la suma de cada conjunto de cartas.



Sumar Cartas de Baraja (I) Answers

Halle la suma de cada conjunto de cartas.



6



19



17



9



7



13



20



15



8



11



15



11