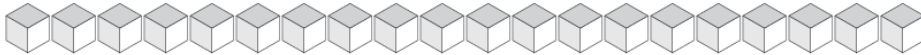


Cambiar Unidades por Varas (F)

¿Cuántas unidades puedes cambiar por varas y cuántas quedarían?



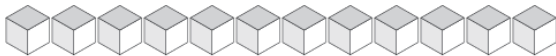
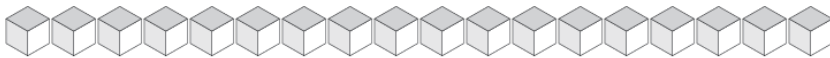
| Varas | Unidades |
|-------|----------|
| | |



| Varas | Unidades |
|-------|----------|
| | |



| Varas | Unidades |
|-------|----------|
| | |



| Varas | Unidades |
|-------|----------|
| | |



| Varas | Unidades |
|-------|----------|
| | |

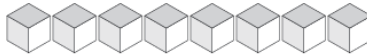
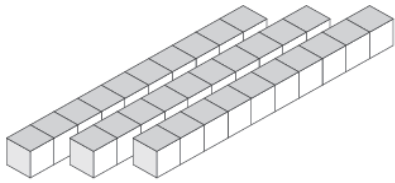


| Varas | Unidades |
|-------|----------|
| | |

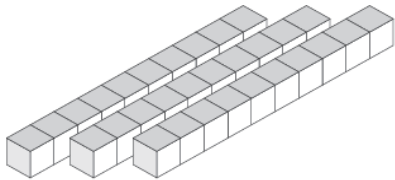


Cambiar Unidades por Varas (F) Respuestas

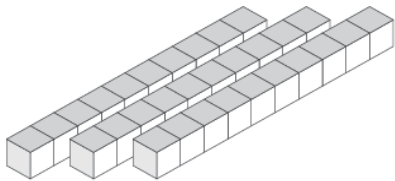
¿Cuántas unidades puedes cambiar por varas y cuántas quedarían?



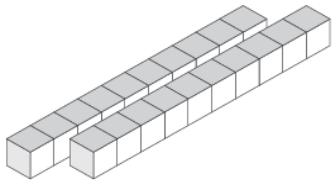
| Varas | Unidades |
|-------|----------|
| 3 | 8 |



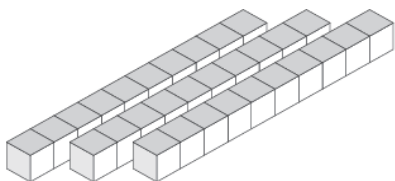
| Varas | Unidades |
|-------|----------|
| 3 | 1 |



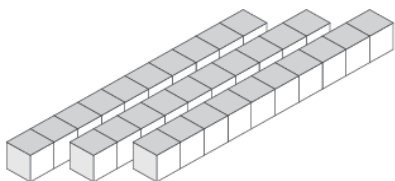
| Varas | Unidades |
|-------|----------|
| 3 | 8 |



| Varas | Unidades |
|-------|----------|
| 2 | 7 |



| Varas | Unidades |
|-------|----------|
| 3 | 4 |



| Varas | Unidades |
|-------|----------|
| 3 | 5 |