

# Práctica con Bolas de Nieve (A)

Nombre: \_\_\_\_\_

Fecha: \_\_\_\_\_

Lanza cada bola de nieve a la diana correcta.

$$\begin{array}{r} 99 \\ + 27 \\ \hline \end{array}$$



$$\begin{array}{r} 56 \\ + 85 \\ \hline \end{array}$$




$$\begin{array}{r} 69 \\ + 20 \\ \hline \end{array}$$



$$\begin{array}{r} 10 \\ + 81 \\ \hline \end{array}$$



$$\begin{array}{r} 33 \\ + 81 \\ \hline \end{array}$$



$$\begin{array}{r} 98 \\ + 27 \\ \hline \end{array}$$



$$\begin{array}{r} 34 \\ + 93 \\ \hline \end{array}$$



$$\begin{array}{r} 32 \\ + 99 \\ \hline \end{array}$$



$$\begin{array}{r} 58 \\ + 92 \\ \hline \end{array}$$



$$\begin{array}{r} 22 \\ + 63 \\ \hline \end{array}$$

# Práctica con Bolas de Nieve (A) Respuestas

Nombre: \_\_\_\_\_

Fecha: \_\_\_\_\_

Lanza cada bola de nieve a la diana correcta.

$$\begin{array}{r} 99 \\ + 27 \\ \hline \end{array}$$



$$\begin{array}{r} 56 \\ + 85 \\ \hline \end{array}$$



$$\begin{array}{r} 69 \\ + 20 \\ \hline \end{array}$$



$$\begin{array}{r} 10 \\ + 81 \\ \hline \end{array}$$



$$\begin{array}{r} 33 \\ + 81 \\ \hline \end{array}$$



131

91

127

114

150

126

141

85

89

125



$$\begin{array}{r} 98 \\ + 27 \\ \hline \end{array}$$



$$\begin{array}{r} 34 \\ + 93 \\ \hline \end{array}$$



$$\begin{array}{r} 32 \\ + 99 \\ \hline \end{array}$$



$$\begin{array}{r} 58 \\ + 92 \\ \hline \end{array}$$



$$\begin{array}{r} 22 \\ + 63 \\ \hline \end{array}$$

## Práctica con Bolas de Nieve (B)

Nombre: \_\_\_\_\_

Fecha: \_\_\_\_\_

Lanza cada bola de nieve a la diana correcta.

$$\begin{array}{r} 72 \\ + 25 \\ \hline \end{array}$$



$$\begin{array}{r} 23 \\ + 15 \\ \hline \end{array}$$



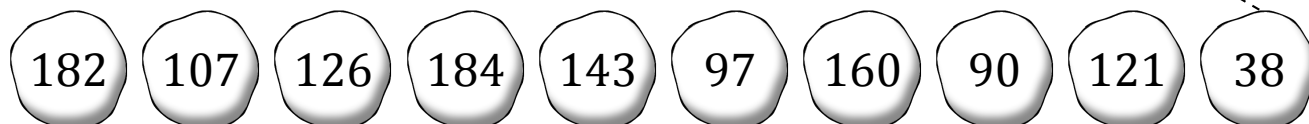
$$\begin{array}{r} 96 \\ + 64 \\ \hline \end{array}$$



$$\begin{array}{r} 88 \\ + 96 \\ \hline \end{array}$$



$$\begin{array}{r} 71 \\ + 72 \\ \hline \end{array}$$



$$\begin{array}{r} 96 \\ + 86 \\ \hline \end{array}$$



$$\begin{array}{r} 80 \\ + 46 \\ \hline \end{array}$$



$$\begin{array}{r} 33 \\ + 57 \\ \hline \end{array}$$



$$\begin{array}{r} 87 \\ + 34 \\ \hline \end{array}$$








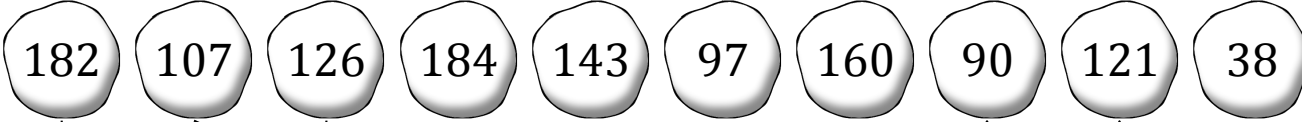





$$\begin{array}{r} 57 \\ + 50 \\ \hline \end{array}$$

## Práctica con Bolas de Nieve (B) Respuestas

Nombre: \_\_\_\_\_

Fecha: \_\_\_\_\_

Lanza cada bola de nieve a la diana correcta.

$\begin{array}{r} 72 \\ + 25 \\ \hline \end{array}$	$\begin{array}{r} 23 \\ + 15 \\ \hline \end{array}$	$\begin{array}{r} 96 \\ + 64 \\ \hline \end{array}$	$\begin{array}{r} 88 \\ + 96 \\ \hline \end{array}$	$\begin{array}{r} 71 \\ + 72 \\ \hline \end{array}$
				
				
				
$\begin{array}{r} 96 \\ + 86 \\ \hline \end{array}$	$\begin{array}{r} 80 \\ + 46 \\ \hline \end{array}$	$\begin{array}{r} 33 \\ + 57 \\ \hline \end{array}$	$\begin{array}{r} 87 \\ + 34 \\ \hline \end{array}$	$\begin{array}{r} 57 \\ + 50 \\ \hline \end{array}$

# Práctica con Bolas de Nieve (C)

Nombre: \_\_\_\_\_

Fecha: \_\_\_\_\_

Lanza cada bola de nieve a la diana correcta.

$$\begin{array}{r} 86 \\ + 78 \\ \hline \end{array}$$



$$\begin{array}{r} 81 \\ + 82 \\ \hline \end{array}$$



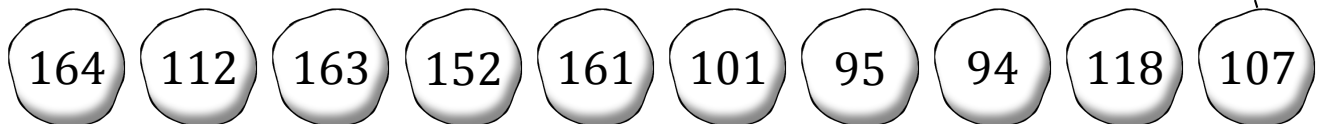
$$\begin{array}{r} 14 \\ + 81 \\ \hline \end{array}$$



$$\begin{array}{r} 70 \\ + 48 \\ \hline \end{array}$$



$$\begin{array}{r} 24 \\ + 83 \\ \hline \end{array}$$



$$\begin{array}{r} 72 \\ + 22 \\ \hline \end{array}$$



$$\begin{array}{r} 53 \\ + 48 \\ \hline \end{array}$$



$$\begin{array}{r} 80 \\ + 81 \\ \hline \end{array}$$



$$\begin{array}{r} 43 \\ + 69 \\ \hline \end{array}$$








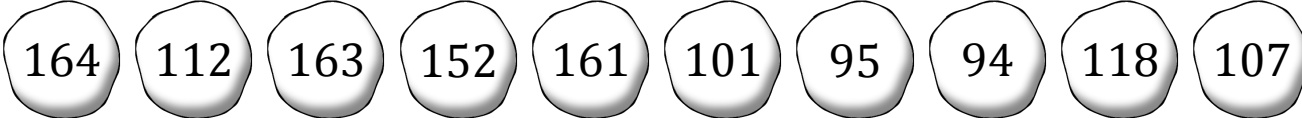





$$\begin{array}{r} 91 \\ + 61 \\ \hline \end{array}$$

# Práctica con Bolas de Nieve (C) Respuestas

Nombre: \_\_\_\_\_

Fecha: \_\_\_\_\_

Lanza cada bola de nieve a la diana correcta.

$\begin{array}{r} 86 \\ + 78 \\ \hline \end{array}$	$\begin{array}{r} 81 \\ + 82 \\ \hline \end{array}$	$\begin{array}{r} 14 \\ + 81 \\ \hline \end{array}$	$\begin{array}{r} 70 \\ + 48 \\ \hline \end{array}$	$\begin{array}{r} 24 \\ + 83 \\ \hline \end{array}$
				
				
				
$\begin{array}{r} 72 \\ + 22 \\ \hline \end{array}$	$\begin{array}{r} 53 \\ + 48 \\ \hline \end{array}$	$\begin{array}{r} 80 \\ + 81 \\ \hline \end{array}$	$\begin{array}{r} 43 \\ + 69 \\ \hline \end{array}$	$\begin{array}{r} 91 \\ + 61 \\ \hline \end{array}$

Dashed lines connect the snowballs to the targets as follows:

- 164 to 86 + 78
- 112 to 72 + 22
- 163 to 81 + 82
- 152 to 14 + 81
- 161 to 70 + 48
- 101 to 24 + 83
- 95 to 72 + 22
- 94 to 53 + 48
- 118 to 80 + 81
- 107 to 43 + 69

# Práctica con Bolas de Nieve (D)

Nombre: \_\_\_\_\_

Fecha: \_\_\_\_\_

Lanza cada bola de nieve a la diana correcta.

$$\begin{array}{r} 79 \\ + 17 \\ \hline \end{array}$$



$$\begin{array}{r} 49 \\ + 94 \\ \hline \end{array}$$



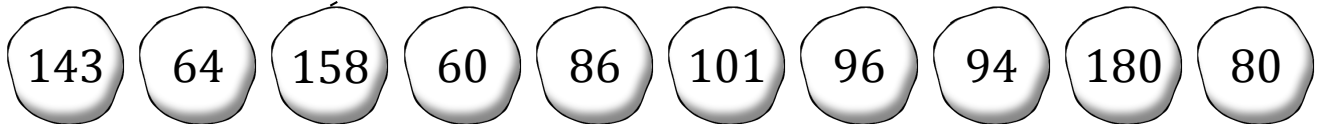
$$\begin{array}{r} 30 \\ + 34 \\ \hline \end{array}$$



$$\begin{array}{r} 13 \\ + 73 \\ \hline \end{array}$$



$$\begin{array}{r} 75 \\ + 83 \\ \hline \end{array}$$



$$\begin{array}{r} 85 \\ + 95 \\ \hline \end{array}$$



$$\begin{array}{r} 25 \\ + 35 \\ \hline \end{array}$$



$$\begin{array}{r} 67 \\ + 34 \\ \hline \end{array}$$



$$\begin{array}{r} 10 \\ + 70 \\ \hline \end{array}$$








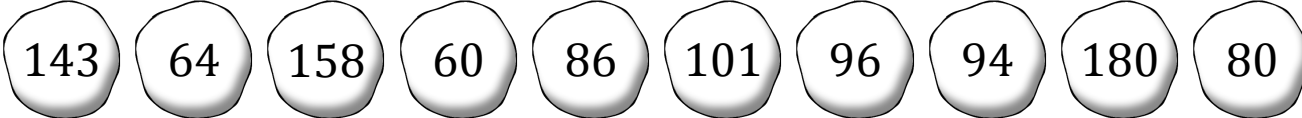

$$\begin{array}{r} 77 \\ + 17 \\ \hline \end{array}$$

# Práctica con Bolas de Nieve (D) Respuestas

Nombre: \_\_\_\_\_

Fecha: \_\_\_\_\_

Lanza cada bola de nieve a la diana correcta.

$\begin{array}{r} 79 \\ + 17 \\ \hline \end{array}$	$\begin{array}{r} 49 \\ + 94 \\ \hline \end{array}$	$\begin{array}{r} 30 \\ + 34 \\ \hline \end{array}$	$\begin{array}{r} 13 \\ + 73 \\ \hline \end{array}$	$\begin{array}{r} 75 \\ + 83 \\ \hline \end{array}$
				
				
				
$\begin{array}{r} 85 \\ + 95 \\ \hline \end{array}$	$\begin{array}{r} 25 \\ + 35 \\ \hline \end{array}$	$\begin{array}{r} 67 \\ + 34 \\ \hline \end{array}$	$\begin{array}{r} 10 \\ + 70 \\ \hline \end{array}$	$\begin{array}{r} 77 \\ + 17 \\ \hline \end{array}$

Detailed description: The image shows a matching exercise. At the top, five addition problems are listed. Below them are five target icons. In the middle, there is a horizontal row of ten snowballs, each containing a number. At the bottom, there are five more target icons, each with an addition problem below it. Dashed lines connect the snowballs to the targets. The connections are: 143 to the 4th target (13+73), 64 to the 1st target (79+17), 158 to the 2nd target (49+94), 60 to the 5th target (75+83), 86 to the 3rd target (30+34), 101 to the 4th target (13+73), 96 to the 1st target (79+17), 94 to the 2nd target (49+94), 180 to the 5th target (75+83), and 80 to the 3rd target (30+34).



# Práctica con Bolas de Nieve (E)

Nombre: \_\_\_\_\_

Fecha: \_\_\_\_\_

Lanza cada bola de nieve a la diana correcta.

$$\begin{array}{r} 65 \\ + 75 \\ \hline \end{array}$$



$$\begin{array}{r} 27 \\ + 79 \\ \hline \end{array}$$



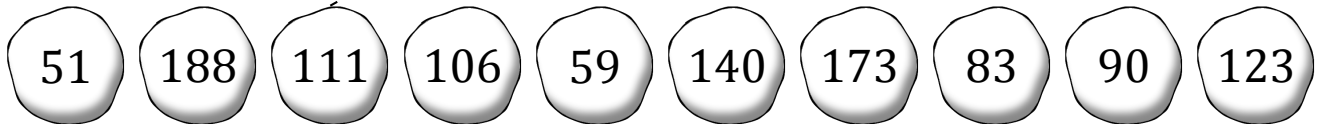
$$\begin{array}{r} 90 \\ + 98 \\ \hline \end{array}$$



$$\begin{array}{r} 93 \\ + 80 \\ \hline \end{array}$$



$$\begin{array}{r} 97 \\ + 14 \\ \hline \end{array}$$



$$\begin{array}{r} 90 \\ + 33 \\ \hline \end{array}$$



$$\begin{array}{r} 52 \\ + 38 \\ \hline \end{array}$$



$$\begin{array}{r} 17 \\ + 34 \\ \hline \end{array}$$



$$\begin{array}{r} 38 \\ + 21 \\ \hline \end{array}$$













$$\begin{array}{r} 43 \\ + 40 \\ \hline \end{array}$$

# Práctica con Bolas de Nieve (E) Respuestas

Nombre: \_\_\_\_\_

Fecha: \_\_\_\_\_

Lanza cada bola de nieve a la diana correcta.

$\begin{array}{r} 65 \\ + 75 \\ \hline \end{array}$	$\begin{array}{r} 27 \\ + 79 \\ \hline \end{array}$	$\begin{array}{r} 90 \\ + 98 \\ \hline \end{array}$	$\begin{array}{r} 93 \\ + 80 \\ \hline \end{array}$	$\begin{array}{r} 97 \\ + 14 \\ \hline \end{array}$
				
<div style="display: flex; justify-content: space-around; align-items: center;"><div style="border: 1px solid black; border-radius: 50%; padding: 10px; background-color: #f0f0f0;">51</div><div style="border: 1px solid black; border-radius: 50%; padding: 10px; background-color: #f0f0f0;">188</div><div style="border: 1px solid black; border-radius: 50%; padding: 10px; background-color: #f0f0f0;">111</div><div style="border: 1px solid black; border-radius: 50%; padding: 10px; background-color: #f0f0f0;">106</div><div style="border: 1px solid black; border-radius: 50%; padding: 10px; background-color: #f0f0f0;">59</div><div style="border: 1px solid black; border-radius: 50%; padding: 10px; background-color: #f0f0f0;">140</div><div style="border: 1px solid black; border-radius: 50%; padding: 10px; background-color: #f0f0f0;">173</div><div style="border: 1px solid black; border-radius: 50%; padding: 10px; background-color: #f0f0f0;">83</div><div style="border: 1px solid black; border-radius: 50%; padding: 10px; background-color: #f0f0f0;">90</div><div style="border: 1px solid black; border-radius: 50%; padding: 10px; background-color: #f0f0f0;">123</div></div>				
				
$\begin{array}{r} 90 \\ + 33 \\ \hline \end{array}$	$\begin{array}{r} 52 \\ + 38 \\ \hline \end{array}$	$\begin{array}{r} 17 \\ + 34 \\ \hline \end{array}$	$\begin{array}{r} 38 \\ + 21 \\ \hline \end{array}$	$\begin{array}{r} 43 \\ + 40 \\ \hline \end{array}$

# Práctica con Bolas de Nieve (F)

Nombre: \_\_\_\_\_

Fecha: \_\_\_\_\_

Lanza cada bola de nieve a la diana correcta.

$$\begin{array}{r} 69 \\ + 49 \\ \hline \end{array}$$



$$\begin{array}{r} 35 \\ + 59 \\ \hline \end{array}$$



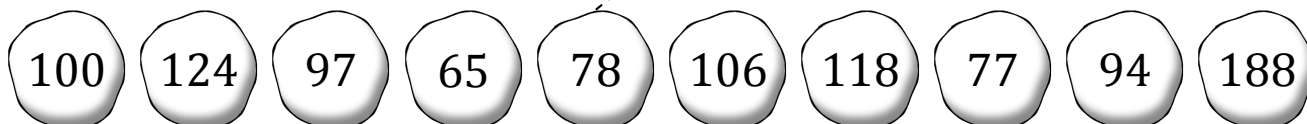
$$\begin{array}{r} 62 \\ + 15 \\ \hline \end{array}$$



$$\begin{array}{r} 71 \\ + 53 \\ \hline \end{array}$$



$$\begin{array}{r} 54 \\ + 24 \\ \hline \end{array}$$



$$\begin{array}{r} 17 \\ + 48 \\ \hline \end{array}$$



$$\begin{array}{r} 48 \\ + 49 \\ \hline \end{array}$$



$$\begin{array}{r} 99 \\ + 89 \\ \hline \end{array}$$



$$\begin{array}{r} 60 \\ + 40 \\ \hline \end{array}$$



$$\begin{array}{r} 91 \\ + 15 \\ \hline \end{array}$$

# Práctica con Bolas de Nieve (F) Respuestas

Nombre: \_\_\_\_\_

Fecha: \_\_\_\_\_

Lanza cada bola de nieve a la diana correcta.

$$\begin{array}{r} 69 \\ + 49 \\ \hline \end{array}$$



$$\begin{array}{r} 35 \\ + 59 \\ \hline \end{array}$$



$$\begin{array}{r} 62 \\ + 15 \\ \hline \end{array}$$



$$\begin{array}{r} 71 \\ + 53 \\ \hline \end{array}$$



$$\begin{array}{r} 54 \\ + 24 \\ \hline \end{array}$$



100 124 97 65 78 106 118 77 94 188



$$\begin{array}{r} 17 \\ + 48 \\ \hline \end{array}$$



$$\begin{array}{r} 48 \\ + 49 \\ \hline \end{array}$$



$$\begin{array}{r} 99 \\ + 89 \\ \hline \end{array}$$



$$\begin{array}{r} 60 \\ + 40 \\ \hline \end{array}$$



$$\begin{array}{r} 91 \\ + 15 \\ \hline \end{array}$$

# Práctica con Bolas de Nieve (G)

Nombre: \_\_\_\_\_

Fecha: \_\_\_\_\_

Lanza cada bola de nieve a la diana correcta.

$$\begin{array}{r} 77 \\ + 41 \\ \hline \end{array}$$



$$\begin{array}{r} 75 \\ + 33 \\ \hline \end{array}$$



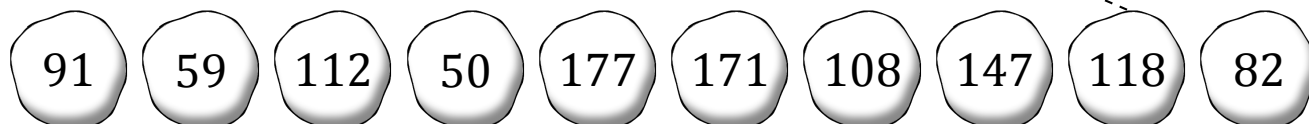
$$\begin{array}{r} 87 \\ + 84 \\ \hline \end{array}$$



$$\begin{array}{r} 63 \\ + 19 \\ \hline \end{array}$$



$$\begin{array}{r} 62 \\ + 85 \\ \hline \end{array}$$



$$\begin{array}{r} 45 \\ + 46 \\ \hline \end{array}$$



$$\begin{array}{r} 21 \\ + 29 \\ \hline \end{array}$$



$$\begin{array}{r} 29 \\ + 30 \\ \hline \end{array}$$



$$\begin{array}{r} 89 \\ + 88 \\ \hline \end{array}$$



$$\begin{array}{r} 20 \\ + 92 \\ \hline \end{array}$$

# Práctica con Bolas de Nieve (G) Respuestas

Nombre: \_\_\_\_\_

Fecha: \_\_\_\_\_

Lanza cada bola de nieve a la diana correcta.

$$\begin{array}{r} 77 \\ + 41 \\ \hline \end{array}$$



$$\begin{array}{r} 75 \\ + 33 \\ \hline \end{array}$$



$$\begin{array}{r} 87 \\ + 84 \\ \hline \end{array}$$



$$\begin{array}{r} 63 \\ + 19 \\ \hline \end{array}$$



$$\begin{array}{r} 62 \\ + 85 \\ \hline \end{array}$$



91

59

112

50

177

171

108

147

118

82



$$\begin{array}{r} 45 \\ + 46 \\ \hline \end{array}$$



$$\begin{array}{r} 21 \\ + 29 \\ \hline \end{array}$$



$$\begin{array}{r} 29 \\ + 30 \\ \hline \end{array}$$



$$\begin{array}{r} 89 \\ + 88 \\ \hline \end{array}$$



$$\begin{array}{r} 20 \\ + 92 \\ \hline \end{array}$$

# Práctica con Bolas de Nieve (H)

Nombre: \_\_\_\_\_

Fecha: \_\_\_\_\_

Lanza cada bola de nieve a la diana correcta.

$$\begin{array}{r} 13 \\ + 79 \\ \hline \end{array}$$



$$\begin{array}{r} 53 \\ + 97 \\ \hline \end{array}$$



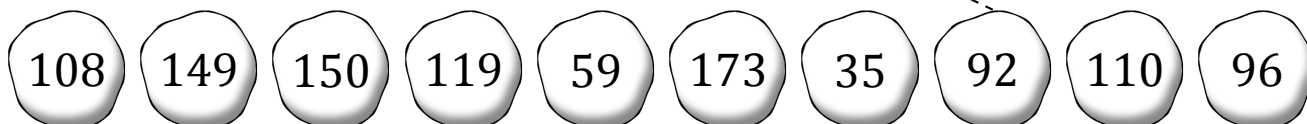
$$\begin{array}{r} 71 \\ + 25 \\ \hline \end{array}$$



$$\begin{array}{r} 76 \\ + 73 \\ \hline \end{array}$$



$$\begin{array}{r} 13 \\ + 46 \\ \hline \end{array}$$



$$\begin{array}{r} 31 \\ + 77 \\ \hline \end{array}$$



$$\begin{array}{r} 50 \\ + 69 \\ \hline \end{array}$$



$$\begin{array}{r} 25 \\ + 10 \\ \hline \end{array}$$



$$\begin{array}{r} 93 \\ + 17 \\ \hline \end{array}$$








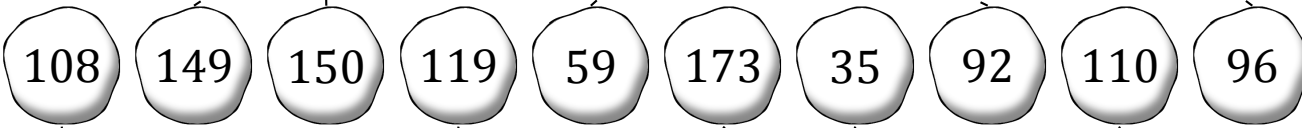





$$\begin{array}{r} 89 \\ + 84 \\ \hline \end{array}$$

# Práctica con Bolas de Nieve (H) Respuestas

Nombre: \_\_\_\_\_

Fecha: \_\_\_\_\_

Lanza cada bola de nieve a la diana correcta.

$\begin{array}{r} 13 \\ + 79 \\ \hline \end{array}$	$\begin{array}{r} 53 \\ + 97 \\ \hline \end{array}$	$\begin{array}{r} 71 \\ + 25 \\ \hline \end{array}$	$\begin{array}{r} 76 \\ + 73 \\ \hline \end{array}$	$\begin{array}{r} 13 \\ + 46 \\ \hline \end{array}$
				
				
				
$\begin{array}{r} 31 \\ + 77 \\ \hline \end{array}$	$\begin{array}{r} 50 \\ + 69 \\ \hline \end{array}$	$\begin{array}{r} 25 \\ + 10 \\ \hline \end{array}$	$\begin{array}{r} 93 \\ + 17 \\ \hline \end{array}$	$\begin{array}{r} 89 \\ + 84 \\ \hline \end{array}$



# Práctica con Bolas de Nieve (I)

Nombre: \_\_\_\_\_

Fecha: \_\_\_\_\_

Lanza cada bola de nieve a la diana correcta.

$$\begin{array}{r} 29 \\ + 12 \\ \hline \end{array}$$



$$\begin{array}{r} 97 \\ + 34 \\ \hline \end{array}$$




$$\begin{array}{r} 48 \\ + 76 \\ \hline \end{array}$$



$$\begin{array}{r} 51 \\ + 77 \\ \hline \end{array}$$



$$\begin{array}{r} 83 \\ + 59 \\ \hline \end{array}$$



$$\begin{array}{r} 43 \\ + 30 \\ \hline \end{array}$$



$$\begin{array}{r} 32 \\ + 48 \\ \hline \end{array}$$



$$\begin{array}{r} 22 \\ + 36 \\ \hline \end{array}$$



$$\begin{array}{r} 67 \\ + 81 \\ \hline \end{array}$$








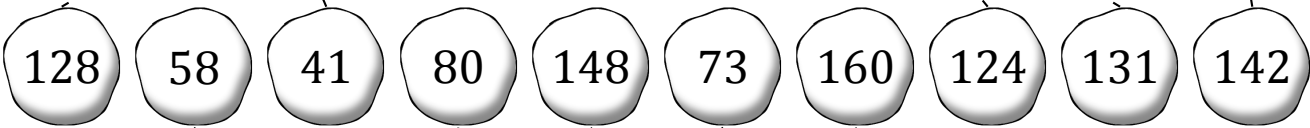





$$\begin{array}{r} 88 \\ + 72 \\ \hline \end{array}$$

# Práctica con Bolas de Nieve (I) Respuestas

Nombre: \_\_\_\_\_

Fecha: \_\_\_\_\_

Lanza cada bola de nieve a la diana correcta.

$\begin{array}{r} 29 \\ + 12 \\ \hline \end{array}$	$\begin{array}{r} 97 \\ + 34 \\ \hline \end{array}$	$\begin{array}{r} 48 \\ + 76 \\ \hline \end{array}$	$\begin{array}{r} 51 \\ + 77 \\ \hline \end{array}$	$\begin{array}{r} 83 \\ + 59 \\ \hline \end{array}$
				
				
				
$\begin{array}{r} 43 \\ + 30 \\ \hline \end{array}$	$\begin{array}{r} 32 \\ + 48 \\ \hline \end{array}$	$\begin{array}{r} 22 \\ + 36 \\ \hline \end{array}$	$\begin{array}{r} 67 \\ + 81 \\ \hline \end{array}$	$\begin{array}{r} 88 \\ + 72 \\ \hline \end{array}$

# Práctica con Bolas de Nieve (J)

Nombre: \_\_\_\_\_

Fecha: \_\_\_\_\_

Lanza cada bola de nieve a la diana correcta.

$$\begin{array}{r} 51 \\ + 23 \\ \hline \end{array}$$



$$\begin{array}{r} 47 \\ + 55 \\ \hline \end{array}$$



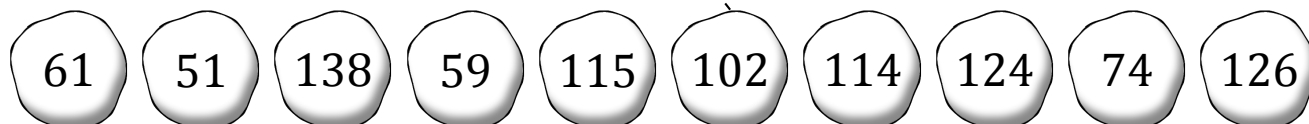
$$\begin{array}{r} 88 \\ + 26 \\ \hline \end{array}$$



$$\begin{array}{r} 53 \\ + 62 \\ \hline \end{array}$$



$$\begin{array}{r} 59 \\ + 79 \\ \hline \end{array}$$



$$\begin{array}{r} 49 \\ + 12 \\ \hline \end{array}$$



$$\begin{array}{r} 55 \\ + 71 \\ \hline \end{array}$$



$$\begin{array}{r} 19 \\ + 40 \\ \hline \end{array}$$



$$\begin{array}{r} 19 \\ + 32 \\ \hline \end{array}$$



$$\begin{array}{r} 95 \\ + 29 \\ \hline \end{array}$$

# Práctica con Bolas de Nieve (J) Respuestas

Nombre: \_\_\_\_\_

Fecha: \_\_\_\_\_

Lanza cada bola de nieve a la diana correcta.

$$\begin{array}{r} 51 \\ + 23 \\ \hline \end{array}$$



$$\begin{array}{r} 47 \\ + 55 \\ \hline \end{array}$$



$$\begin{array}{r} 88 \\ + 26 \\ \hline \end{array}$$



$$\begin{array}{r} 53 \\ + 62 \\ \hline \end{array}$$



$$\begin{array}{r} 59 \\ + 79 \\ \hline \end{array}$$



61

51

138

59

115

102

114

124

74

126



$$\begin{array}{r} 49 \\ + 12 \\ \hline \end{array}$$



$$\begin{array}{r} 55 \\ + 71 \\ \hline \end{array}$$



$$\begin{array}{r} 19 \\ + 40 \\ \hline \end{array}$$



$$\begin{array}{r} 19 \\ + 32 \\ \hline \end{array}$$



$$\begin{array}{r} 95 \\ + 29 \\ \hline \end{array}$$