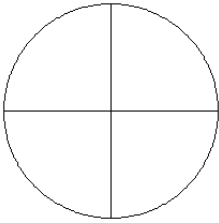


Modelos de Fracciones (B)

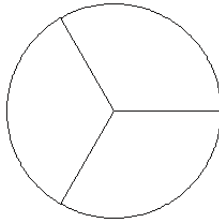
Coloree secciones de cada círculo para modelar cada fracción.

1.



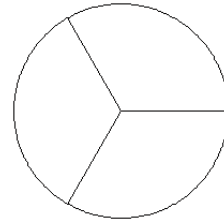
$$\frac{2}{4}$$

2.



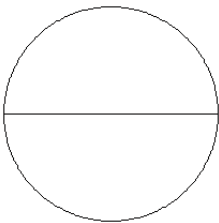
$$\frac{2}{3}$$

3.



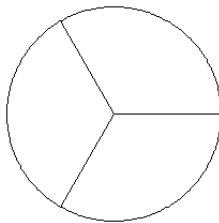
$$\frac{2}{3}$$

4.



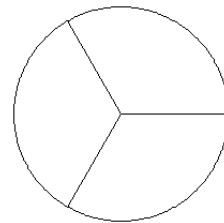
$$\frac{1}{2}$$

5.



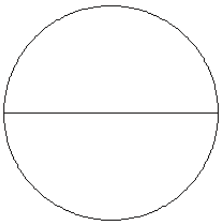
$$\frac{2}{3}$$

6.



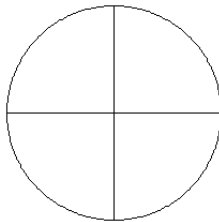
$$\frac{2}{3}$$

7.



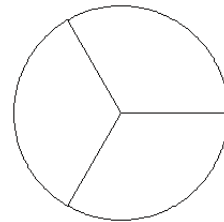
$$\frac{1}{2}$$

8.



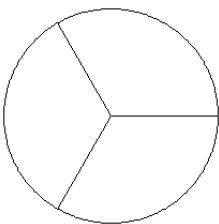
$$\frac{3}{4}$$

9.



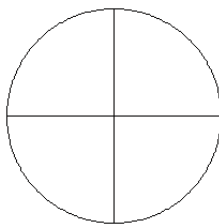
$$\frac{1}{3}$$

10.



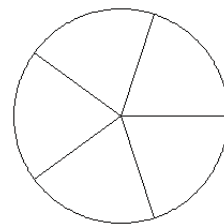
$$\frac{2}{3}$$

11.



$$\frac{3}{4}$$

12.

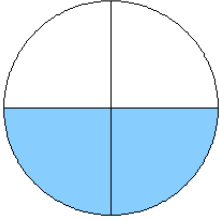


$$\frac{1}{5}$$

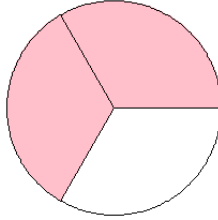
Modelos de Fracciones (B) Respuestas

Coloree secciones de cada círculo para modelar cada fracción.

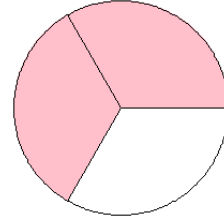
1.



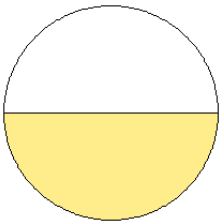
2.



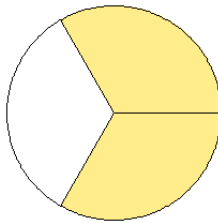
3.



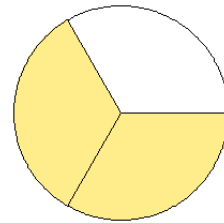
4.



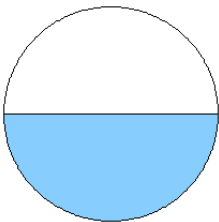
5.



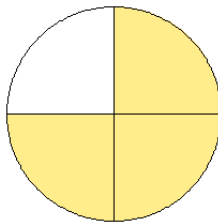
6.



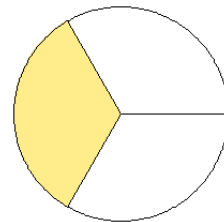
7.



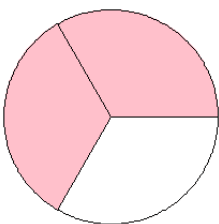
8.



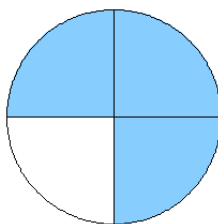
9.



10.



11.



12.

