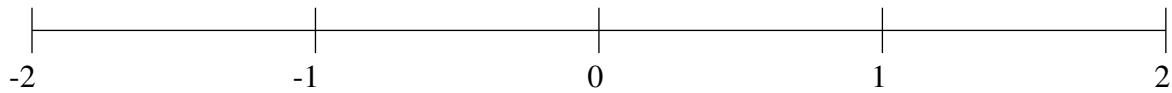


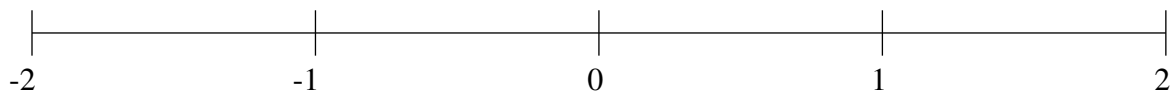
Ordenar Fracciones (G)

Ordene cada conjunto de fracciones usando la recta numérica.

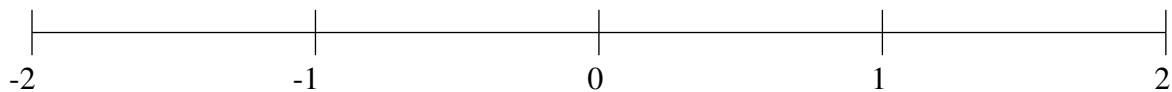
$$1\frac{1}{5}, 1\frac{3}{4}, \frac{5}{6}, -1\frac{1}{8}, -\frac{1}{5}, \frac{3}{5}, -\frac{4}{7}, \frac{1}{3}$$



$$-\frac{1}{5}, -1\frac{3}{8}, -\frac{1}{2}, -\frac{5}{6}, \frac{2}{3}, \frac{7}{8}, 1\frac{1}{3}, -1\frac{2}{3}$$



$$1\frac{1}{2}, -\frac{6}{7}, \frac{2}{3}, -1\frac{4}{5}, -\frac{1}{6}, \frac{1}{4}, 1\frac{4}{5}, -\frac{1}{2}$$

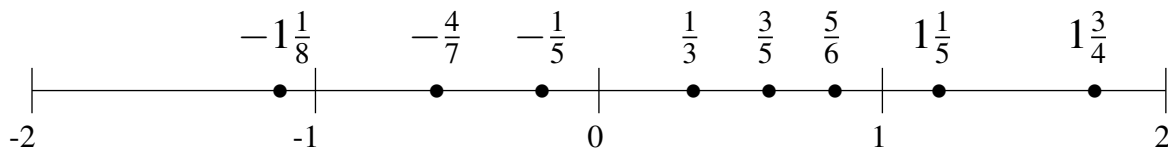


Ordenar Fracciones (G) Respuestas

Ordene cada conjunto de fracciones usando la recta numérica.

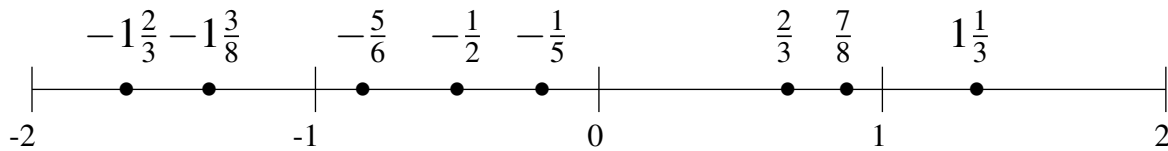
$$1\frac{1}{5}, 1\frac{3}{4}, \frac{5}{6}, -1\frac{1}{8}, -\frac{1}{5}, \frac{3}{5}, -\frac{4}{7}, \frac{1}{3}$$

$$-1\frac{1}{8}, -\frac{4}{7}, -\frac{1}{5}, \frac{1}{3}, \frac{3}{5}, \frac{5}{6}, 1\frac{1}{5}, 1\frac{3}{4}$$



$$-\frac{1}{5}, -1\frac{3}{8}, -\frac{1}{2}, -\frac{5}{6}, \frac{2}{3}, \frac{7}{8}, 1\frac{1}{3}, -1\frac{2}{3}$$

$$-1\frac{2}{3}, -1\frac{3}{8}, -\frac{5}{6}, -\frac{1}{2}, -\frac{1}{5}, \frac{2}{3}, \frac{7}{8}, 1\frac{1}{3}$$



$$1\frac{1}{2}, -\frac{6}{7}, \frac{2}{3}, -1\frac{4}{5}, -\frac{1}{6}, \frac{1}{4}, 1\frac{4}{5}, -\frac{1}{2}$$

$$-1\frac{4}{5}, -\frac{6}{7}, -\frac{1}{2}, -\frac{1}{6}, \frac{1}{4}, \frac{2}{3}, 1\frac{1}{2}, 1\frac{4}{5}$$

