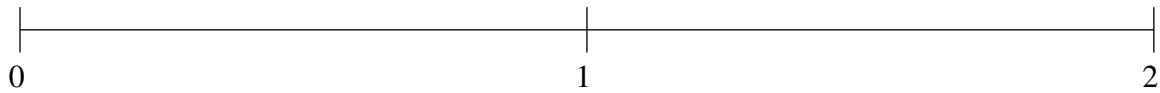


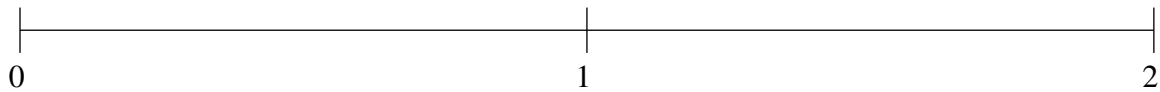
## Ordenar Fracciones (D)

Ordene cada conjunto de fracciones usando la recta numérica.

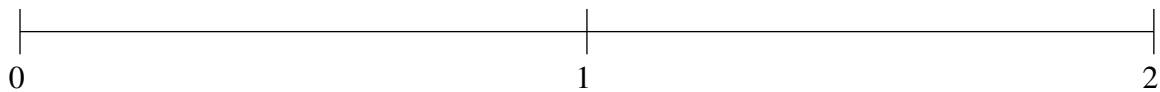
$$1\frac{1}{8}, \frac{1}{23}, 1\frac{31}{33}, \frac{4}{9}, 1\frac{7}{13}$$



$$\frac{4}{23}, 1\frac{9}{14}, \frac{3}{5}, 1\frac{27}{28}, 1\frac{4}{13}$$



$$1\frac{3}{13}, \frac{1}{6}, 1\frac{39}{58}, 1\frac{7}{8}, \frac{1}{2}$$

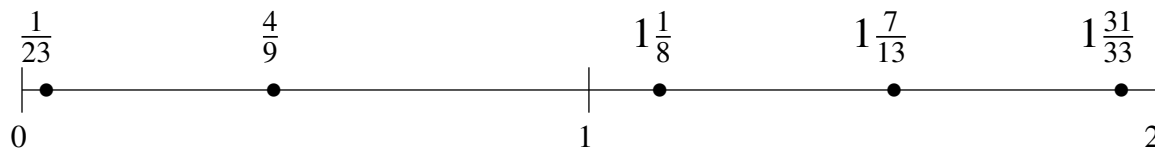


## Ordenar Fracciones (D) Respuestas

Ordene cada conjunto de fracciones usando la recta numérica.

$$1\frac{1}{8}, \frac{1}{23}, 1\frac{31}{33}, \frac{4}{9}, 1\frac{7}{13}$$

$$\frac{1}{23}, \frac{4}{9}, 1\frac{1}{8}, 1\frac{7}{13}, 1\frac{31}{33}$$



$$\frac{4}{23}, 1\frac{9}{14}, \frac{3}{5}, 1\frac{27}{28}, 1\frac{4}{13}$$

$$\frac{4}{23}, \frac{3}{5}, 1\frac{4}{13}, 1\frac{9}{14}, 1\frac{27}{28}$$



$$1\frac{3}{13}, \frac{1}{6}, 1\frac{39}{58}, 1\frac{7}{8}, \frac{1}{2}$$

$$\frac{1}{6}, \frac{1}{2}, 1\frac{3}{13}, 1\frac{39}{58}, 1\frac{7}{8}$$

