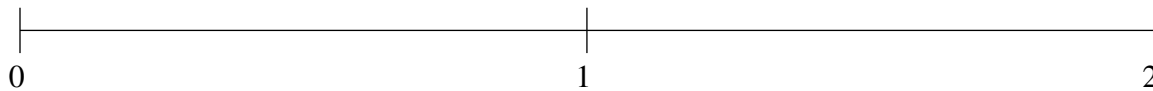


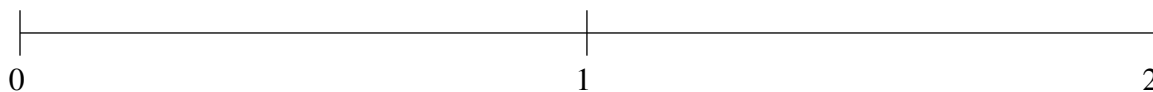
Ordenar Fracciones (D)

Ordene cada conjunto de fracciones usando la recta numérica.

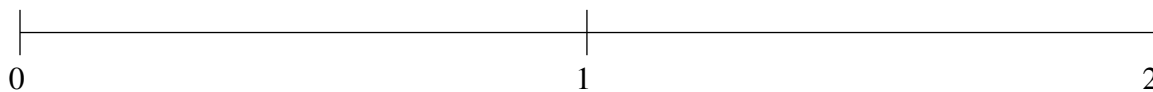
$$1\frac{5}{6}, \frac{2}{3}, \frac{1}{3}, 1\frac{1}{3}, \frac{1}{30}$$



$$1\frac{1}{6}, 1\frac{1}{2}, 1\frac{5}{6}, \frac{1}{4}, \frac{2}{3}$$



$$1\frac{2}{5}, \frac{1}{2}, 1\frac{7}{10}, \frac{5}{6}, 1\frac{11}{12}$$



Ordenar Fracciones (D) Respuestas

Ordene cada conjunto de fracciones usando la recta numérica.

$$1\frac{5}{6}, \frac{2}{3}, \frac{1}{3}, 1\frac{1}{3}, \frac{1}{30}$$

$$\frac{1}{30}, \frac{1}{3}, \frac{2}{3}, 1\frac{1}{3}, 1\frac{5}{6}$$



$$1\frac{1}{6}, 1\frac{1}{2}, 1\frac{5}{6}, \frac{1}{4}, \frac{2}{3}$$

$$\frac{1}{4}, \frac{2}{3}, 1\frac{1}{6}, 1\frac{1}{2}, 1\frac{5}{6}$$



$$1\frac{2}{5}, \frac{1}{2}, 1\frac{7}{10}, \frac{5}{6}, 1\frac{11}{12}$$

$$\frac{1}{2}, \frac{5}{6}, 1\frac{2}{5}, 1\frac{7}{10}, 1\frac{11}{12}$$

