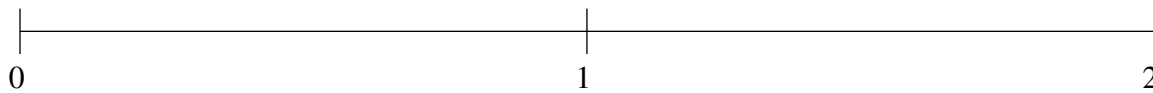


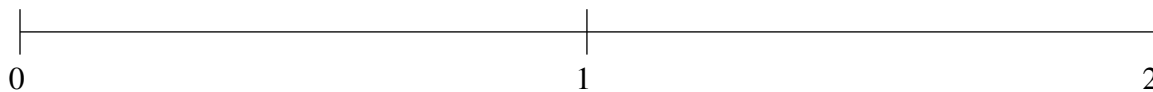
## Ordenar Fracciones (J)

Ordene cada conjunto de fracciones usando la recta numérica.

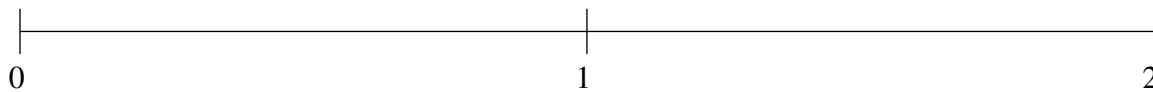
$$1\frac{1}{3}, \frac{2}{5}, 1\frac{3}{5}, \frac{1}{12}, \frac{2}{3}$$



$$\frac{13}{20}, 1\frac{1}{2}, 1\frac{1}{6}, \frac{19}{20}, \frac{2}{5}$$



$$\frac{3}{5}, 1\frac{1}{4}, 1\frac{1}{2}, \frac{9}{10}, \frac{1}{3}$$

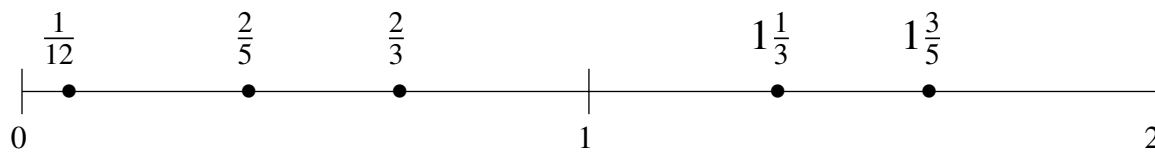


## Ordenar Fracciones (J) Respuestas

Ordene cada conjunto de fracciones usando la recta numérica.

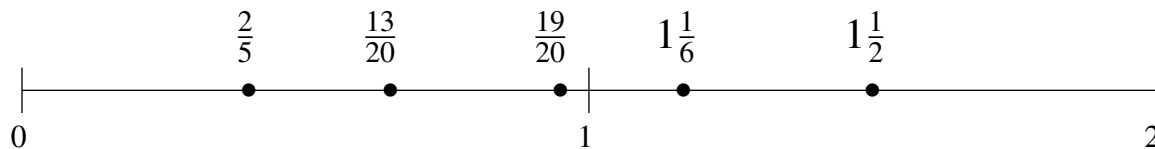
$$1\frac{1}{3}, \frac{2}{5}, 1\frac{3}{5}, \frac{1}{12}, \frac{2}{3}$$

$$\frac{1}{12}, \frac{2}{5}, \frac{2}{3}, 1\frac{1}{3}, 1\frac{3}{5}$$



$$\frac{13}{20}, 1\frac{1}{2}, 1\frac{1}{6}, \frac{19}{20}, \frac{2}{5}$$

$$\frac{2}{5}, \frac{13}{20}, \frac{19}{20}, 1\frac{1}{6}, 1\frac{1}{2}$$



$$\frac{3}{5}, 1\frac{1}{4}, 1\frac{1}{2}, \frac{9}{10}, \frac{1}{3}$$

$$\frac{1}{3}, \frac{3}{5}, \frac{9}{10}, 1\frac{1}{4}, 1\frac{1}{2}$$

