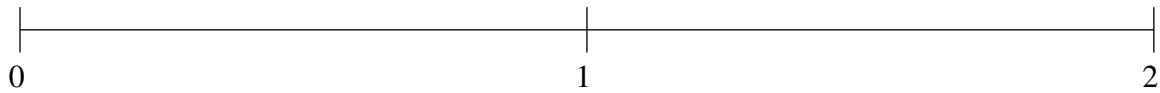


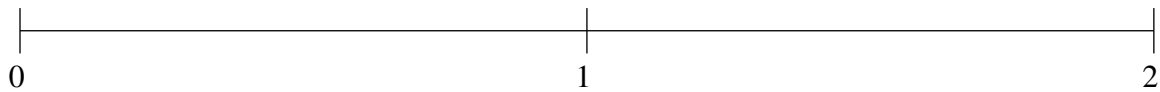
Ordenar Fracciones (A)

Ordene cada conjunto de fracciones usando la recta numérica.

$$\frac{1}{2}, 1\frac{1}{4}, 1\frac{2}{59}, \frac{9}{11}, \frac{1}{10}$$



$$\frac{11}{12}, 1\frac{18}{49}, \frac{16}{31}, 1\frac{38}{39}, \frac{1}{4}$$



$$\frac{37}{49}, \frac{1}{3}, \frac{5}{51}, 1\frac{18}{29}, 1\frac{1}{32}$$

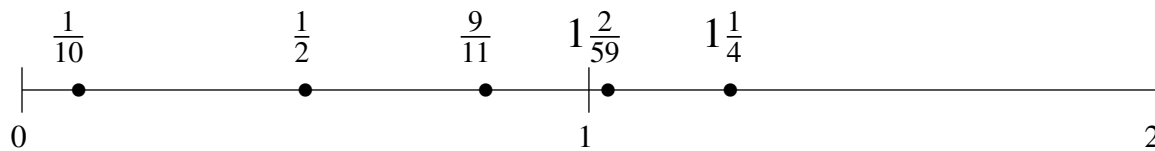


Ordenar Fracciones (A) Respuestas

Ordene cada conjunto de fracciones usando la recta numérica.

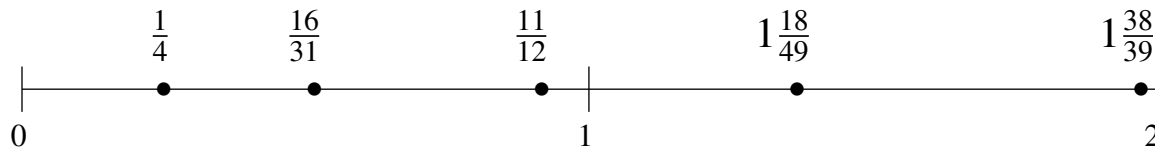
$$\frac{1}{2}, 1\frac{1}{4}, 1\frac{2}{59}, \frac{9}{11}, \frac{1}{10}$$

$$\frac{1}{10}, \frac{1}{2}, \frac{9}{11}, 1\frac{2}{59}, 1\frac{1}{4}$$



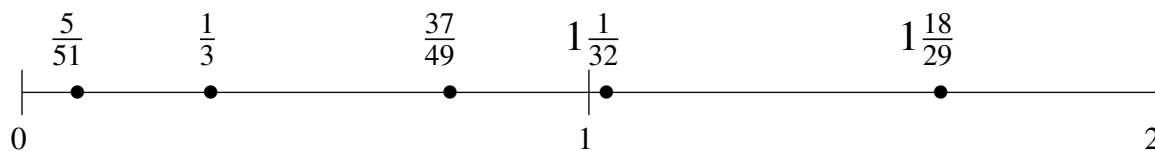
$$\frac{11}{12}, 1\frac{18}{49}, \frac{16}{31}, 1\frac{38}{39}, \frac{1}{4}$$

$$\frac{1}{4}, \frac{16}{31}, \frac{11}{12}, 1\frac{18}{49}, 1\frac{38}{39}$$



$$\frac{37}{49}, \frac{1}{3}, \frac{5}{51}, 1\frac{18}{29}, 1\frac{1}{32}$$

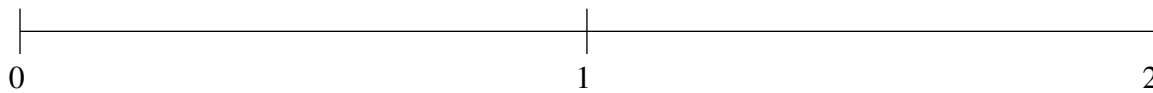
$$\frac{5}{51}, \frac{1}{3}, \frac{37}{49}, 1\frac{1}{32}, 1\frac{18}{29}$$



Ordenar Fracciones (B)

Ordene cada conjunto de fracciones usando la recta numérica.

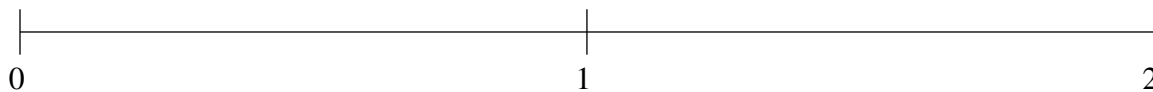
$$\frac{2}{25}, \frac{41}{43}, 1\frac{1}{2}, 1\frac{7}{8}, 1\frac{1}{5}$$



$$1\frac{1}{4}, \frac{29}{32}, 1\frac{35}{43}, \frac{2}{5}, \frac{33}{50}$$



$$\frac{1}{5}, 1\frac{9}{17}, 1\frac{3}{4}, \frac{2}{3}, \frac{8}{19}$$

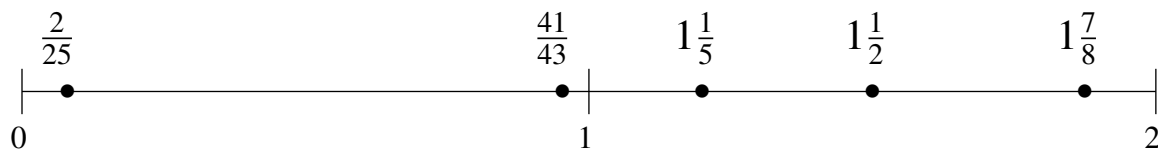


Ordenar Fracciones (B) Respuestas

Ordene cada conjunto de fracciones usando la recta numérica.

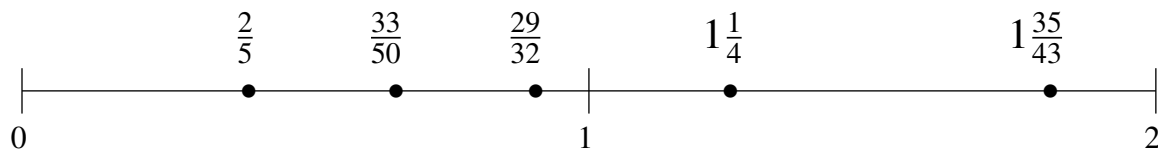
$$\frac{2}{25}, \frac{41}{43}, 1\frac{1}{2}, 1\frac{7}{8}, 1\frac{1}{5}$$

$$\frac{2}{25}, \frac{41}{43}, 1\frac{1}{5}, 1\frac{1}{2}, 1\frac{7}{8}$$



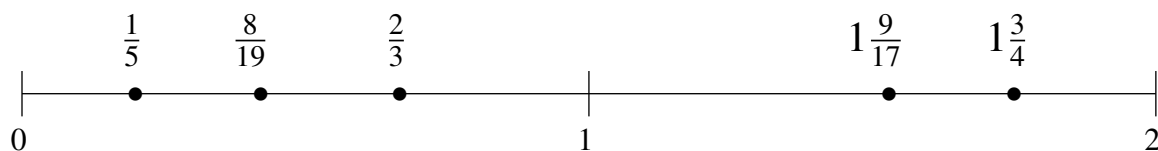
$$1\frac{1}{4}, \frac{29}{32}, 1\frac{35}{43}, \frac{2}{5}, \frac{33}{50}$$

$$\frac{2}{5}, \frac{33}{50}, \frac{29}{32}, 1\frac{1}{4}, 1\frac{35}{43}$$



$$\frac{1}{5}, 1\frac{9}{17}, 1\frac{3}{4}, \frac{2}{3}, \frac{8}{19}$$

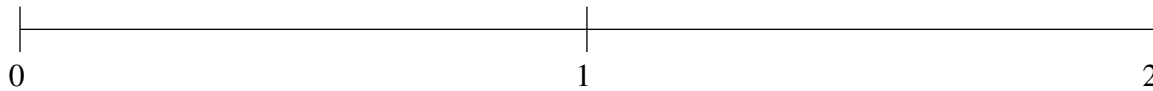
$$\frac{1}{5}, \frac{8}{19}, \frac{2}{3}, 1\frac{9}{17}, 1\frac{3}{4}$$



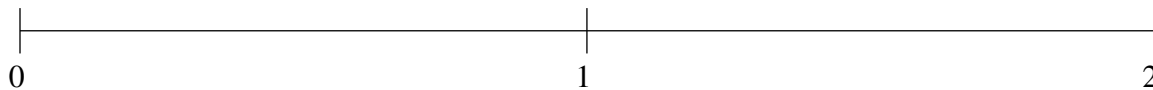
Ordenar Fracciones (C)

Ordene cada conjunto de fracciones usando la recta numérica.

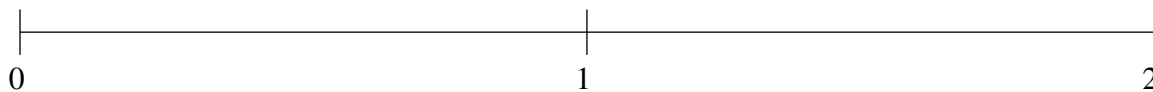
$$1\frac{1}{3}, \frac{13}{35}, 1\frac{1}{16}, 1\frac{30}{53}, \frac{28}{37}$$



$$1\frac{14}{17}, 1\frac{5}{18}, \frac{43}{55}, 1\frac{1}{2}, \frac{4}{9}$$



$$\frac{17}{19}, 1\frac{3}{4}, 1\frac{1}{2}, \frac{2}{41}, \frac{2}{3}$$

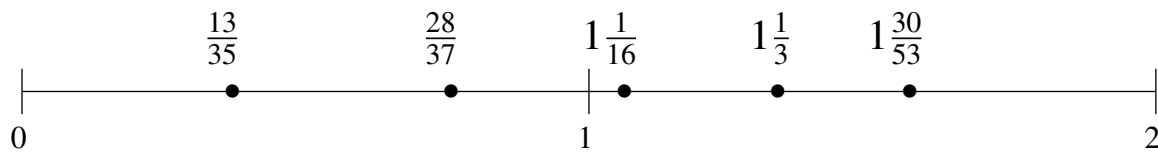


Ordenar Fracciones (C) Respuestas

Ordene cada conjunto de fracciones usando la recta numérica.

$$1\frac{1}{3}, \frac{13}{35}, 1\frac{1}{16}, 1\frac{30}{53}, \frac{28}{37}$$

$$\frac{13}{35}, \frac{28}{37}, 1\frac{1}{16}, 1\frac{1}{3}, 1\frac{30}{53}$$



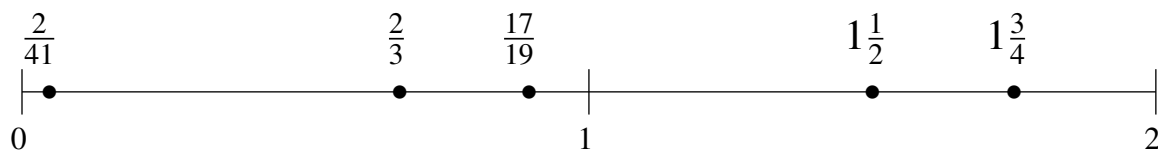
$$1\frac{14}{17}, 1\frac{5}{18}, \frac{43}{55}, 1\frac{1}{2}, \frac{4}{9}$$

$$\frac{4}{9}, \frac{43}{55}, 1\frac{5}{18}, 1\frac{1}{2}, 1\frac{14}{17}$$



$$\frac{17}{19}, 1\frac{3}{4}, 1\frac{1}{2}, \frac{2}{41}, \frac{2}{3}$$

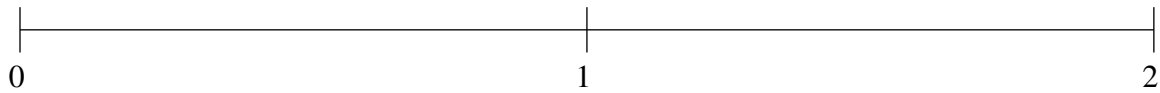
$$\frac{2}{41}, \frac{2}{3}, \frac{17}{19}, 1\frac{1}{2}, 1\frac{3}{4}$$



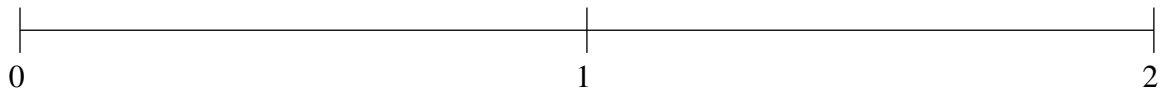
Ordenar Fracciones (D)

Ordene cada conjunto de fracciones usando la recta numérica.

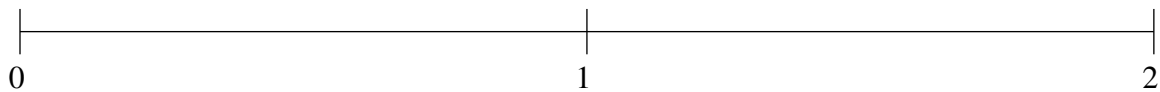
$$1\frac{1}{8}, \frac{1}{23}, 1\frac{31}{33}, \frac{4}{9}, 1\frac{7}{13}$$



$$\frac{4}{23}, 1\frac{9}{14}, \frac{3}{5}, 1\frac{27}{28}, 1\frac{4}{13}$$



$$1\frac{3}{13}, \frac{1}{6}, 1\frac{39}{58}, 1\frac{7}{8}, \frac{1}{2}$$

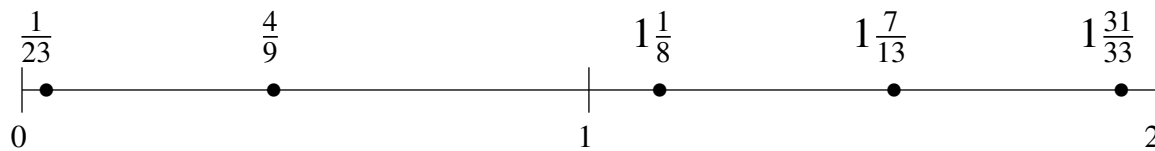


Ordenar Fracciones (D) Respuestas

Ordene cada conjunto de fracciones usando la recta numérica.

$$1\frac{1}{8}, \frac{1}{23}, 1\frac{31}{33}, \frac{4}{9}, 1\frac{7}{13}$$

$$\frac{1}{23}, \frac{4}{9}, 1\frac{1}{8}, 1\frac{7}{13}, 1\frac{31}{33}$$



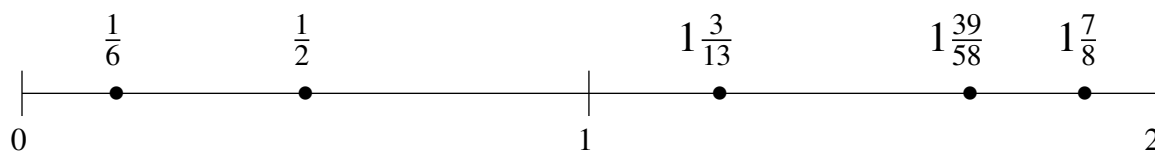
$$\frac{4}{23}, 1\frac{9}{14}, \frac{3}{5}, 1\frac{27}{28}, 1\frac{4}{13}$$

$$\frac{4}{23}, \frac{3}{5}, 1\frac{4}{13}, 1\frac{9}{14}, 1\frac{27}{28}$$



$$1\frac{3}{13}, \frac{1}{6}, 1\frac{39}{58}, 1\frac{7}{8}, \frac{1}{2}$$

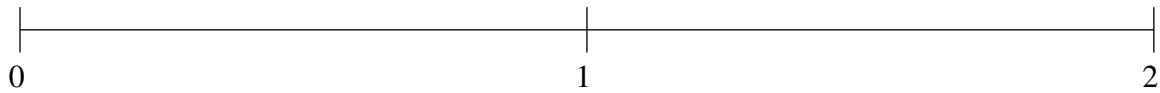
$$\frac{1}{6}, \frac{1}{2}, 1\frac{3}{13}, 1\frac{39}{58}, 1\frac{7}{8}$$



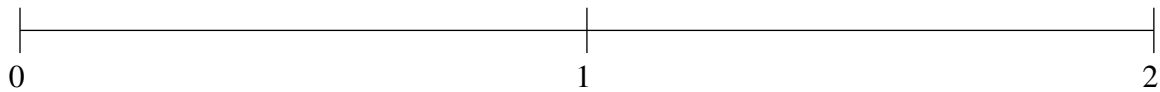
Ordenar Fracciones (E)

Ordene cada conjunto de fracciones usando la recta numérica.

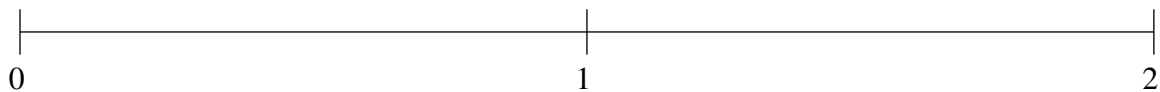
$$1\frac{31}{54}, 1\frac{8}{9}, 1\frac{2}{11}, \frac{7}{11}, \frac{1}{4}$$



$$\frac{4}{5}, \frac{1}{3}, 1\frac{13}{34}, 1\frac{8}{9}, \frac{4}{7}$$



$$\frac{2}{5}, \frac{1}{19}, \frac{2}{3}, 1\frac{17}{46}, 1\frac{9}{14}$$

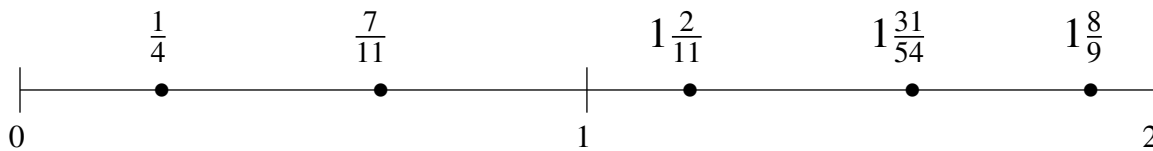


Ordenar Fracciones (E) Respuestas

Ordene cada conjunto de fracciones usando la recta numérica.

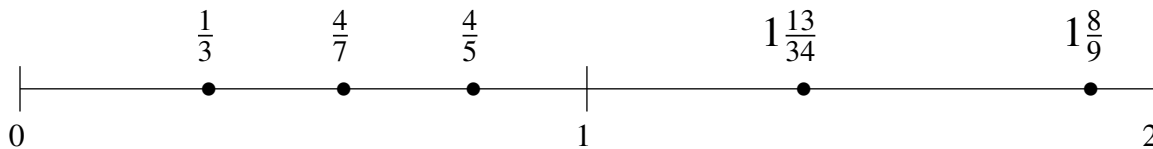
$$1\frac{31}{54}, 1\frac{8}{9}, 1\frac{2}{11}, \frac{7}{11}, \frac{1}{4}$$

$$\frac{1}{4}, \frac{7}{11}, 1\frac{2}{11}, 1\frac{31}{54}, 1\frac{8}{9}$$



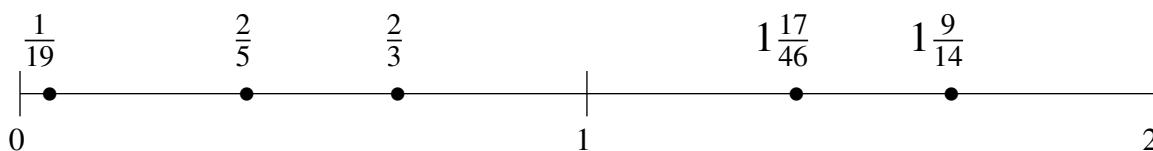
$$\frac{4}{5}, \frac{1}{3}, 1\frac{13}{34}, 1\frac{8}{9}, \frac{4}{7}$$

$$\frac{1}{3}, \frac{4}{7}, \frac{4}{5}, 1\frac{13}{34}, 1\frac{8}{9}$$



$$\frac{2}{5}, \frac{1}{19}, \frac{2}{3}, 1\frac{17}{46}, 1\frac{9}{14}$$

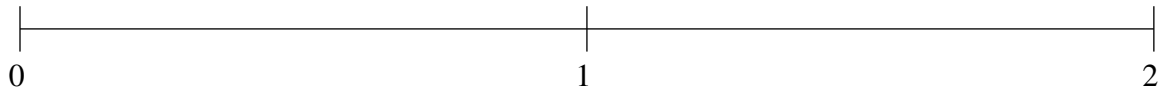
$$\frac{1}{19}, \frac{2}{5}, \frac{2}{3}, 1\frac{17}{46}, 1\frac{9}{14}$$



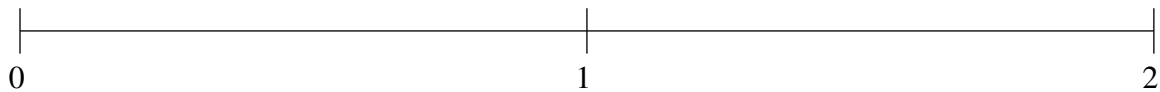
Ordenar Fracciones (F)

Ordene cada conjunto de fracciones usando la recta numérica.

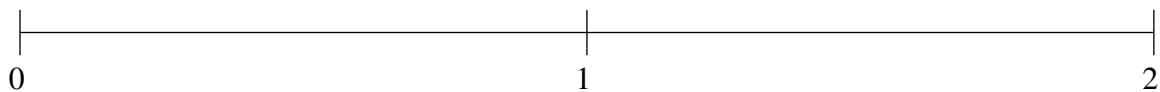
$$1\frac{5}{29}, 1\frac{9}{19}, \frac{8}{11}, 1\frac{30}{31}, \frac{1}{29}$$



$$\frac{1}{39}, \frac{3}{4}, 1\frac{11}{12}, 1\frac{14}{31}, 1\frac{1}{8}$$



$$\frac{10}{11}, 1\frac{1}{3}, 1\frac{5}{6}, \frac{2}{3}, \frac{1}{8}$$

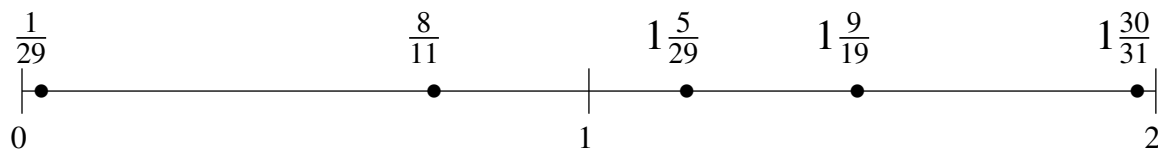


Ordenar Fracciones (F) Respuestas

Ordene cada conjunto de fracciones usando la recta numérica.

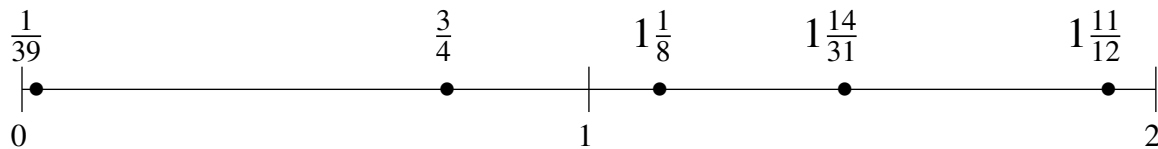
$$1\frac{5}{29}, 1\frac{9}{19}, \frac{8}{11}, 1\frac{30}{31}, \frac{1}{29}$$

$$\frac{1}{29}, \frac{8}{11}, 1\frac{5}{29}, 1\frac{9}{19}, 1\frac{30}{31}$$



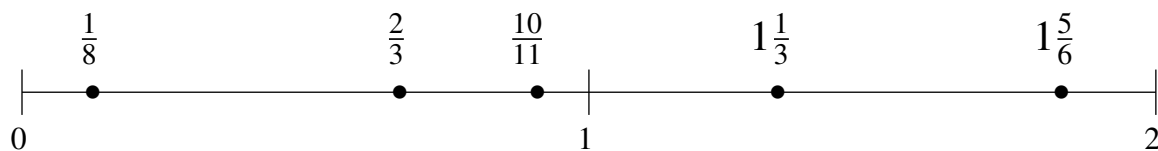
$$\frac{1}{39}, \frac{3}{4}, 1\frac{11}{12}, 1\frac{14}{31}, 1\frac{1}{8}$$

$$\frac{1}{39}, \frac{3}{4}, 1\frac{1}{8}, 1\frac{14}{31}, 1\frac{11}{12}$$



$$\frac{10}{11}, 1\frac{1}{3}, 1\frac{5}{6}, \frac{2}{3}, \frac{1}{8}$$

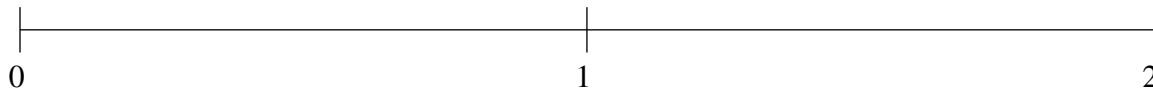
$$\frac{1}{8}, \frac{2}{3}, \frac{10}{11}, 1\frac{1}{3}, 1\frac{5}{6}$$



Ordenar Fracciones (G)

Ordene cada conjunto de fracciones usando la recta numérica.

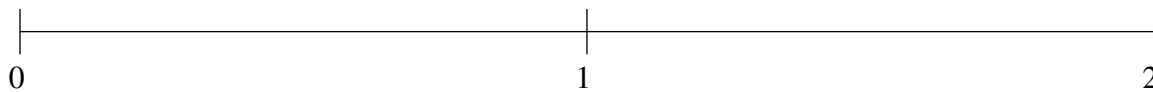
$$1\frac{1}{2}, \frac{2}{31}, \frac{4}{9}, \frac{2}{3}, 1\frac{40}{41}$$



$$1\frac{10}{11}, 1\frac{1}{2}, \frac{1}{6}, \frac{11}{24}, \frac{9}{11}$$



$$1\frac{14}{15}, 1\frac{1}{12}, 1\frac{3}{5}, \frac{1}{20}, \frac{2}{3}$$



Ordenar Fracciones (G) Respuestas

Ordene cada conjunto de fracciones usando la recta numérica.

$$1\frac{1}{2}, \frac{2}{31}, \frac{4}{9}, \frac{2}{3}, 1\frac{40}{41}$$

$$\frac{2}{31}, \frac{4}{9}, \frac{2}{3}, 1\frac{1}{2}, 1\frac{40}{41}$$



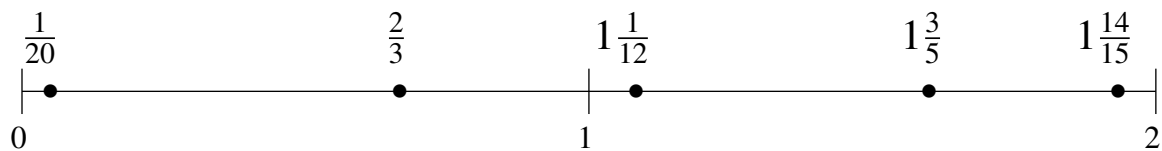
$$1\frac{10}{11}, 1\frac{1}{2}, \frac{1}{6}, \frac{11}{24}, \frac{9}{11}$$

$$\frac{1}{6}, \frac{11}{24}, \frac{9}{11}, 1\frac{1}{2}, 1\frac{10}{11}$$



$$1\frac{14}{15}, 1\frac{1}{12}, 1\frac{3}{5}, \frac{1}{20}, \frac{2}{3}$$

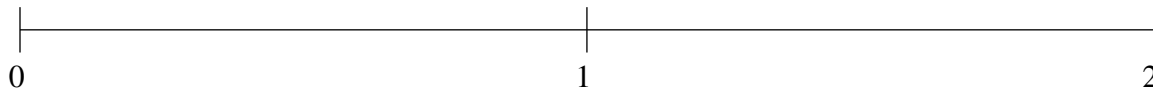
$$\frac{1}{20}, \frac{2}{3}, 1\frac{1}{12}, 1\frac{3}{5}, 1\frac{14}{15}$$



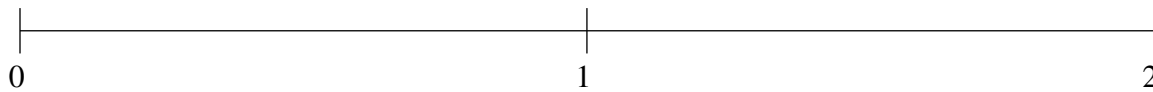
Ordenar Fracciones (H)

Ordene cada conjunto de fracciones usando la recta numérica.

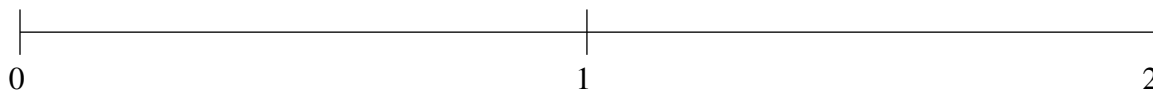
$$1\frac{2}{3}, \frac{1}{19}, \frac{1}{2}, \frac{4}{5}, 1\frac{10}{11}$$



$$\frac{1}{2}, 1\frac{6}{7}, \frac{22}{25}, 1\frac{3}{8}, 1\frac{5}{33}$$



$$1\frac{1}{2}, 1\frac{3}{13}, \frac{49}{58}, \frac{4}{9}, 1\frac{20}{21}$$

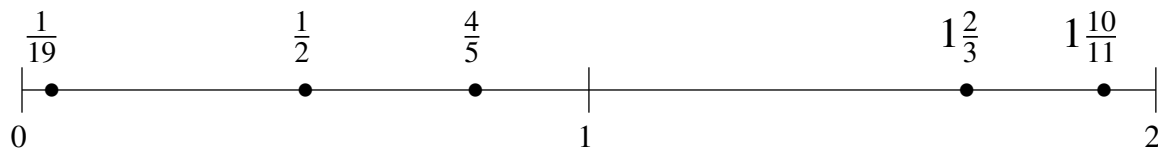


Ordenar Fracciones (H) Respuestas

Ordene cada conjunto de fracciones usando la recta numérica.

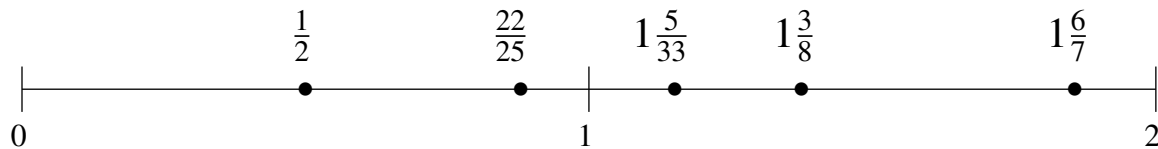
$$1\frac{2}{3}, \frac{1}{19}, \frac{1}{2}, \frac{4}{5}, 1\frac{10}{11}$$

$$\frac{1}{19}, \frac{1}{2}, \frac{4}{5}, 1\frac{2}{3}, 1\frac{10}{11}$$



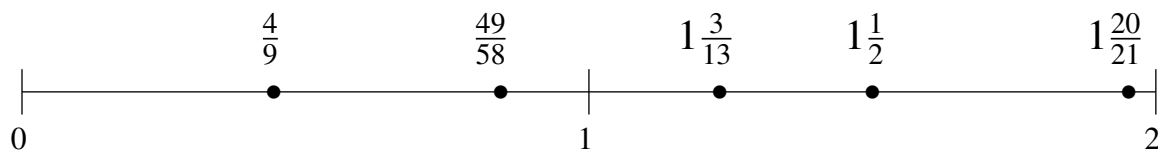
$$\frac{1}{2}, 1\frac{6}{7}, \frac{22}{25}, 1\frac{3}{8}, 1\frac{5}{33}$$

$$\frac{1}{2}, \frac{22}{25}, 1\frac{5}{33}, 1\frac{3}{8}, 1\frac{6}{7}$$



$$1\frac{1}{2}, 1\frac{3}{13}, \frac{49}{58}, \frac{4}{9}, 1\frac{20}{21}$$

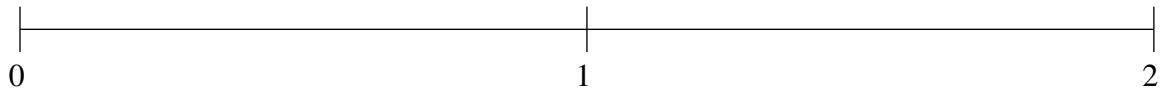
$$\frac{4}{9}, \frac{49}{58}, 1\frac{3}{13}, 1\frac{1}{2}, 1\frac{20}{21}$$



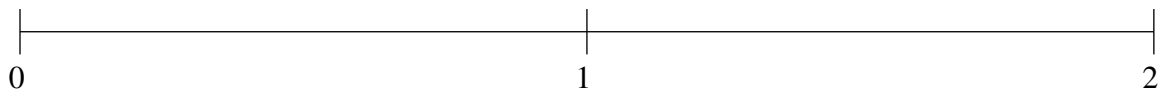
Ordenar Fracciones (I)

Ordene cada conjunto de fracciones usando la recta numérica.

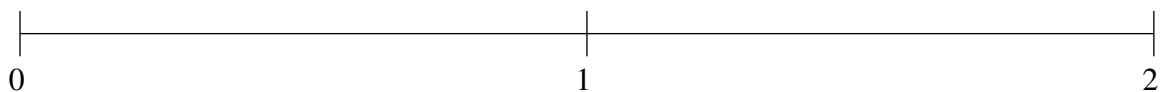
$$\frac{3}{8}, \frac{4}{5}, 1\frac{11}{13}, \frac{1}{7}, 1\frac{4}{27}$$



$$1\frac{2}{7}, 1\frac{1}{20}, \frac{18}{31}, \frac{1}{3}, 1\frac{14}{23}$$



$$1\frac{11}{28}, 1\frac{8}{53}, \frac{29}{39}, \frac{1}{9}, 1\frac{3}{5}$$

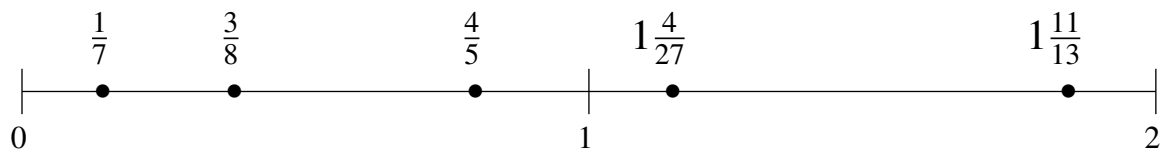


Ordenar Fracciones (I) Respuestas

Ordene cada conjunto de fracciones usando la recta numérica.

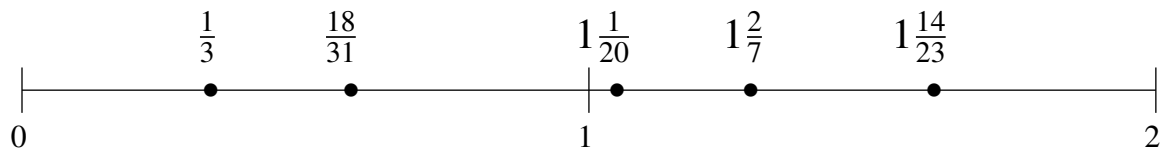
$$\frac{3}{8}, \frac{4}{5}, 1\frac{11}{13}, \frac{1}{7}, 1\frac{4}{27}$$

$$\frac{1}{7}, \frac{3}{8}, \frac{4}{5}, 1\frac{4}{27}, 1\frac{11}{13}$$



$$1\frac{2}{7}, 1\frac{1}{20}, \frac{18}{31}, \frac{1}{3}, 1\frac{14}{23}$$

$$\frac{1}{3}, \frac{18}{31}, 1\frac{1}{20}, 1\frac{2}{7}, 1\frac{14}{23}$$



$$1\frac{11}{28}, 1\frac{8}{53}, \frac{29}{39}, \frac{1}{9}, 1\frac{3}{5}$$

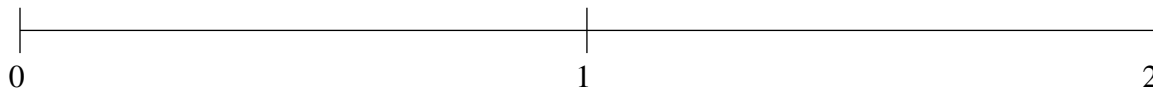
$$\frac{1}{9}, \frac{29}{39}, 1\frac{8}{53}, 1\frac{11}{28}, 1\frac{3}{5}$$



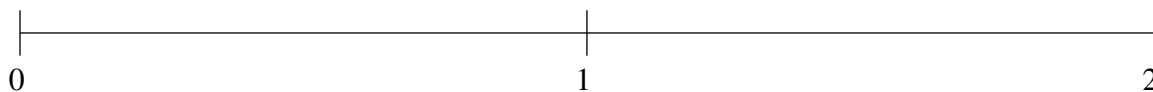
Ordenar Fracciones (J)

Ordene cada conjunto de fracciones usando la recta numérica.

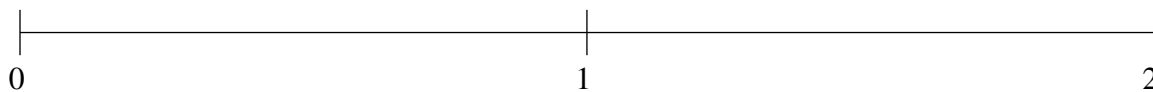
$$\frac{1}{5}, \frac{11}{27}, 1\frac{1}{2}, 1\frac{11}{12}, 1\frac{5}{7}$$



$$\frac{1}{15}, 1\frac{19}{31}, 1\frac{3}{13}, \frac{13}{48}, \frac{5}{6}$$



$$\frac{5}{6}, 1\frac{4}{5}, \frac{1}{14}, 1\frac{1}{4}, 1\frac{1}{2}$$

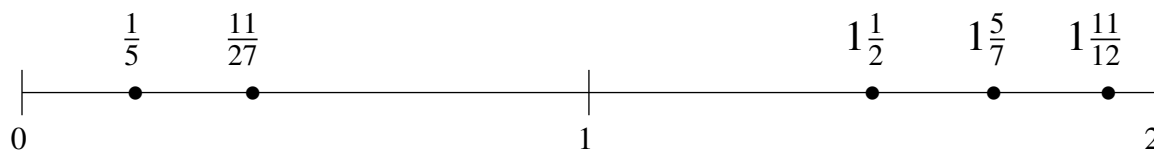


Ordenar Fracciones (J) Respuestas

Ordene cada conjunto de fracciones usando la recta numérica.

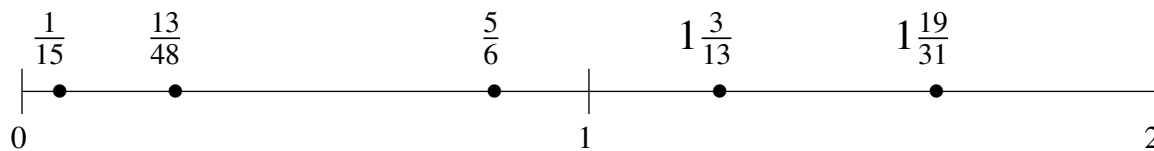
$$\frac{1}{5}, \frac{11}{27}, 1\frac{1}{2}, 1\frac{11}{12}, 1\frac{5}{7}$$

$$\frac{1}{5}, \frac{11}{27}, 1\frac{1}{2}, 1\frac{5}{7}, 1\frac{11}{12}$$



$$\frac{1}{15}, 1\frac{19}{31}, 1\frac{3}{13}, \frac{13}{48}, \frac{5}{6}$$

$$\frac{1}{15}, \frac{13}{48}, \frac{5}{6}, 1\frac{3}{13}, 1\frac{19}{31}$$



$$\frac{5}{6}, 1\frac{4}{5}, \frac{1}{14}, 1\frac{1}{4}, 1\frac{1}{2}$$

$$\frac{1}{14}, \frac{5}{6}, 1\frac{1}{4}, 1\frac{1}{2}, 1\frac{4}{5}$$

