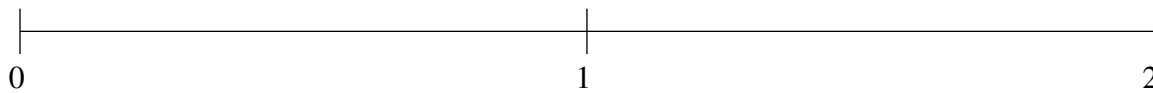


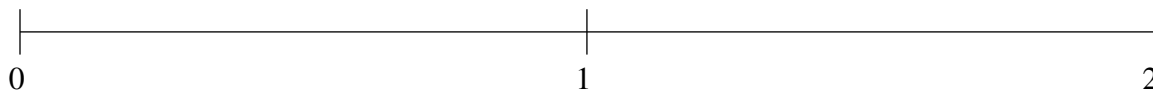
## Ordenar Fracciones (C)

Ordene cada conjunto de fracciones usando la recta numérica.

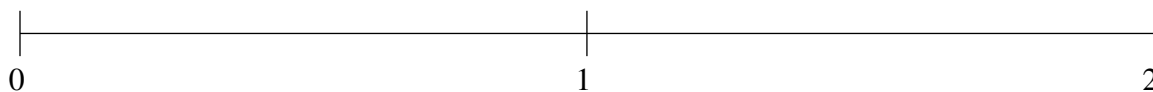
$$1\frac{1}{10}, \frac{1}{5}, 1\frac{3}{4}, \frac{1}{2}, \frac{4}{5}$$



$$1\frac{1}{2}, 1\frac{1}{4}, \frac{3}{4}, 1\frac{9}{10}, \frac{1}{5}$$



$$1\frac{9}{10}, 1\frac{3}{5}, \frac{1}{2}, \frac{17}{20}, \frac{1}{5}$$

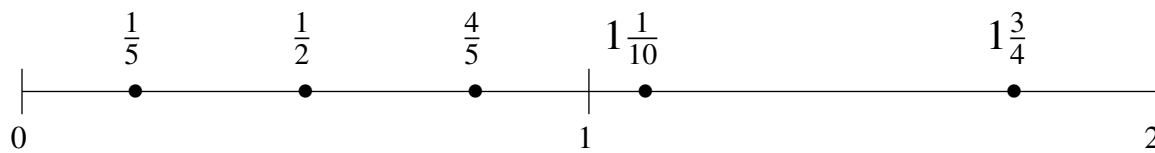


## Ordenar Fracciones (C) Respuestas

Ordene cada conjunto de fracciones usando la recta numérica.

$$1\frac{1}{10}, \frac{1}{5}, 1\frac{3}{4}, \frac{1}{2}, \frac{4}{5}$$

$$\frac{1}{5}, \frac{1}{2}, \frac{4}{5}, 1\frac{1}{10}, 1\frac{3}{4}$$



$$1\frac{1}{2}, 1\frac{1}{4}, \frac{3}{4}, 1\frac{9}{10}, \frac{1}{5}$$

$$\frac{1}{5}, \frac{3}{4}, 1\frac{1}{4}, 1\frac{1}{2}, 1\frac{9}{10}$$



$$1\frac{9}{10}, 1\frac{3}{5}, \frac{1}{2}, \frac{17}{20}, \frac{1}{5}$$

$$\frac{1}{5}, \frac{1}{2}, \frac{17}{20}, 1\frac{3}{5}, 1\frac{9}{10}$$

