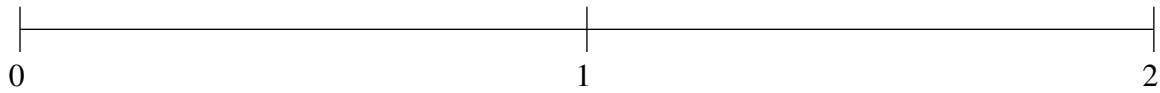


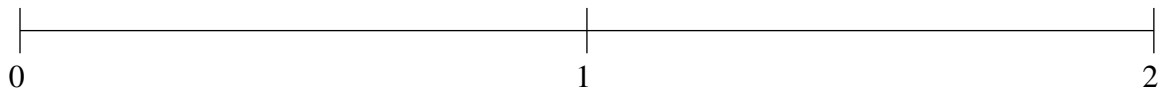
Ordenar Fracciones (G)

Ordene cada conjunto de fracciones usando la recta numérica.

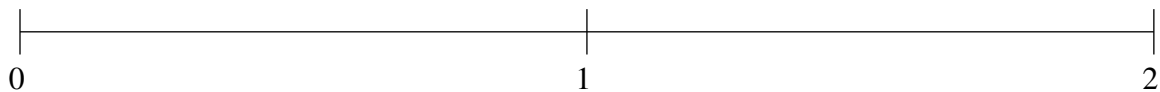
$$1\frac{3}{4}, 1\frac{1}{2}, \frac{4}{5}, \frac{1}{2}, \frac{1}{10}$$



$$1\frac{16}{25}, 1\frac{3}{10}, \frac{1}{2}, \frac{1}{20}, \frac{3}{4}$$



$$1\frac{1}{5}, \frac{1}{2}, \frac{3}{4}, 1\frac{24}{25}, 1\frac{1}{2}$$

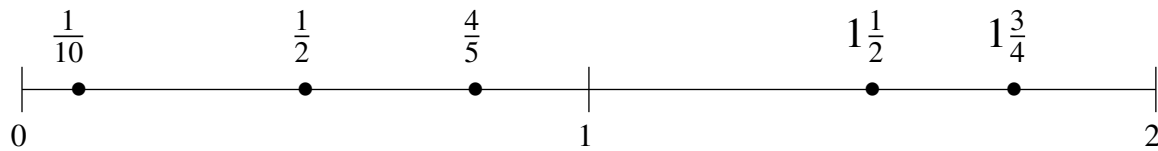


Ordenar Fracciones (G) Respuestas

Ordene cada conjunto de fracciones usando la recta numérica.

$$1\frac{3}{4}, 1\frac{1}{2}, \frac{4}{5}, \frac{1}{2}, \frac{1}{10}$$

$$\frac{1}{10}, \frac{1}{2}, \frac{4}{5}, 1\frac{1}{2}, 1\frac{3}{4}$$



$$1\frac{16}{25}, 1\frac{3}{10}, \frac{1}{2}, \frac{1}{20}, \frac{3}{4}$$

$$\frac{1}{20}, \frac{1}{2}, \frac{3}{4}, 1\frac{3}{10}, 1\frac{16}{25}$$



$$1\frac{1}{5}, \frac{1}{2}, \frac{3}{4}, 1\frac{24}{25}, 1\frac{1}{2}$$

$$\frac{1}{2}, \frac{3}{4}, 1\frac{1}{5}, 1\frac{1}{2}, 1\frac{24}{25}$$

