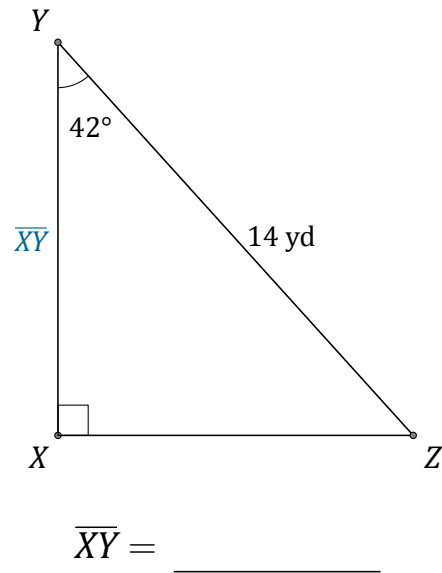
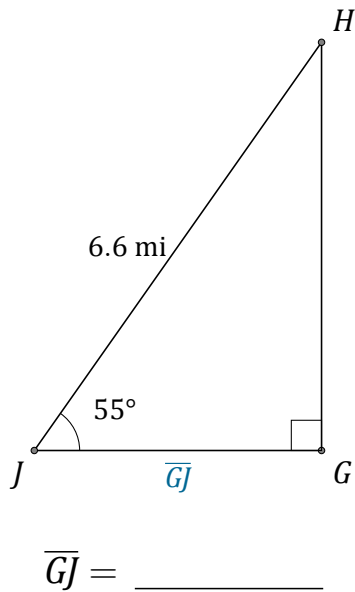
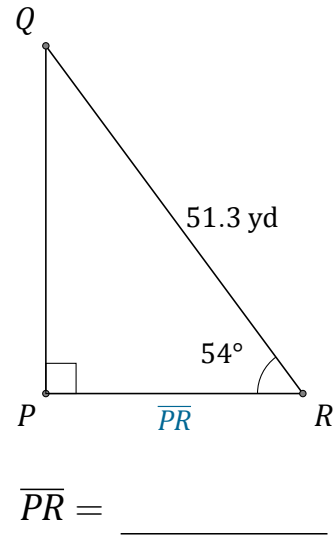
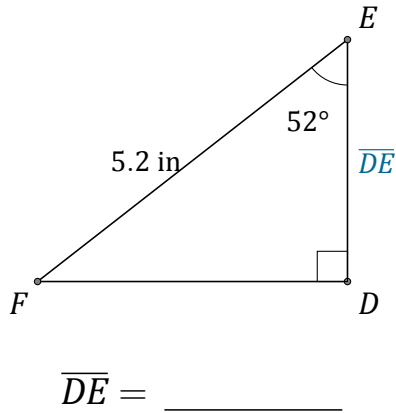


Función Coseno (D)

Nombre: _____

Fecha: _____

Calcule los valores de los lados usando la función coseno: $\cos(\alpha) = \frac{C.A.}{H}$

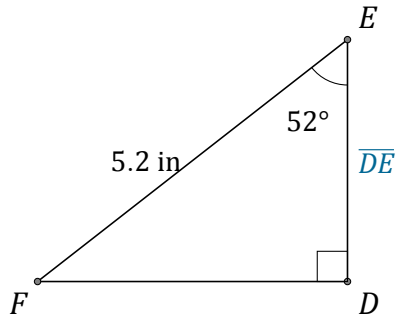


Función Coseno (D) Respuestas

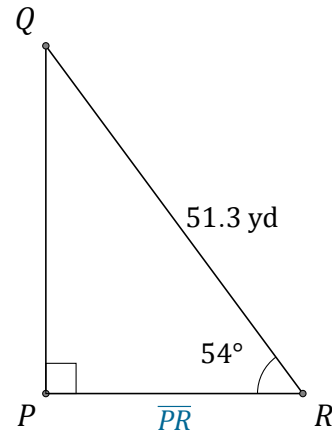
Nombre: _____

Fecha: _____

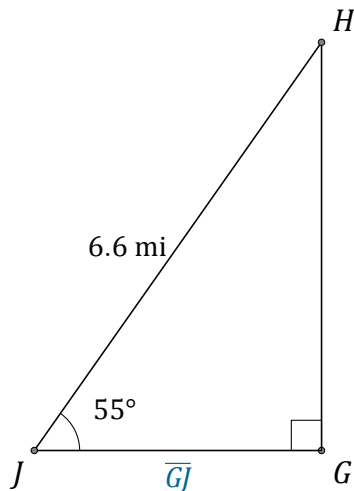
Calcule los valores de los lados usando la función coseno: $\cos(\alpha) = \frac{C.A.}{H}$



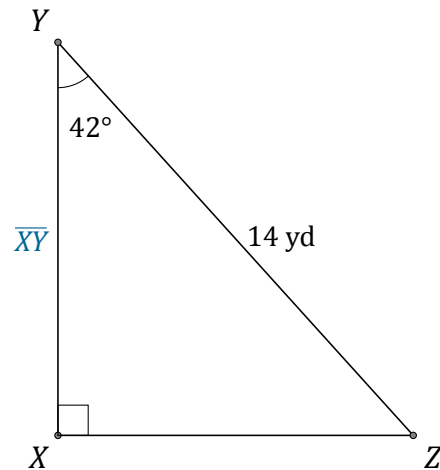
$$\overline{DE} = \underline{3.2 \text{ in}}$$



$$\overline{PR} = \underline{30.2 \text{ yd}}$$



$$\overline{GJ} = \underline{3.8 \text{ mi}}$$



$$\overline{XY} = \underline{10.4 \text{ yd}}$$