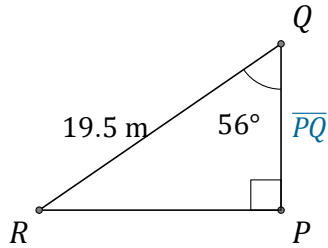


Función Coseno (E)

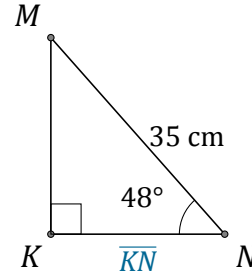
Nombre: _____

Fecha: _____

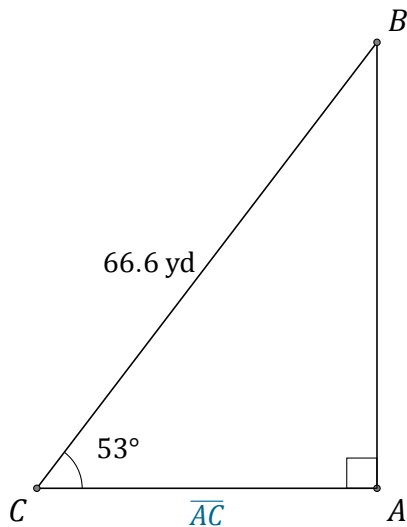
Calcule los valores de los lados usando la función coseno: $\cos(\alpha) = \frac{C.A.}{H}$



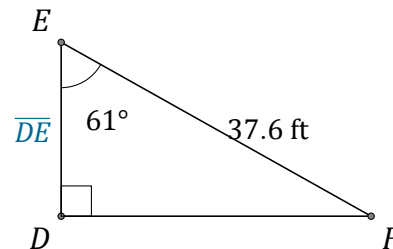
$$\overline{PQ} = \underline{\hspace{2cm}}$$



$$\overline{KN} = \underline{\hspace{2cm}}$$



$$\overline{AC} = \underline{\hspace{2cm}}$$



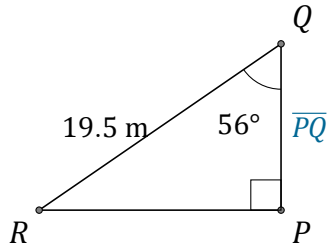
$$\overline{DE} = \underline{\hspace{2cm}}$$

Función Coseno (E) Respuestas

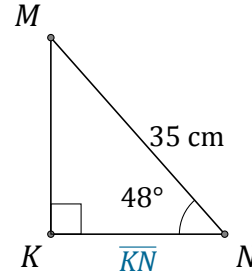
Nombre: _____

Fecha: _____

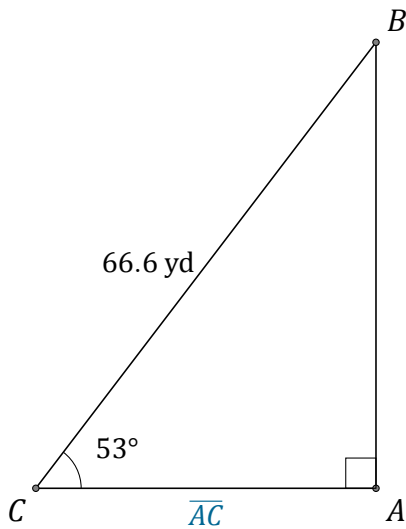
Calcule los valores de los lados usando la función coseno: $\cos(\alpha) = \frac{C.A.}{H}$



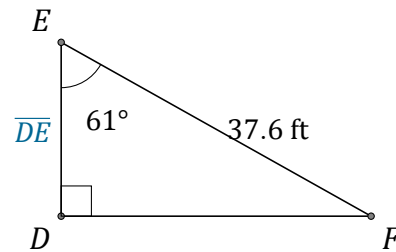
$$\overline{PQ} = \underline{10.9 \text{ m}}$$



$$\overline{KN} = \underline{23.4 \text{ cm}}$$



$$\overline{AC} = \underline{40.1 \text{ yd}}$$



$$\overline{DE} = \underline{18.2 \text{ ft}}$$