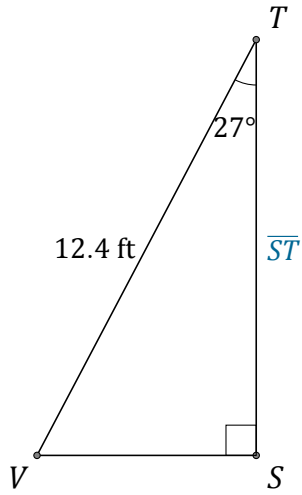


Función Coseno (I)

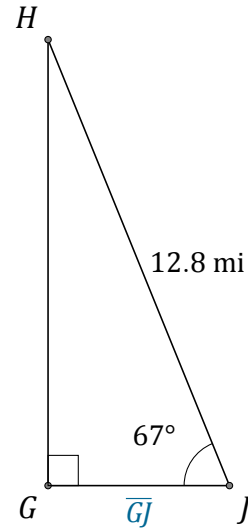
Nombre: _____

Fecha: _____

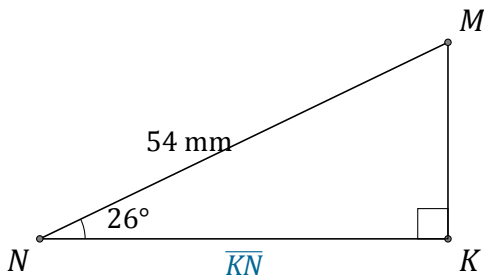
Calcule los valores de los lados usando la función coseno: $\cos(\alpha) = \frac{C.A.}{H}$



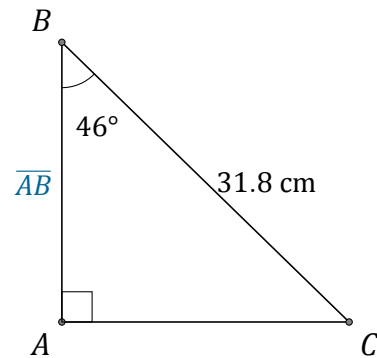
$$\overline{ST} = \underline{\hspace{2cm}}$$



$$\overline{GJ} = \underline{\hspace{2cm}}$$



$$\overline{KN} = \underline{\hspace{2cm}}$$



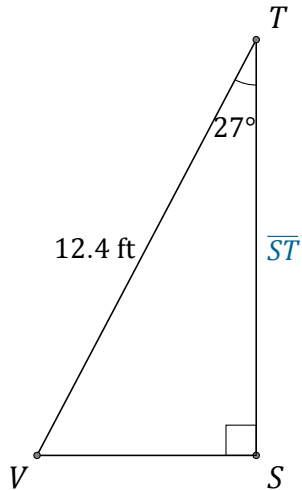
$$\overline{AB} = \underline{\hspace{2cm}}$$

Función Coseno (I) Respuestas

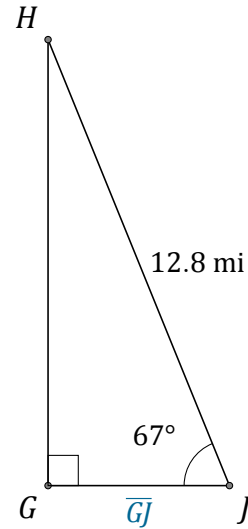
Nombre: _____

Fecha: _____

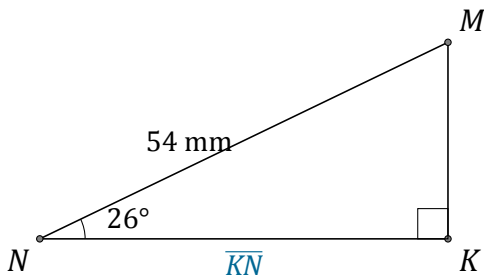
Calcule los valores de los lados usando la función coseno: $\cos(\alpha) = \frac{C.A.}{H}$



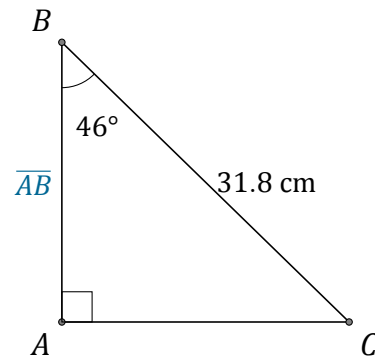
$$\overline{ST} = \underline{11 \text{ ft}}$$



$$\overline{GJ} = \underline{5 \text{ mi}}$$



$$\overline{KN} = \underline{48.5 \text{ mm}}$$



$$\overline{AB} = \underline{22.1 \text{ cm}}$$