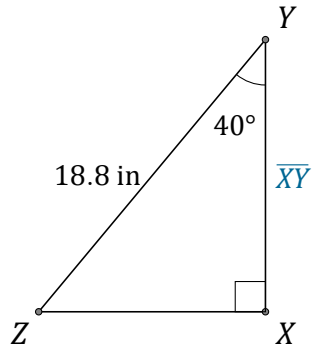


Función Coseno (J)

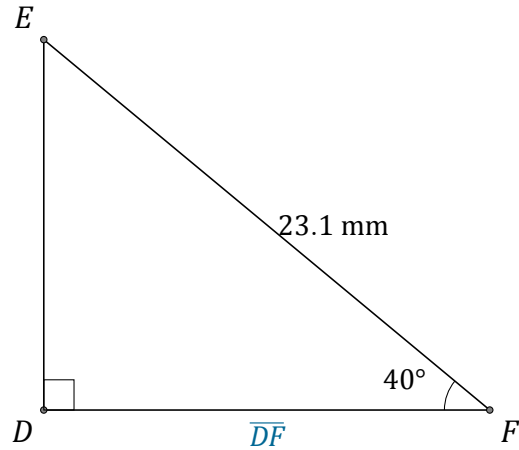
Nombre: _____

Fecha: _____

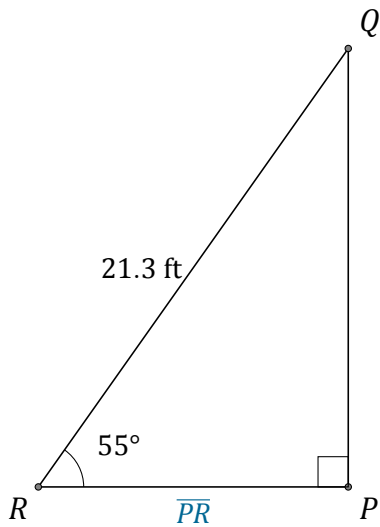
Calcule los valores de los lados usando la función coseno: $\cos(\alpha) = \frac{C.A.}{H}$



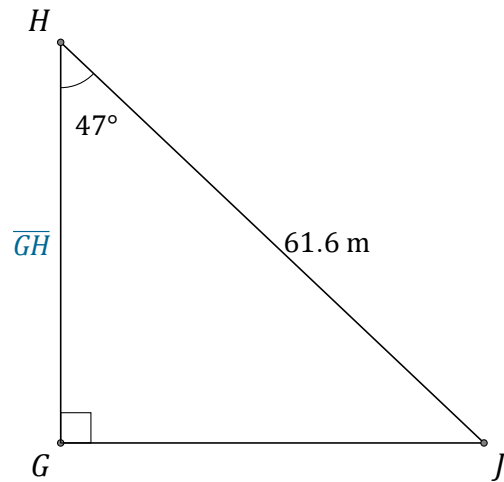
$\overline{XY} =$ _____



$\overline{DF} =$ _____



$\overline{PR} =$ _____



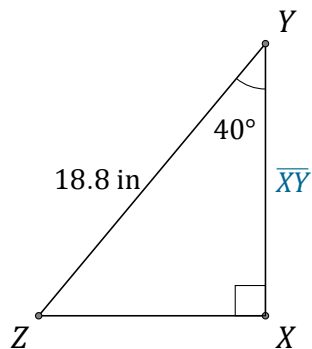
$\overline{GH} =$ _____

Función Coseno (J) Respuestas

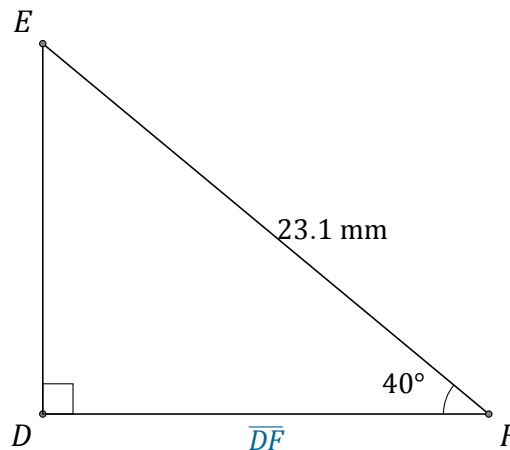
Nombre: _____

Fecha: _____

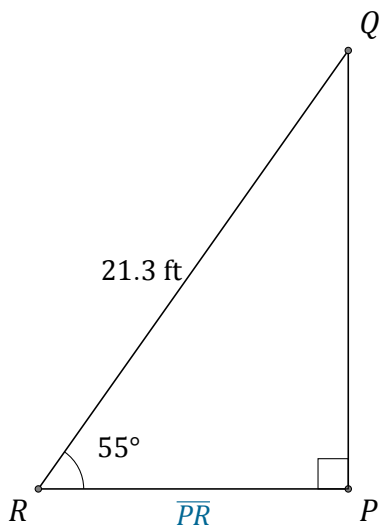
Calcule los valores de los lados usando la función coseno: $\cos(\alpha) = \frac{C.A.}{H}$



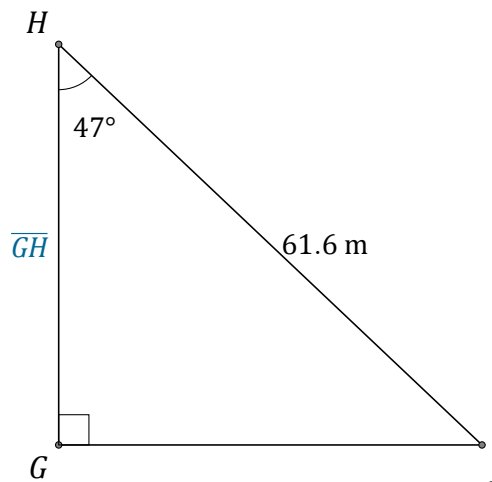
$$\overline{XY} = \underline{14.4 \text{ in}}$$



$$\overline{DF} = \underline{17.7 \text{ mm}}$$



$$\overline{PR} = \underline{12.2 \text{ ft}}$$



$$\overline{GH} = \underline{42 \text{ m}}$$