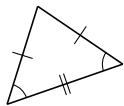
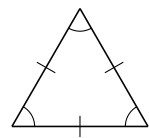
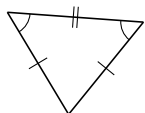


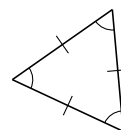
Clasificar Triángulos (H)

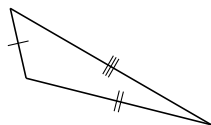
Clasifique cada triángulo de acuerdo a la medida de sus lados.

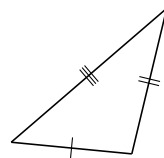




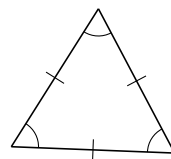


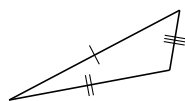


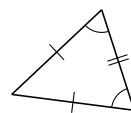






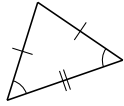




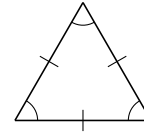


Clasificar Triángulos (H) Respuestas

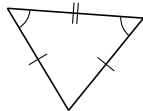
Clasifique cada triángulo de acuerdo a la medida de sus lados.



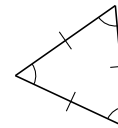
isósceles



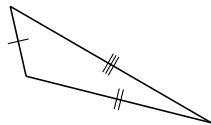
equilátero



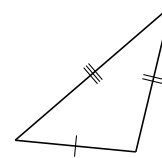
isósceles



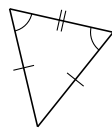
equilátero



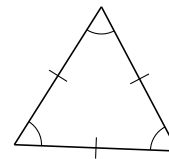
escaleno



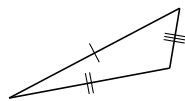
escaleno



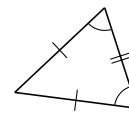
isósceles



equilátero



escaleno



isósceles