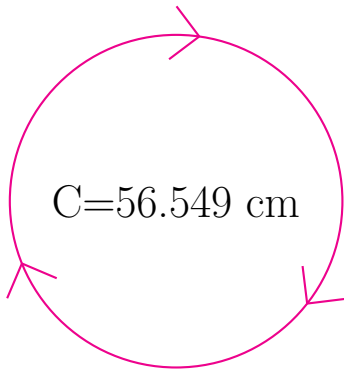
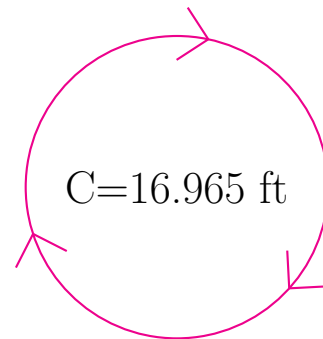


Radio y Diámetro de Círculos (C)

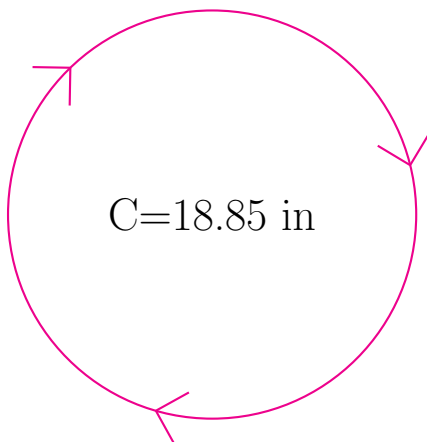
Calcule el radio y el diámetro de cada círculo.



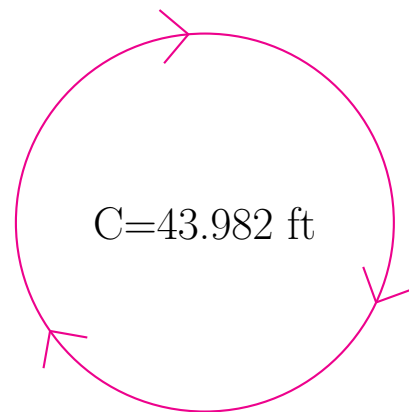
radio = _____
diámetro = _____



radio = _____
diámetro = _____



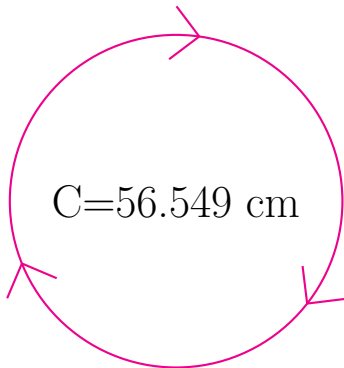
radio = _____
diámetro = _____



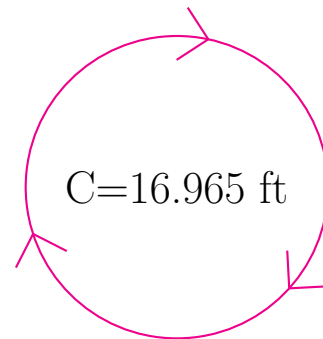
radio = _____
diámetro = _____

Radio y Diámetro de Círculos (C) Respuestas

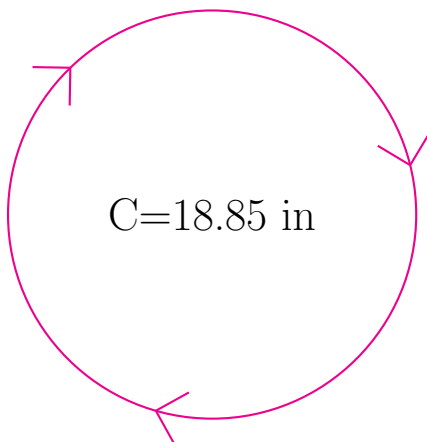
Calcule el radio y el diámetro de cada círculo.



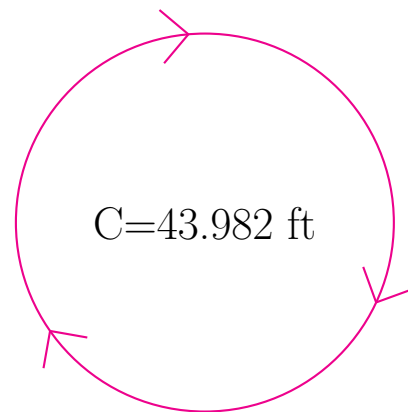
$$\begin{aligned} \text{radio} &= \underline{9.0 \text{ cm}} \\ \text{diámetro} &= \underline{18.0 \text{ cm}} \end{aligned}$$



$$\begin{aligned} \text{radio} &= \underline{2.7 \text{ ft}} \\ \text{diámetro} &= \underline{5.4 \text{ ft}} \end{aligned}$$



$$\begin{aligned} \text{radio} &= \underline{3.0 \text{ in}} \\ \text{diámetro} &= \underline{6.0 \text{ in}} \end{aligned}$$



$$\begin{aligned} \text{radio} &= \underline{7.0 \text{ ft}} \\ \text{diámetro} &= \underline{14.0 \text{ ft}} \end{aligned}$$