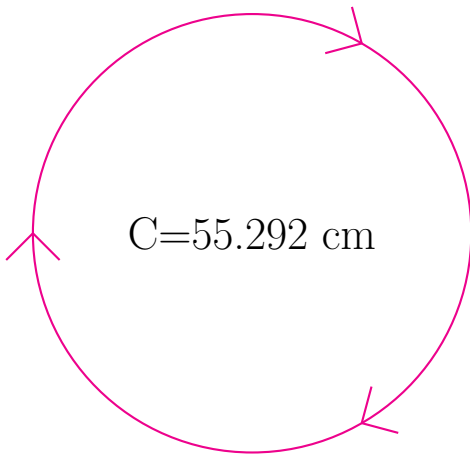
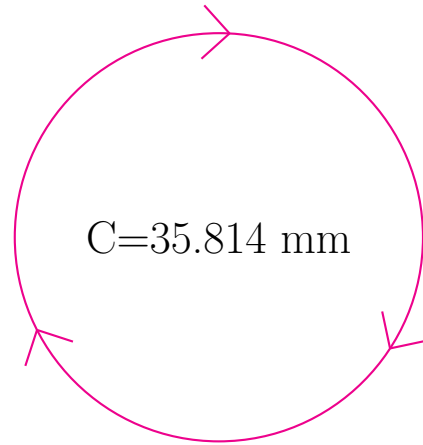


## Radio y Diámetro de Círculos (F)

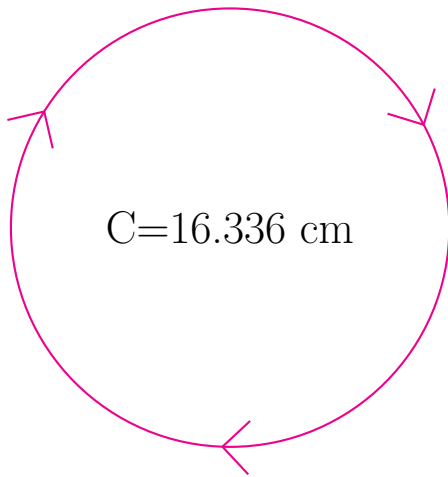
Calcule el radio y el diámetro de cada círculo.



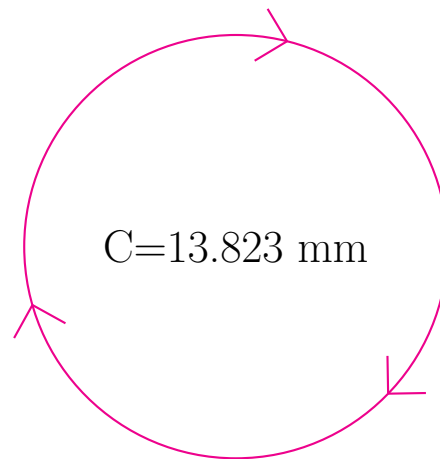
radio = \_\_\_\_\_  
diámetro = \_\_\_\_\_



radio = \_\_\_\_\_  
diámetro = \_\_\_\_\_



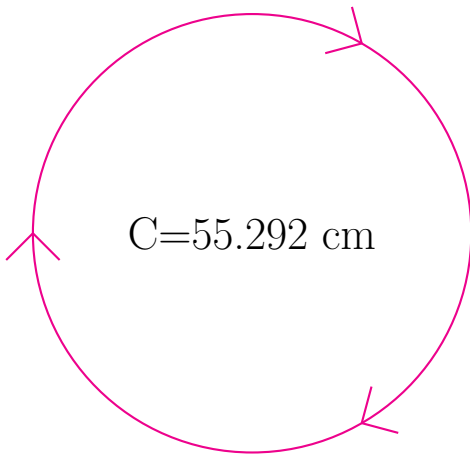
radio = \_\_\_\_\_  
diámetro = \_\_\_\_\_



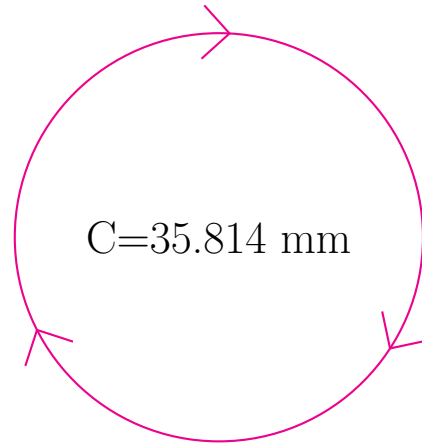
radio = \_\_\_\_\_  
diámetro = \_\_\_\_\_

## Radio y Diámetro de Círculos (F) Respuestas

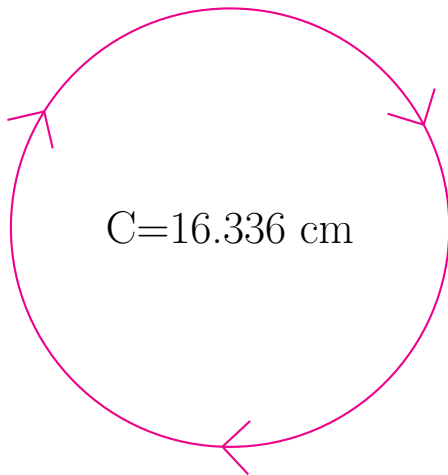
Calcule el radio y el diámetro de cada círculo.



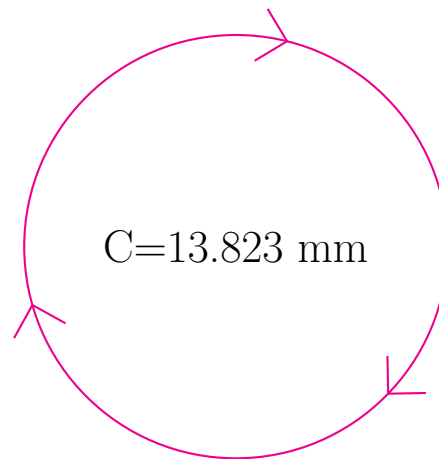
$$\begin{aligned} \text{radio} &= \underline{8.8 \text{ cm}} \\ \text{diámetro} &= \underline{17.6 \text{ cm}} \end{aligned}$$



$$\begin{aligned} \text{radio} &= \underline{5.7 \text{ mm}} \\ \text{diámetro} &= \underline{11.4 \text{ mm}} \end{aligned}$$



$$\begin{aligned} \text{radio} &= \underline{2.6 \text{ cm}} \\ \text{diámetro} &= \underline{5.2 \text{ cm}} \end{aligned}$$



$$\begin{aligned} \text{radio} &= \underline{2.2 \text{ mm}} \\ \text{diámetro} &= \underline{4.4 \text{ mm}} \end{aligned}$$