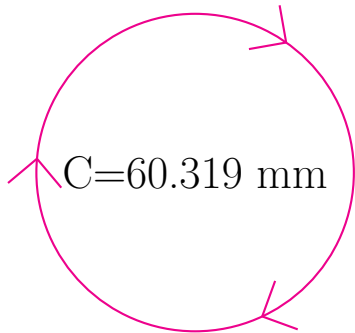


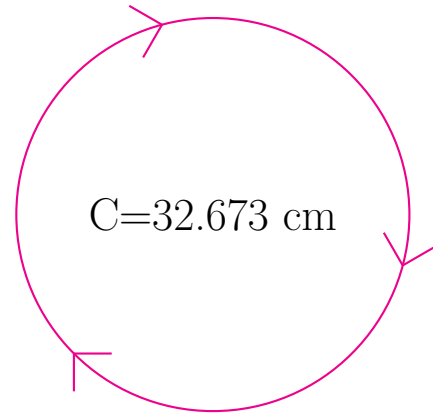
Radio y Diámetro de Círculos (G)

Calcule el radio y el diámetro de cada círculo.



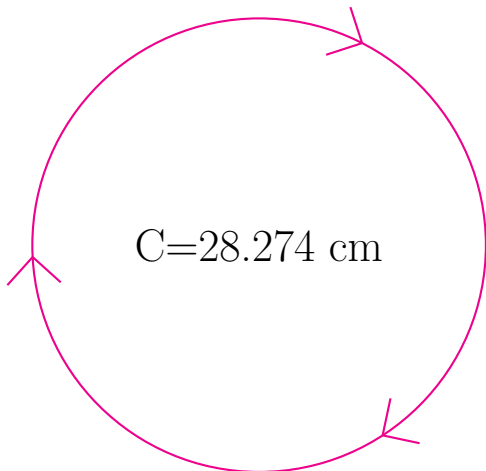
radio = _____

diámetro = _____



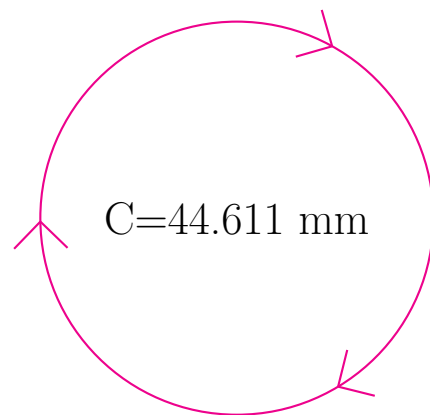
radio = _____

diámetro = _____



radio = _____

diámetro = _____

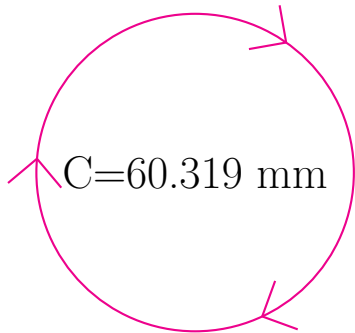


radio = _____

diámetro = _____

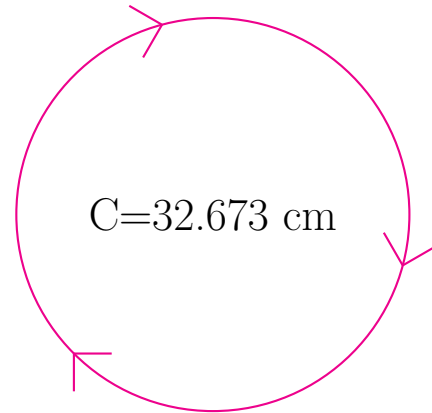
Radio y Diámetro de Círculos (G) Respuestas

Calcule el radio y el diámetro de cada círculo.



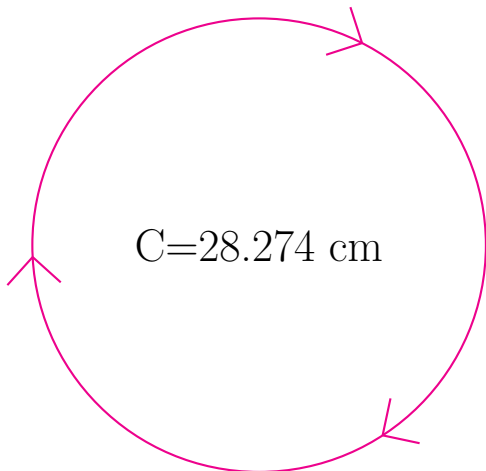
radio = 9.6 mm

diámetro = 19.2 mm



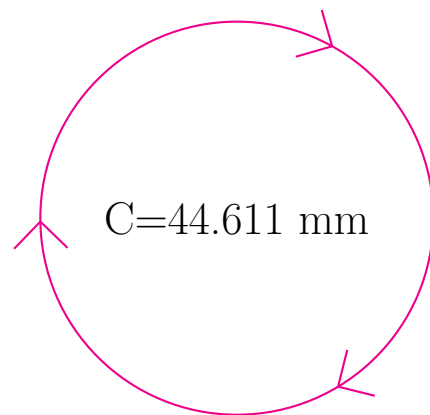
radio = 5.2 cm

diámetro = 10.4 cm



radio = 4.5 cm

diámetro = 9.0 cm



radio = 7.1 mm

diámetro = 14.2 mm