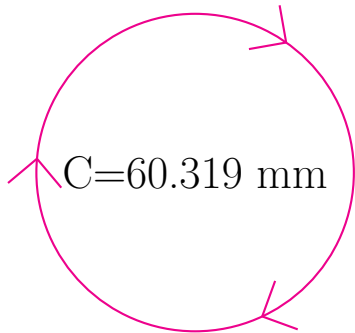


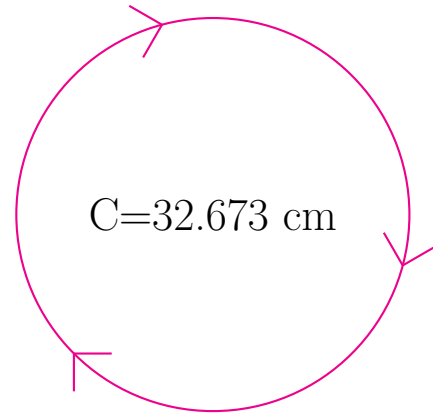
## Radio y Diámetro de Círculos (G)

Calcule el radio y el diámetro de cada círculo.



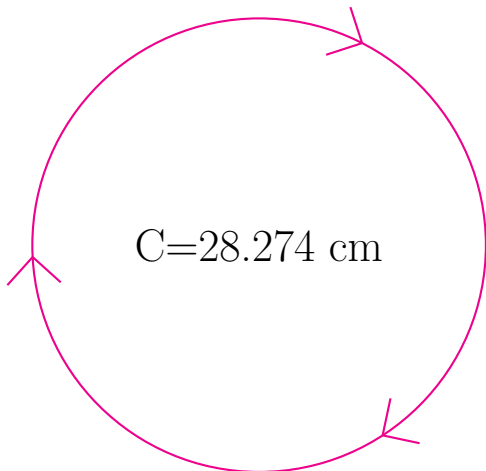
radio = \_\_\_\_\_

diámetro = \_\_\_\_\_



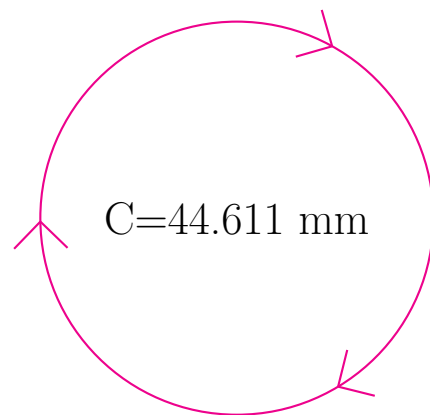
radio = \_\_\_\_\_

diámetro = \_\_\_\_\_



radio = \_\_\_\_\_

diámetro = \_\_\_\_\_



radio = \_\_\_\_\_

diámetro = \_\_\_\_\_