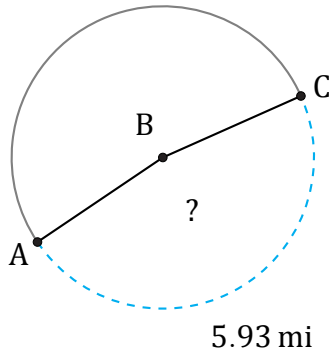


# Amplitud de Arcos (B)

Nombre: \_\_\_\_\_

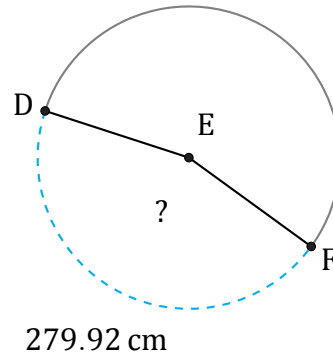
Fecha: \_\_\_\_\_

Calcule la amplitud angular de cada arco.



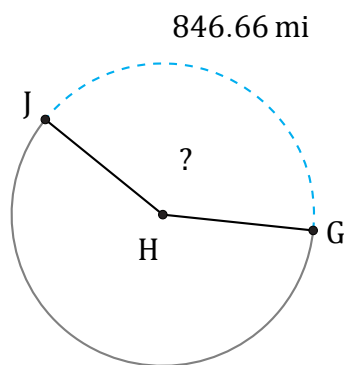
Radio = 2 mi

$\angle ABC =$



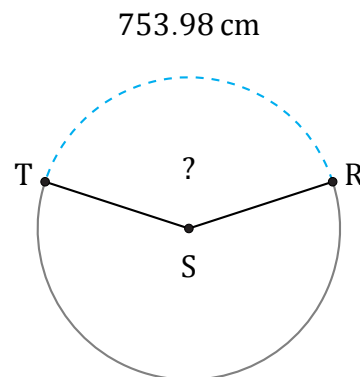
Radio = 99 cm

$\angle DEF =$



Radio = 330 mi

$\angle GHJ =$



Radio = 300 cm

$\angle RST =$