



¿QUÉ HAY EN EL REGALO? (B)

¿Qué número hay en cada regalo?

$2 \div 1 =$ 

$4 \div 4 =$ 

$20 \div 4 =$ 

$6 \div 1 =$ 

$10 \div 5 =$ 

$14 \div$  $= 2$


$42 \div$  $= 6$

$3 \div$  $= 1$


$40 \div$  $= 5$


$3 \div$  $= 1$

$$  $\div 7 = 3$

$$  $\div 3 = 2$

$$  $\div 1 = 5$

$$  $\div 3 = 9$

$$  $\div 9 = 1$

$15 \div 5 =$ 

$49 \div 7 =$ 

$64 \div 8 =$ 

$25 \div 5 =$ 

$15 \div 5 =$ 


$8 \div$  $= 8$


$24 \div$  $= 3$


$21 \div$  $= 3$


$24 \div$  $= 4$


$21 \div$  $= 3$


$$  $\div 4 = 8$

$$  $\div 7 = 9$

$$  $\div 9 = 1$


$$  $\div 7 = 4$

$$  $\div 8 = 1$

$9 \div 9 =$ 

$18 \div 2 =$ 

$28 \div 7 =$ 

$4 \div 1 =$ 

$42 \div 7 =$ 


$4 \div$  $= 2$


$21 \div$  $= 7$


$16 \div$  $= 4$


$40 \div$  $= 5$


$16 \div$  $= 8$

$$  $\div 3 = 6$

$$  $\div 2 = 6$

$$  $\div 3 = 4$

$$  $\div 6 = 9$

$$  $\div 5 = 9$