


¿QUÉ HAY EN EL REGALO? (C)

¿Qué número hay en cada regalo?

$48 \div 8 =$ 

$10 \div 5 =$ 

$20 \div 5 =$ 

$3 \div 3 =$ 

$18 \div 2 =$ 

$8 \div$  $= 8$

$8 \div$  $= 8$


$10 \div$  $= 5$

$8 \div$  $= 8$

$18 \div$  $= 3$

$$  $\div 3 = 6$


$$  $\div 2 = 7$

$$  $\div 1 = 9$


$$  $\div 4 = 1$

$$  $\div 2 = 4$

$5 \div 1 =$ 

$1 \div 1 =$ 

$3 \div 3 =$ 

$72 \div 8 =$ 

$6 \div 3 =$ 

$21 \div$  $= 7$

$15 \div$  $= 5$


$24 \div$  $= 6$

$28 \div$  $= 4$


$40 \div$  $= 8$

$$  $\div 5 = 5$


$$  $\div 8 = 9$

$$  $\div 1 = 2$

$$  $\div 4 = 1$

$$  $\div 2 = 4$

$6 \div 2 =$ 

$18 \div 3 =$ 

$54 \div 6 =$ 

$48 \div 8 =$ 

$2 \div 2 =$ 

$18 \div$  $= 2$


$24 \div$  $= 8$


$32 \div$  $= 8$


$4 \div$  $= 4$

$5 \div$  $= 1$

$$  $\div 3 = 6$

$$  $\div 7 = 6$

$$  $\div 9 = 1$

$$  $\div 3 = 6$

$$  $\div 6 = 4$