



¿QUÉ HAY EN EL REGALO? (H)

¿Qué número hay en cada regalo?

$6 \div 3 =$ 

$10 \div 2 =$ 

$9 \div 9 =$ 

$15 \div 5 =$ 

$6 \div 2 =$ 

$20 \div$  $= 4$

$2 \div$  $= 2$

$8 \div$  $= 1$

$54 \div$  $= 6$


$9 \div$  $= 9$


$$  $\div 1 = 6$

$$  $\div 6 = 4$

$$  $\div 2 = 6$

$$  $\div 2 = 7$


$$  $\div 8 = 6$

$18 \div 9 =$ 

$30 \div 6 =$ 

$48 \div 6 =$ 

$16 \div 8 =$ 

$5 \div 1 =$ 


$9 \div$  $= 3$

$2 \div$  $= 1$


$6 \div$  $= 3$

$14 \div$  $= 7$

$10 \div$  $= 2$


$$  $\div 9 = 3$


$$  $\div 5 = 3$

$$  $\div 1 = 7$

$$  $\div 5 = 3$

$$  $\div 4 = 1$

$45 \div 9 =$ 

$54 \div 9 =$ 

$56 \div 8 =$ 

$14 \div 7 =$ 

$20 \div 5 =$ 


$3 \div$  $= 1$

$81 \div$  $= 9$


$14 \div$  $= 2$


$10 \div$  $= 5$


$6 \div$  $= 2$

$$  $\div 3 = 1$

$$  $\div 4 = 6$

$$  $\div 1 = 6$

$$  $\div 3 = 3$

$$  $\div 9 = 7$