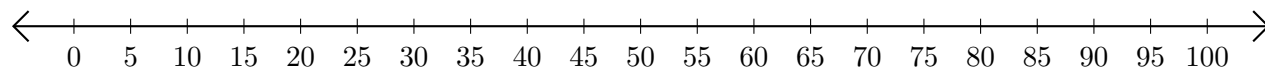


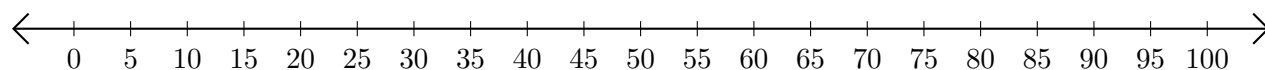
Restar en Rectas Numéricas (I)

Use las rectas numéricas para calcular cada diferencia.

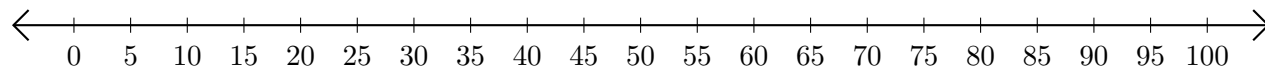
1. $70 - 60 = \underline{\quad}$



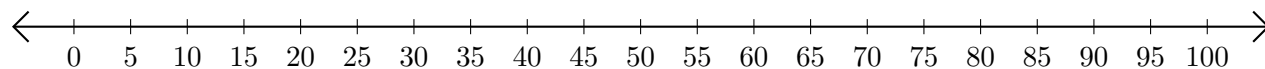
2. $75 - 55 = \underline{\quad}$



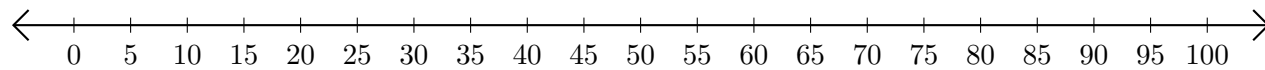
3. $40 - 30 = \underline{\quad}$



4. $100 - 75 = \underline{\quad}$



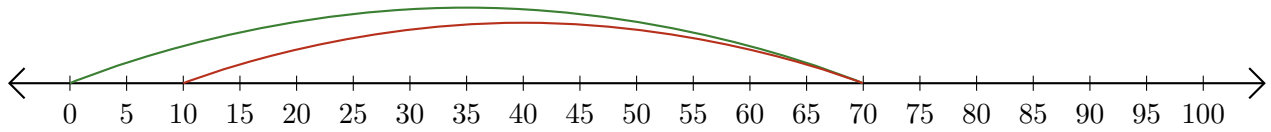
5. $55 - 10 = \underline{\quad}$



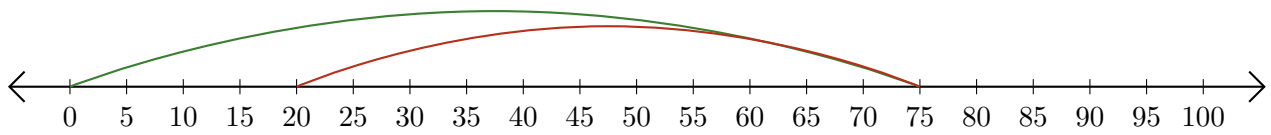
Restar en Rectas Numéricas (I) Respuestas

Use las rectas numéricas para calcular cada diferencia.

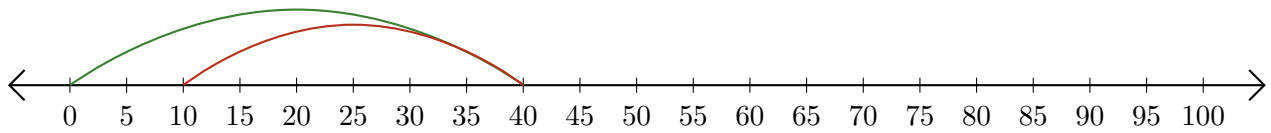
1. $70 - 60 = \underline{10}$



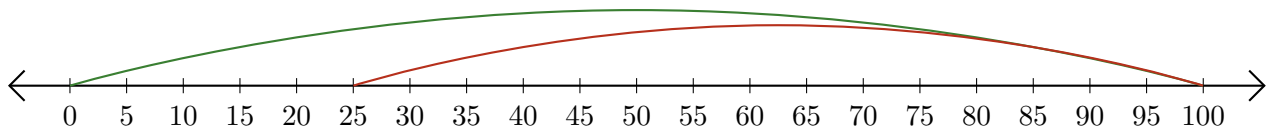
2. $75 - 55 = \underline{20}$



3. $40 - 30 = \underline{10}$



4. $100 - 75 = \underline{25}$



5. $55 - 10 = \underline{45}$

