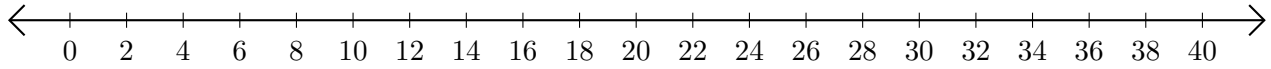


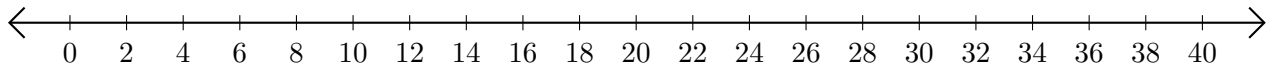
# Sumar y Restar en Rectas Numéricas (C)

Use las rectas numéricas para calcular cada suma o diferencia.

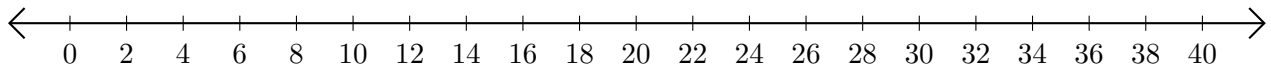
1.  $38 + 2 = \underline{\quad}$



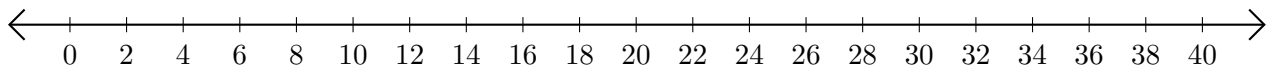
2.  $40 - 12 = \underline{\quad}$



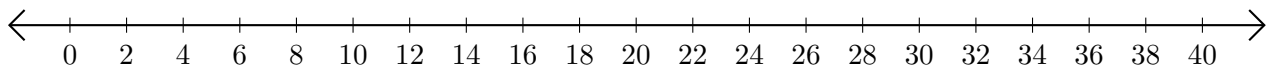
3.  $36 + 4 = \underline{\quad}$



4.  $32 - 24 = \underline{\quad}$



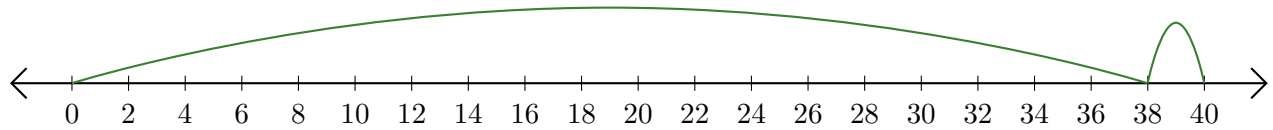
5.  $28 - 14 = \underline{\quad}$



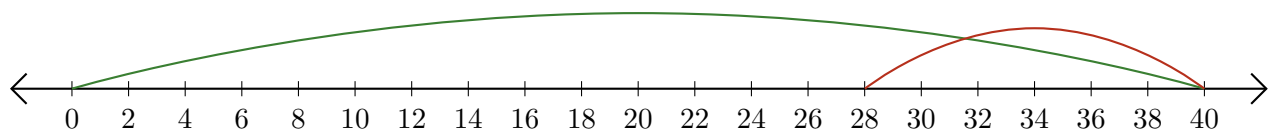
# Sumar y Restar en Rectas Numéricas (C) Respuestas

Use las rectas numéricas para calcular cada suma o diferencia.

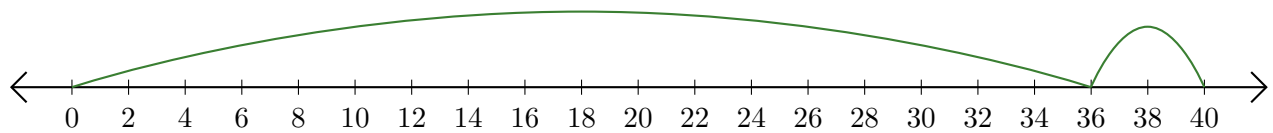
1.  $38 + 2 = \underline{40}$



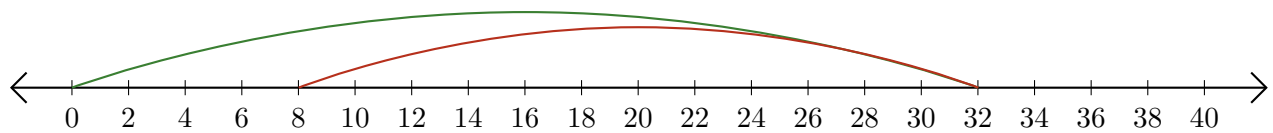
2.  $40 - 12 = \underline{28}$



3.  $36 + 4 = \underline{40}$



4.  $32 - 24 = \underline{8}$



5.  $28 - 14 = \underline{14}$

