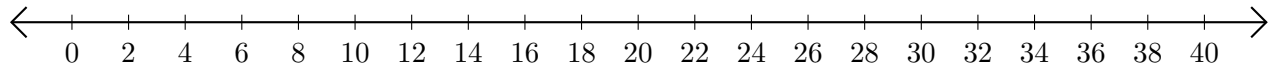


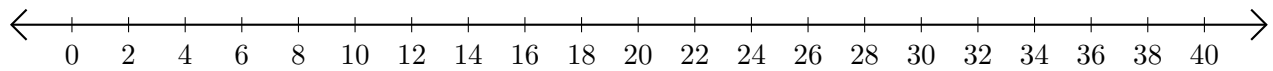
Sumar y Restar en Rectas Numéricas (D)

Use las rectas numéricas para calcular cada suma o diferencia.

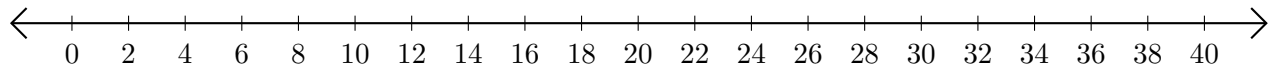
1. $2 + 32 = \underline{\quad}$



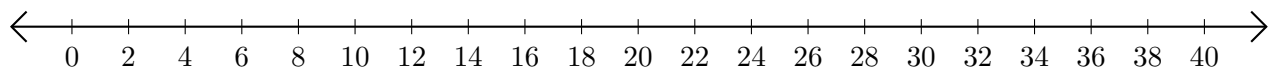
2. $40 - 38 = \underline{\quad}$



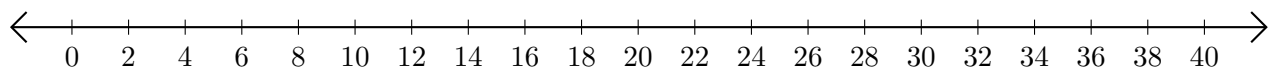
3. $20 + 12 = \underline{\quad}$



4. $22 - 12 = \underline{\quad}$



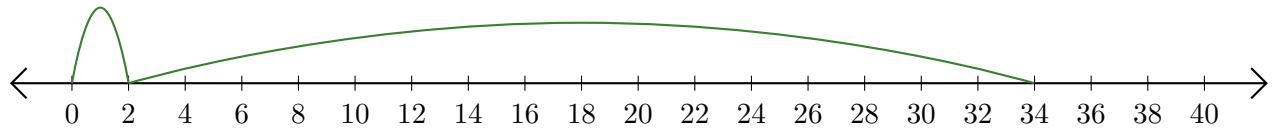
5. $18 + 18 = \underline{\quad}$



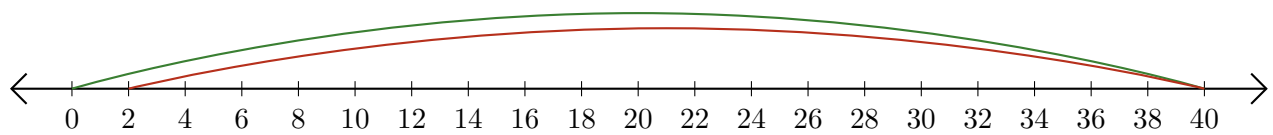
Sumar y Restar en Rectas Numéricas (D) Respuestas

Use las rectas numéricas para calcular cada suma o diferencia.

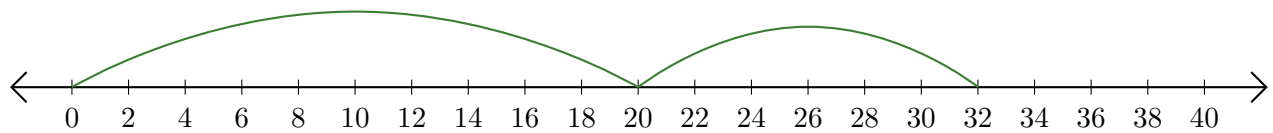
1. $2 + 32 = \underline{34}$



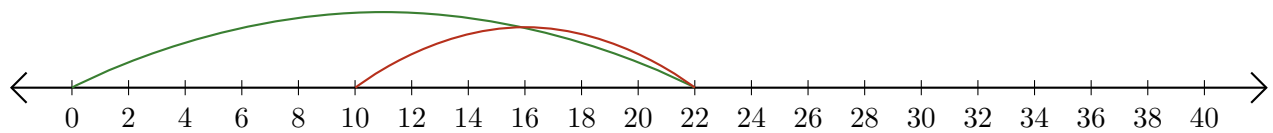
2. $40 - 38 = \underline{2}$



3. $20 + 12 = \underline{32}$



4. $22 - 12 = \underline{10}$



5. $18 + 18 = \underline{36}$

