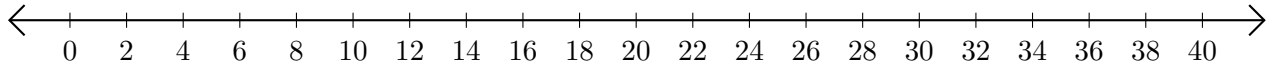


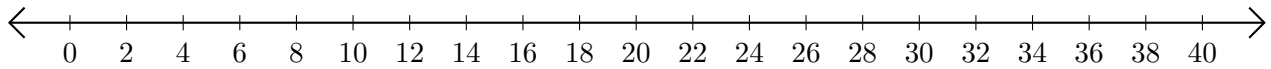
# Sumar y Restar en Rectas Numéricas (E)

Use las rectas numéricas para calcular cada suma o diferencia.

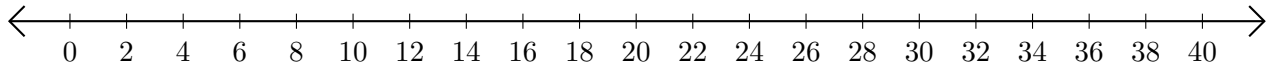
1.  $10 + 22 = \underline{\quad}$



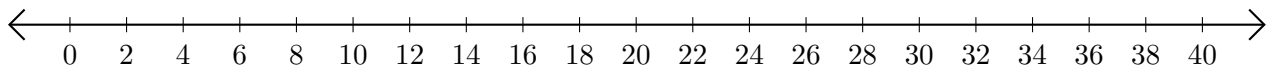
2.  $30 - 14 = \underline{\quad}$



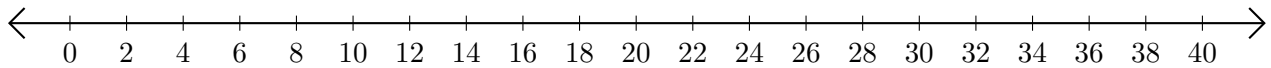
3.  $18 + 22 = \underline{\quad}$



4.  $26 - 20 = \underline{\quad}$



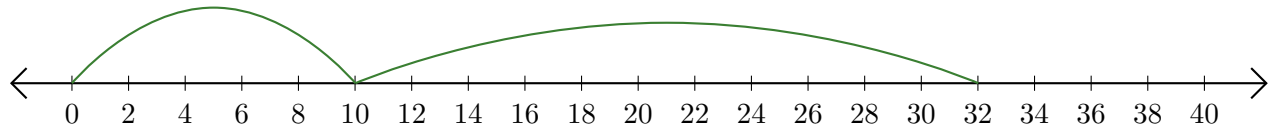
5.  $40 - 30 = \underline{\quad}$



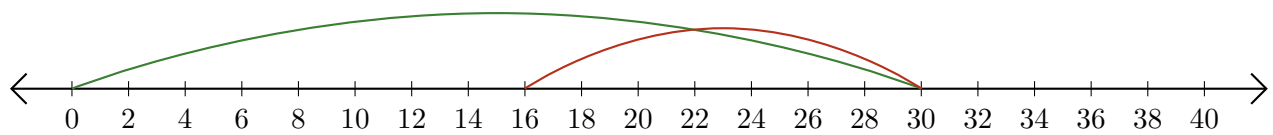
# Sumar y Restar en Rectas Numéricas (E) Respuestas

Use las rectas numéricas para calcular cada suma o diferencia.

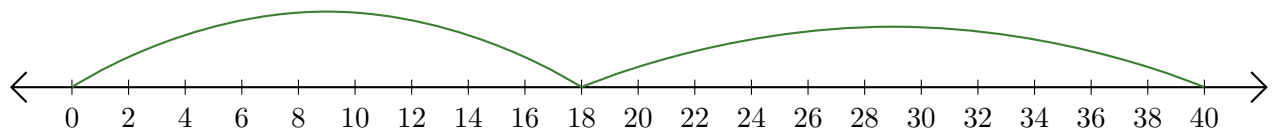
1.  $10 + 22 = \underline{32}$



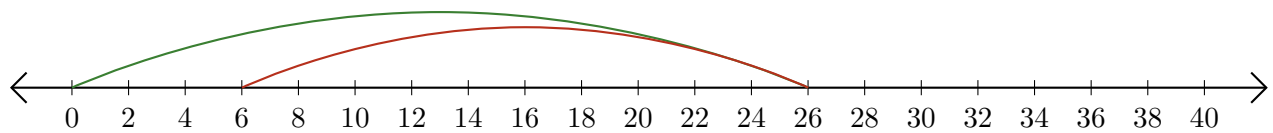
2.  $30 - 14 = \underline{16}$



3.  $18 + 22 = \underline{40}$



4.  $26 - 20 = \underline{6}$



5.  $40 - 30 = \underline{10}$

