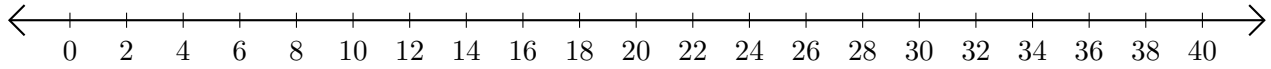


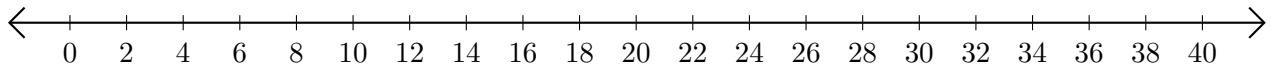
Sumar y Restar en Rectas Numéricas (F)

Use las rectas numéricas para calcular cada suma o diferencia.

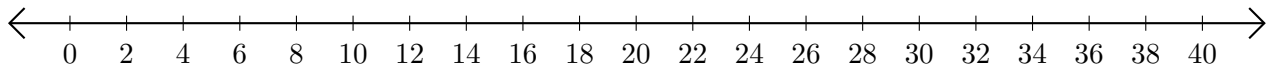
1. $10 + 22 = \underline{\quad}$



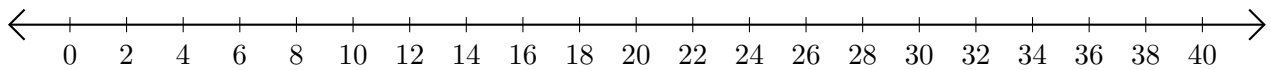
2. $20 - 2 = \underline{\quad}$



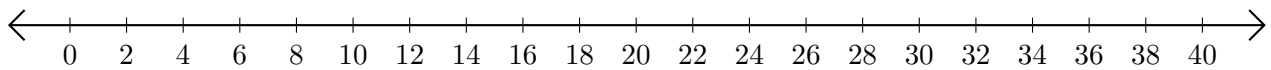
3. $28 + 4 = \underline{\quad}$



4. $18 - 12 = \underline{\quad}$



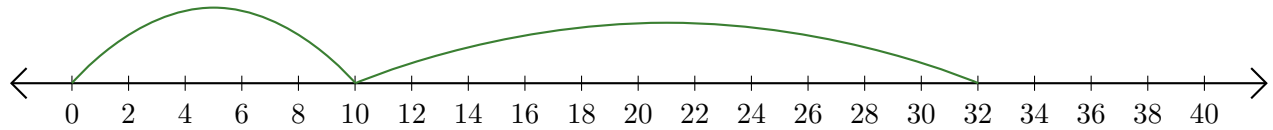
5. $18 + 18 = \underline{\quad}$



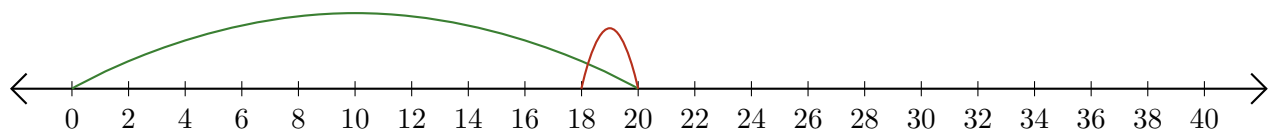
Sumar y Restar en Rectas Numéricas (F) Respuestas

Use las rectas numéricas para calcular cada suma o diferencia.

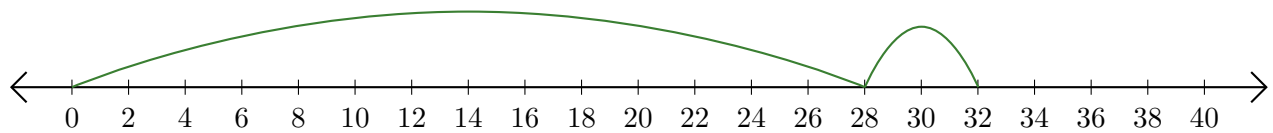
1. $10 + 22 = \underline{32}$



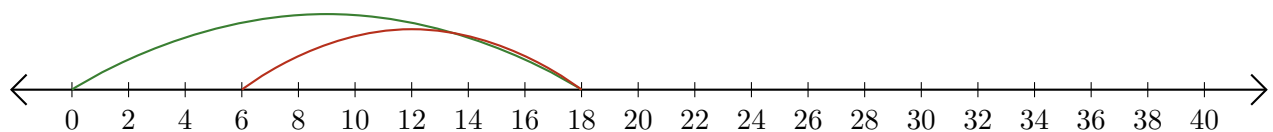
2. $20 - 2 = \underline{18}$



3. $28 + 4 = \underline{32}$



4. $18 - 12 = \underline{6}$



5. $18 + 18 = \underline{36}$

