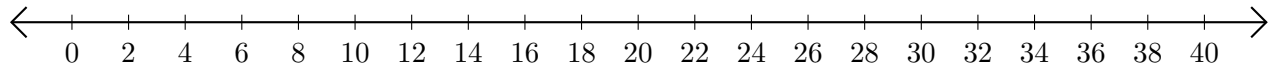


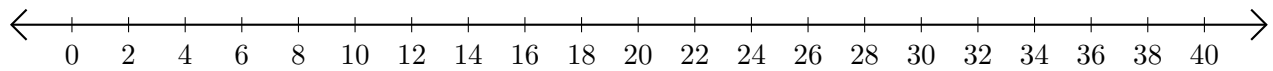
Sumar y Restar en Rectas Numéricas (G)

Use las rectas numéricas para calcular cada suma o diferencia.

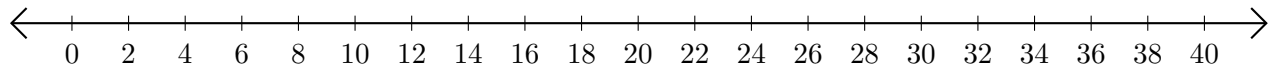
1. $10 + 24 = \underline{\quad}$



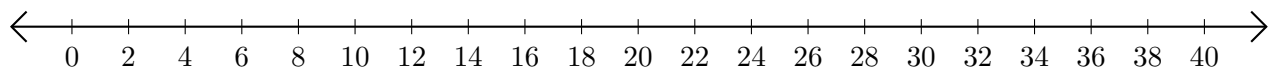
2. $24 - 18 = \underline{\quad}$



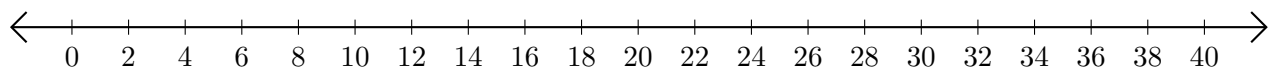
3. $16 + 6 = \underline{\quad}$



4. $28 - 26 = \underline{\quad}$



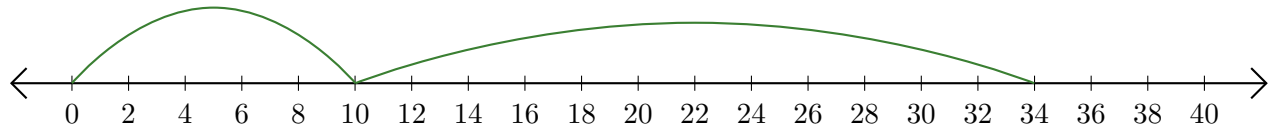
5. $38 + 2 = \underline{\quad}$



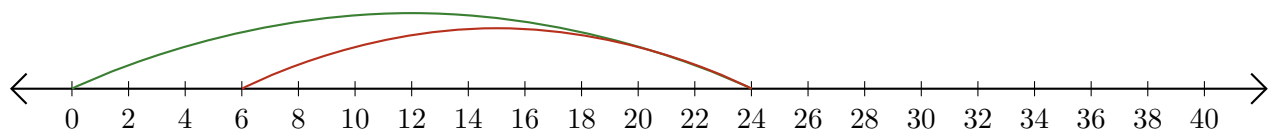
Sumar y Restar en Rectas Numéricas (G) Respuestas

Use las rectas numéricas para calcular cada suma o diferencia.

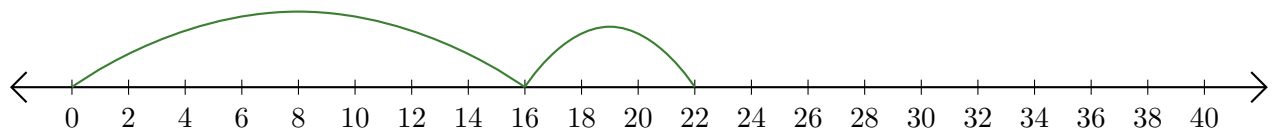
1. $10 + 24 = \underline{34}$



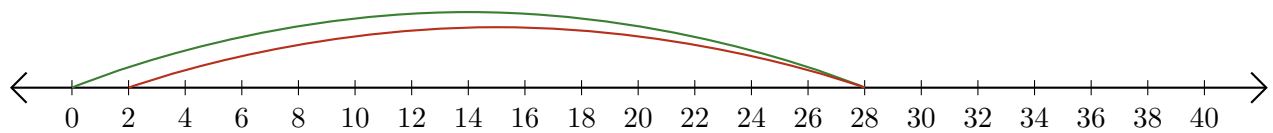
2. $24 - 18 = \underline{6}$



3. $16 + 6 = \underline{22}$



4. $28 - 26 = \underline{2}$



5. $38 + 2 = \underline{40}$

