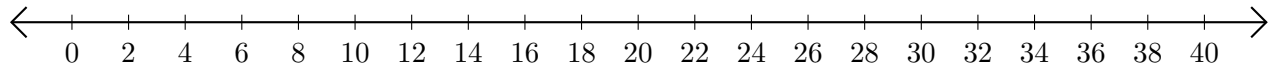


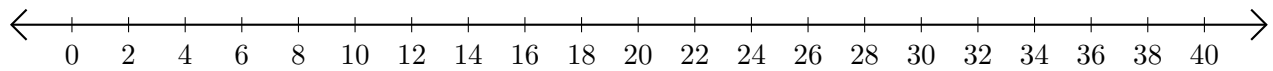
Sumar y Restar en Rectas Numéricas (H)

Use las rectas numéricas para calcular cada suma o diferencia.

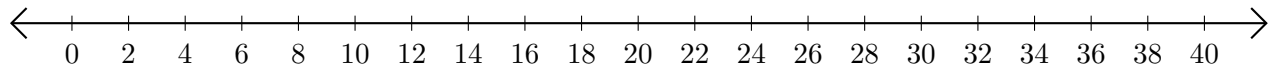
1. $22 + 4 = \underline{\quad}$



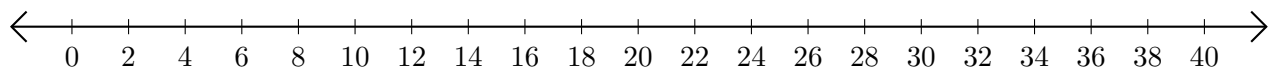
2. $34 - 32 = \underline{\quad}$



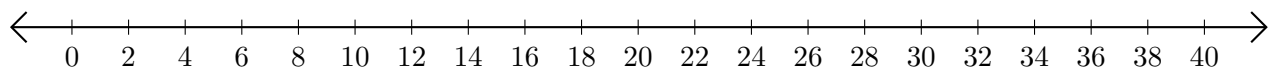
3. $6 + 6 = \underline{\quad}$



4. $34 - 2 = \underline{\quad}$



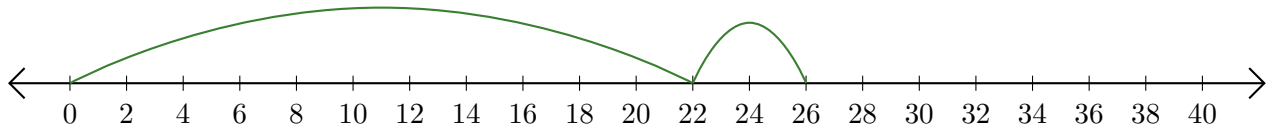
5. $10 + 26 = \underline{\quad}$



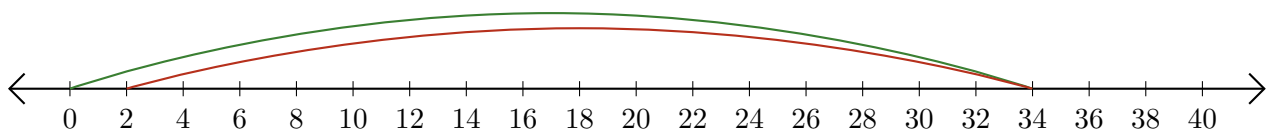
Sumar y Restar en Rectas Numéricas (H) Respuestas

Use las rectas numéricas para calcular cada suma o diferencia.

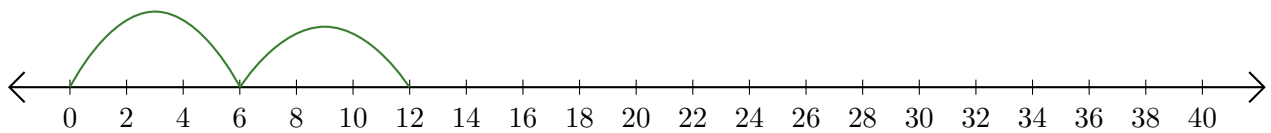
1. $22 + 4 = \underline{26}$



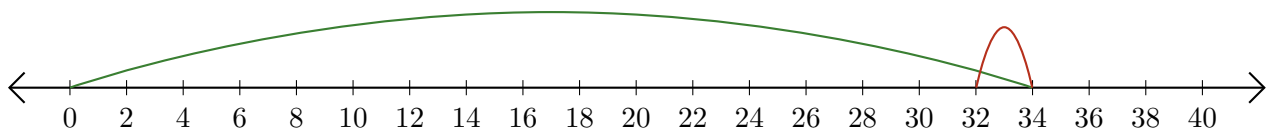
2. $34 - 32 = \underline{2}$



3. $6 + 6 = \underline{12}$



4. $34 - 2 = \underline{32}$



5. $10 + 26 = \underline{36}$

