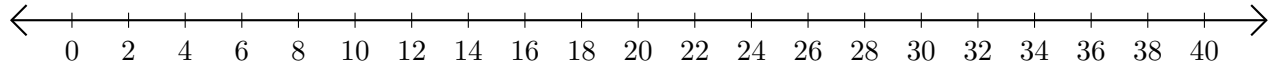


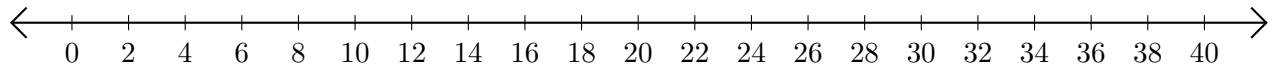
# Sumar y Restar en Rectas Numéricas (I)

Use las rectas numéricas para calcular cada suma o diferencia.

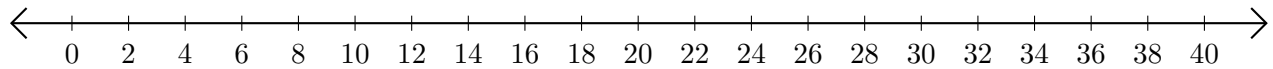
1.  $14 + 18 = \underline{\quad}$



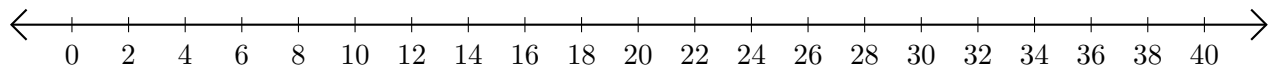
2.  $24 - 4 = \underline{\quad}$



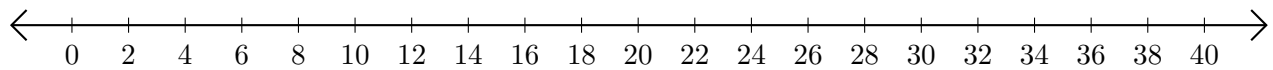
3.  $16 + 16 = \underline{\quad}$



4.  $40 - 36 = \underline{\quad}$



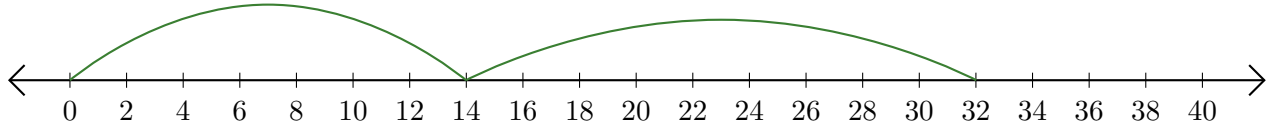
5.  $36 - 30 = \underline{\quad}$



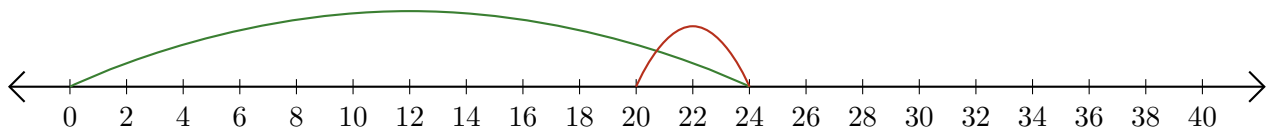
# Sumar y Restar en Rectas Numéricas (I) Respuestas

Use las rectas numéricas para calcular cada suma o diferencia.

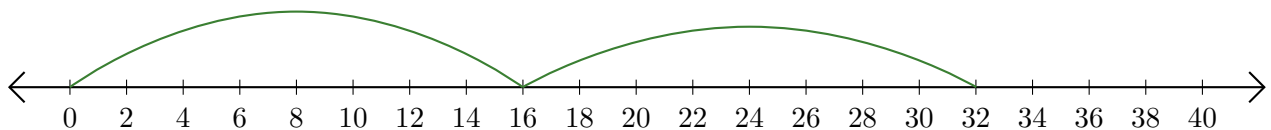
1.  $14 + 18 = \underline{32}$



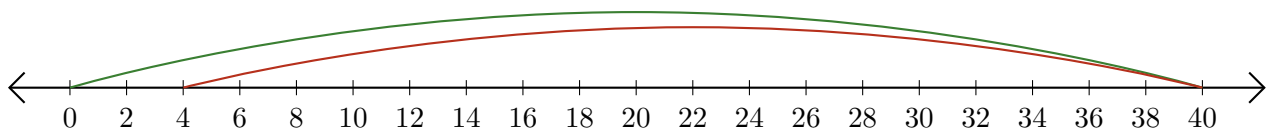
2.  $24 - 4 = \underline{20}$



3.  $16 + 16 = \underline{32}$



4.  $40 - 36 = \underline{4}$



5.  $36 - 30 = \underline{6}$

