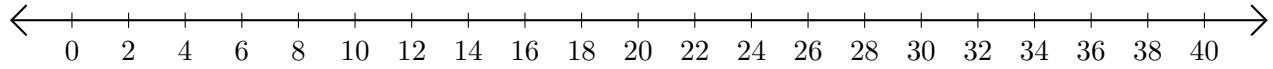


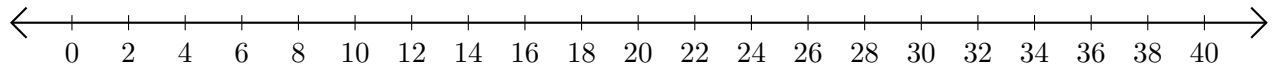
Sumar y Restar en Rectas Numéricas (J)

Use las rectas numéricas para calcular cada suma o diferencia.

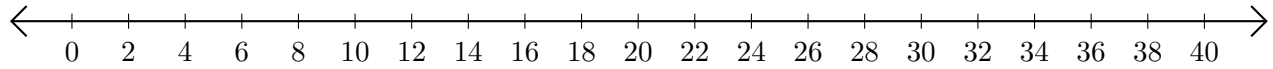
1. $18 + 10 = \underline{\quad}$



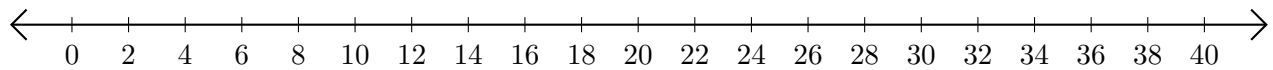
2. $40 - 4 = \underline{\quad}$



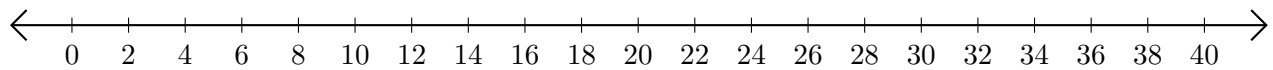
3. $16 + 22 = \underline{\quad}$



4. $38 - 10 = \underline{\quad}$



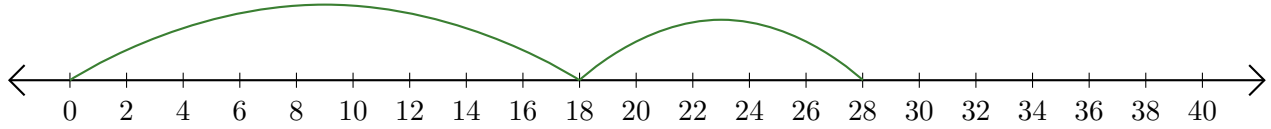
5. $40 - 26 = \underline{\quad}$



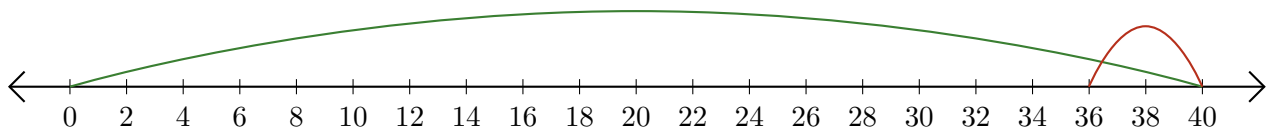
Sumar y Restar en Rectas Numéricas (J) Respuestas

Use las rectas numéricas para calcular cada suma o diferencia.

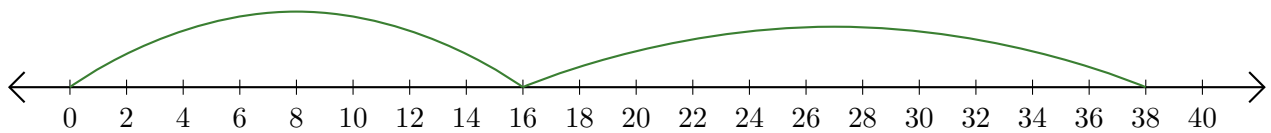
1. $18 + 10 = \underline{28}$



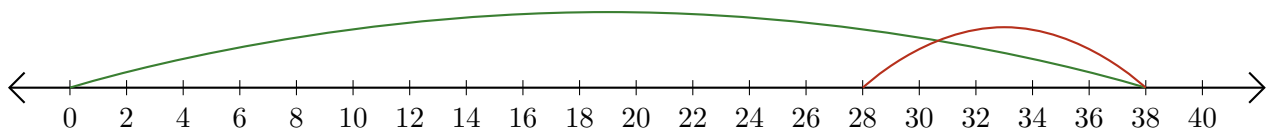
2. $40 - 4 = \underline{36}$



3. $16 + 22 = \underline{38}$



4. $38 - 10 = \underline{28}$



5. $40 - 26 = \underline{14}$

