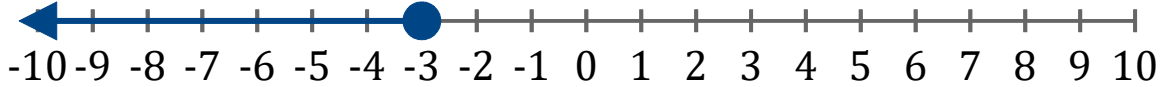


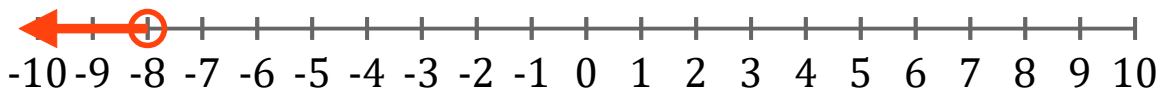
Gráficos de Inecuaciones (B)

Escriba la inecuación correspondiente a cada gráfico.

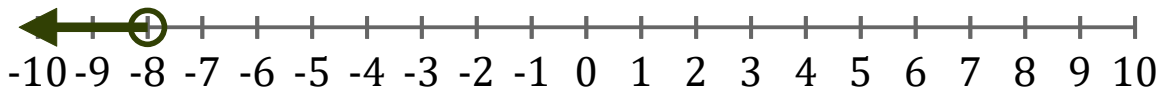
1. _____



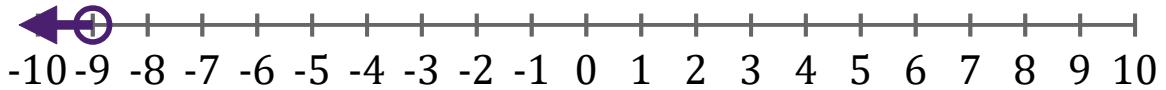
2. _____



3. _____



4. _____



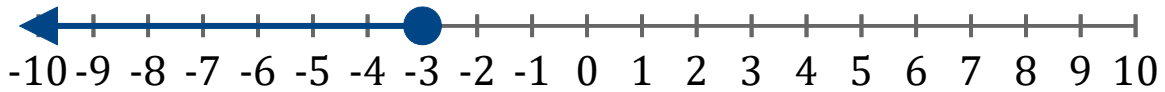
5. _____



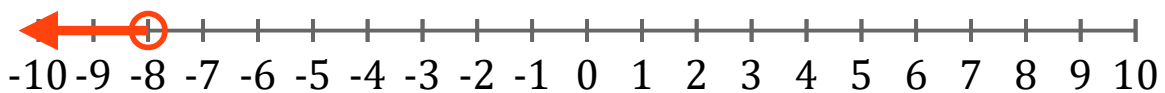
Gráficos de Inecuaciones (B) Respuestas

Escriba la inecuación correspondiente a cada gráfico.

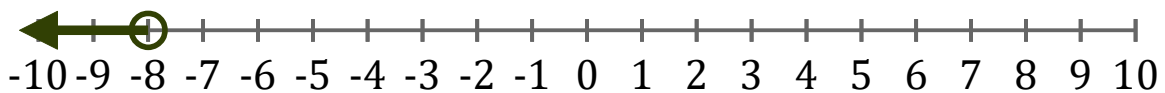
1. $x \leq -3$



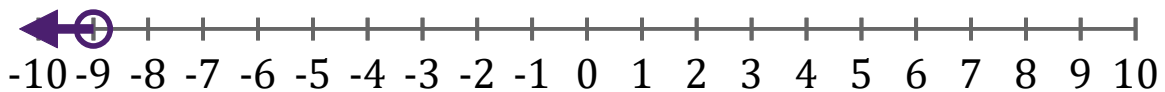
2. $x < -8$



3. $x < -8$



4. $x < -9$



5. $x \geq -4$

