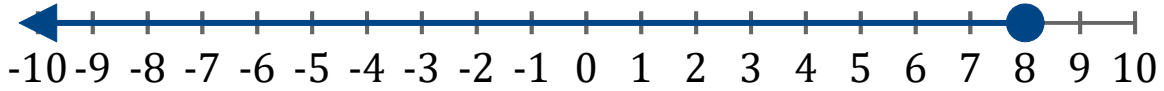


Gráficos de Inecuaciones (C)

Escriba la inecuación correspondiente a cada gráfico.

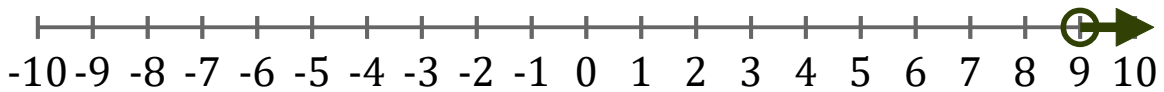
1. _____



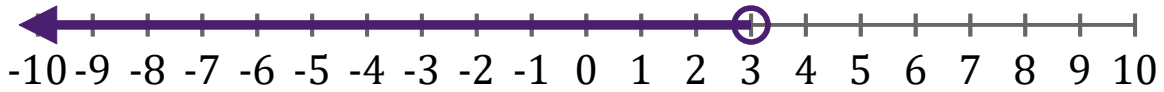
2. _____



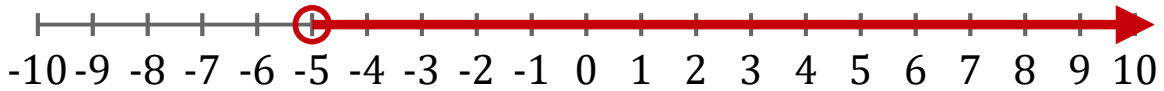
3. _____



4. _____



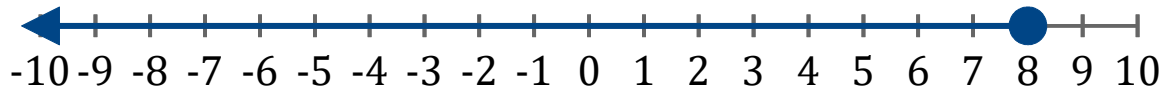
5. _____



Gráficos de Inecuaciones (C) Respuestas

Escriba la inecuación correspondiente a cada gráfico.

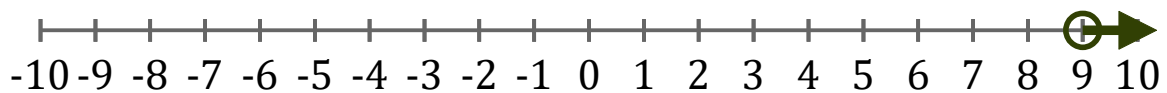
1. $x \leq 8$



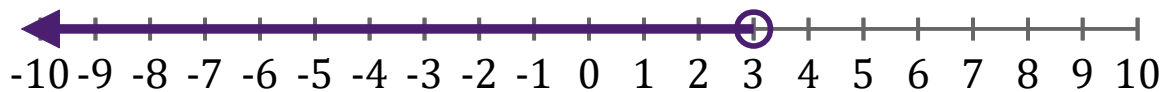
2. $x < 4$



3. $x > 9$



4. $x < 3$



5. $x > -5$

