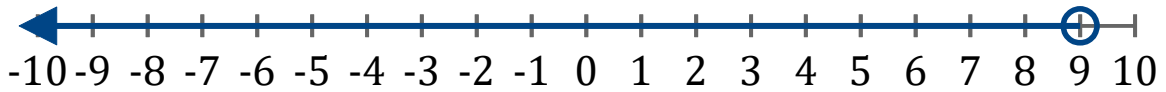


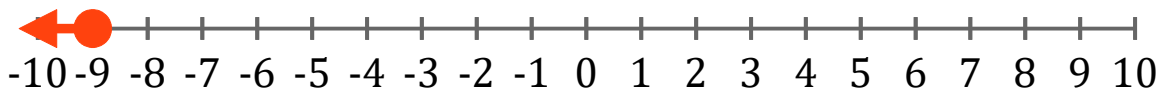
Gráficos de Inecuaciones (D)

Escriba la inecuación correspondiente a cada gráfico.

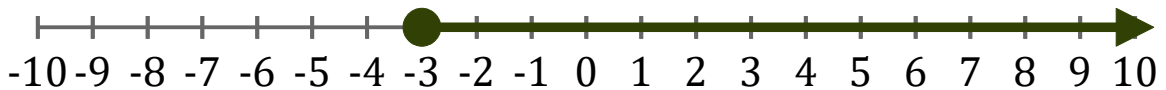
1. _____



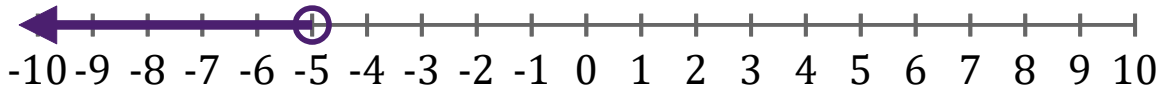
2. _____



3. _____



4. _____



5. _____



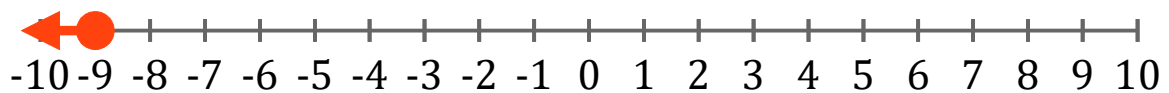
Gráficos de Inecuaciones (D) Respuestas

Escriba la inecuación correspondiente a cada gráfico.

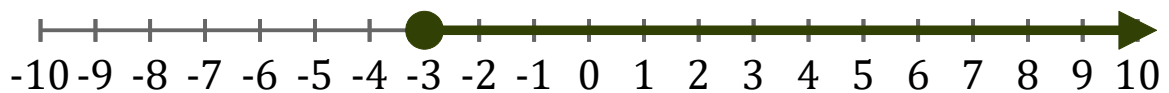
1. $x < 9$



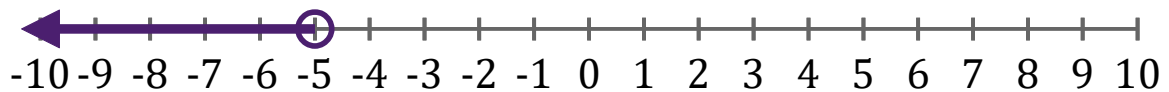
2. $x \leq -9$



3. $x \geq -3$



4. $x < -5$



5. $x < 2$

