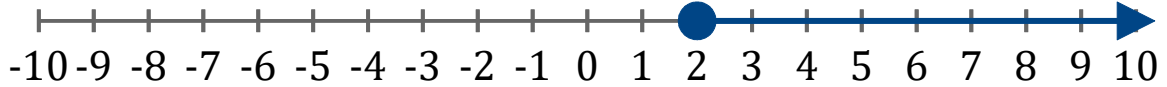


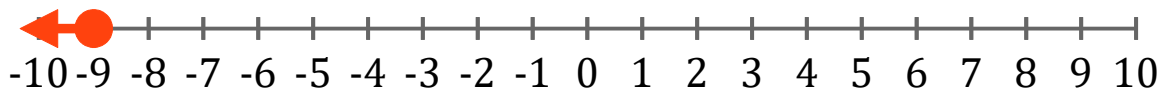
Gráficos de Inecuaciones (E)

Escriba la inecuación correspondiente a cada gráfico.

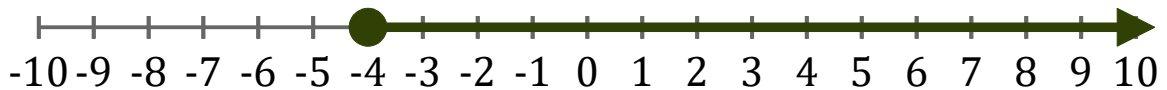
1. _____



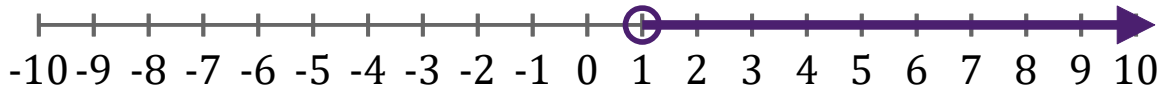
2. _____



3. _____



4. _____



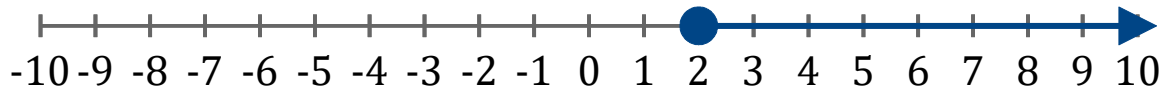
5. _____



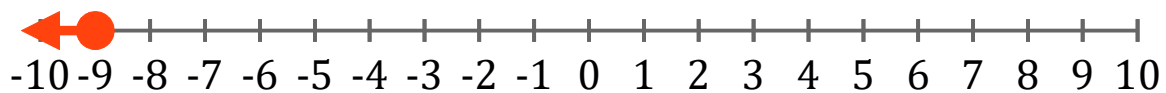
Gráficos de Inecuaciones (E) Respuestas

Escriba la inecuación correspondiente a cada gráfico.

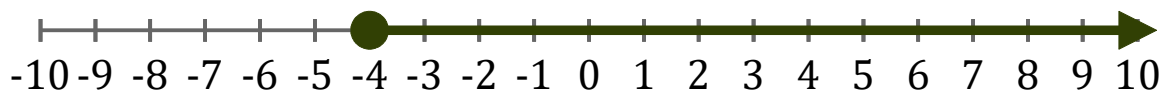
1. $x \geq 2$



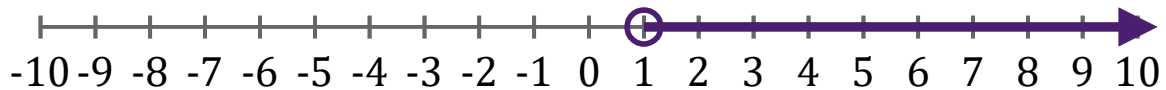
2. $x \leq -9$



3. $x \geq -4$



4. $x > 1$



5. $x \leq 7$

