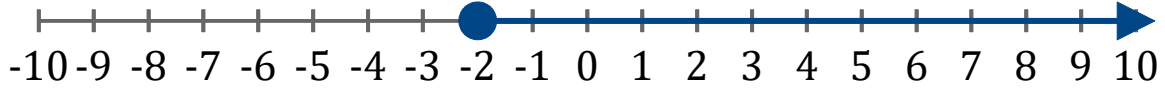


Gráficos de Inecuaciones (F)

Escriba la inecuación correspondiente a cada gráfico.

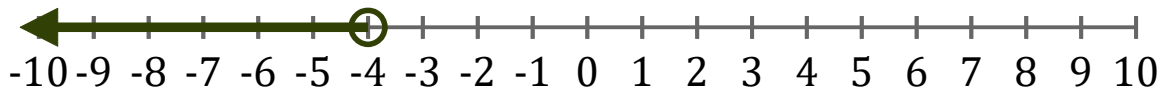
1. _____



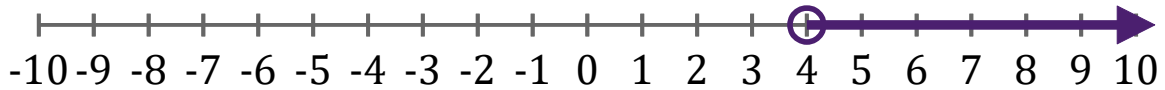
2. _____



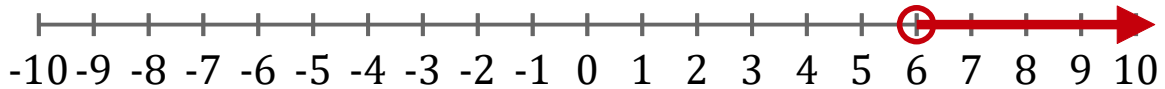
3. _____



4. _____



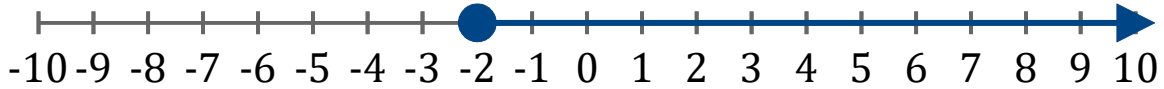
5. _____



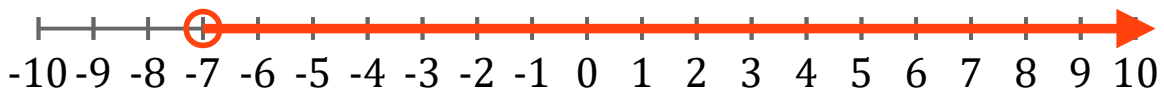
Gráficos de Inecuaciones (F) Respuestas

Escriba la inecuación correspondiente a cada gráfico.

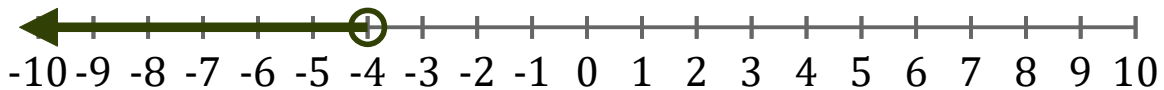
1. $x \geq -2$



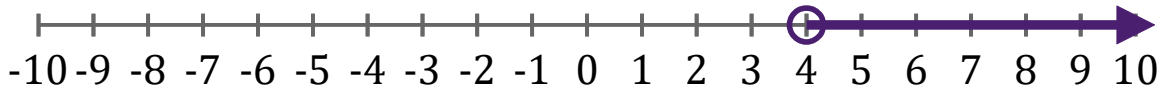
2. $x > -7$



3. $x < -4$



4. $x > 4$



5. $x > 6$

