

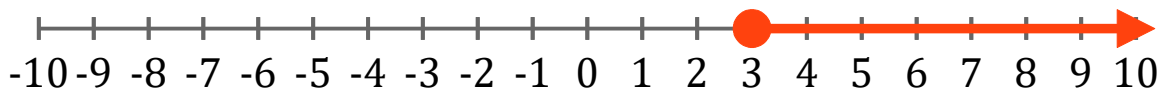
Gráficos de Inecuaciones (H)

Escriba la inecuación correspondiente a cada gráfico.

1. _____



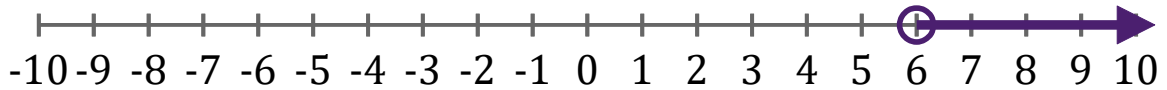
2. _____



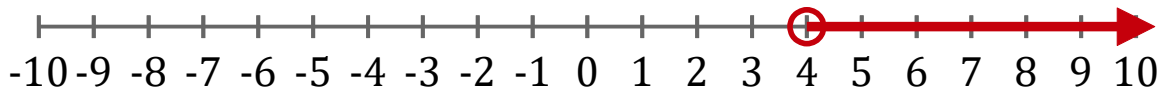
3. _____



4. _____



5. _____



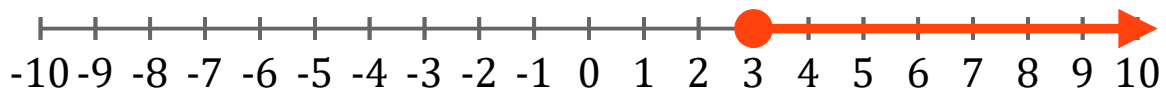
Gráficos de Inecuaciones (H) Respuestas

Escriba la inecuación correspondiente a cada gráfico.

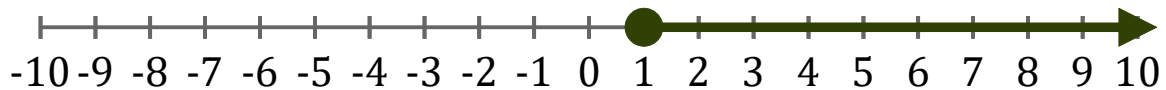
1. $x \geq -1$



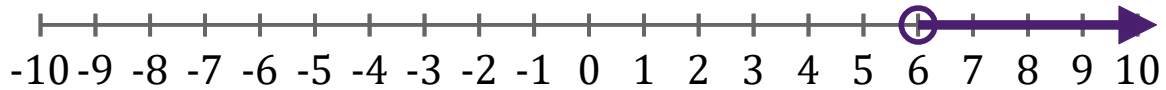
2. $x \geq 3$



3. $x \geq 1$



4. $x > 6$



5. $x > 4$

