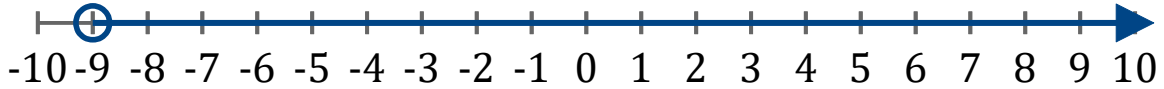


Gráficos de Inecuaciones (I)

Escriba la inecuación correspondiente a cada gráfico.

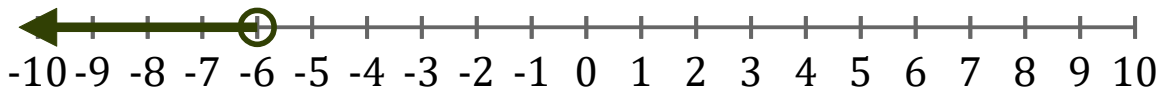
1. _____



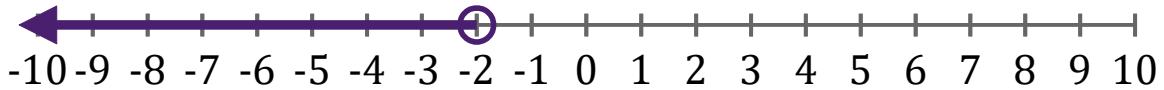
2. _____



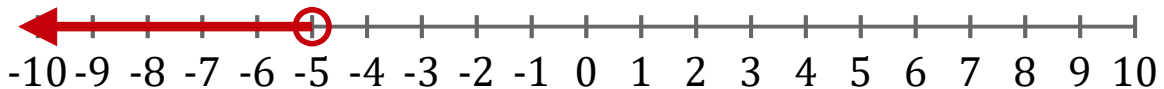
3. _____



4. _____



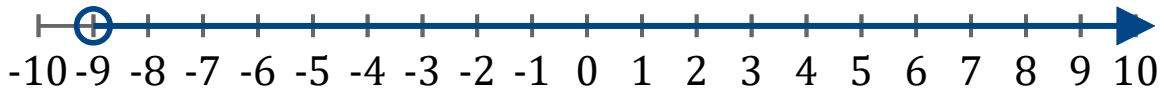
5. _____



Gráficos de Inecuaciones (I) Respuestas

Escriba la inecuación correspondiente a cada gráfico.

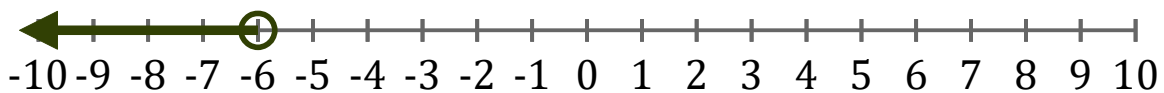
1. $x > -9$



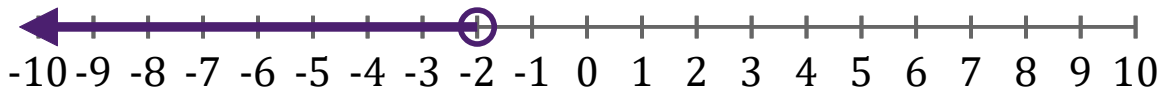
2. $x \leq 2$



3. $x < -6$



4. $x < -2$



5. $x < -5$

