

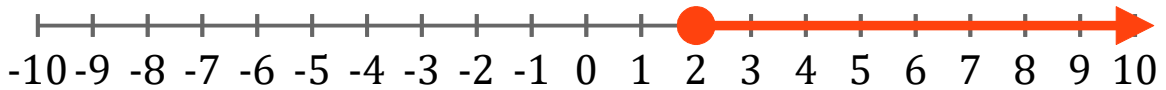
# Gráficos de Inecuaciones (I)

Escriba la inecuación correspondiente a cada gráfico.

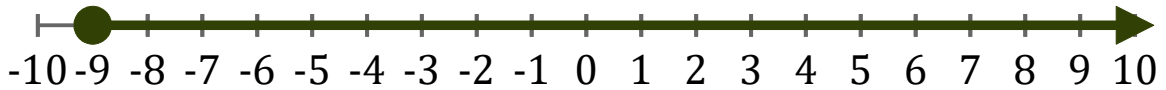
1. \_\_\_\_\_



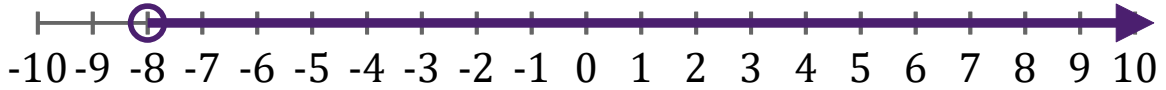
2. \_\_\_\_\_



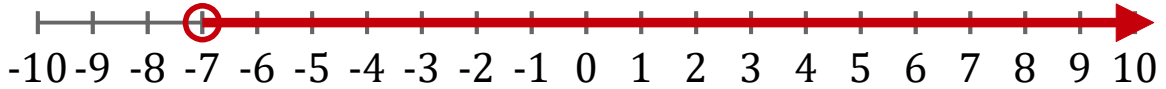
3. \_\_\_\_\_



4. \_\_\_\_\_



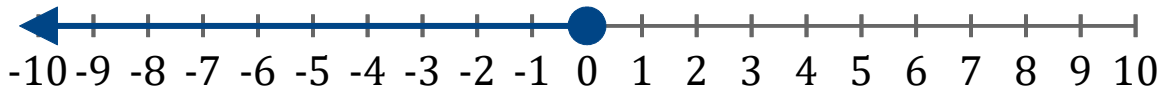
5. \_\_\_\_\_



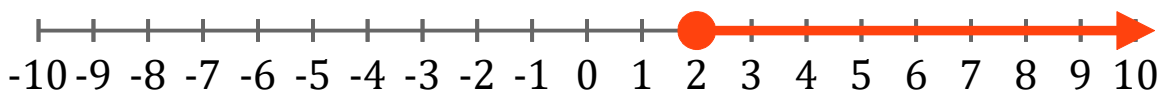
# Gráficos de Inecuaciones (J) Respuestas

Escriba la inecuación correspondiente a cada gráfico.

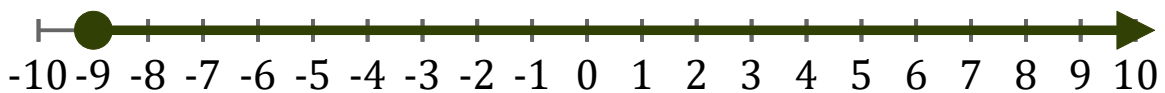
1.  $x \leq 0$



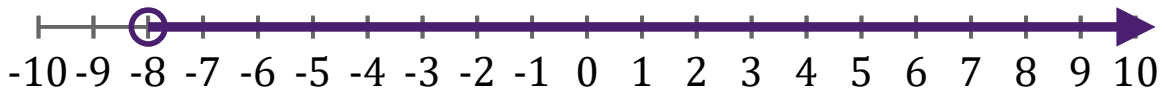
2.  $x \geq 2$



3.  $x \geq -9$



4.  $x > -8$



5.  $x > -7$

