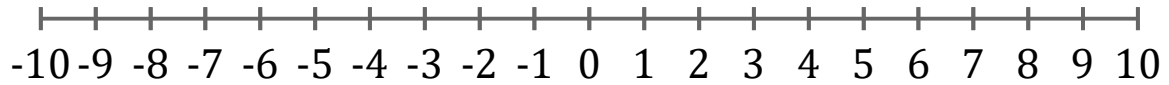


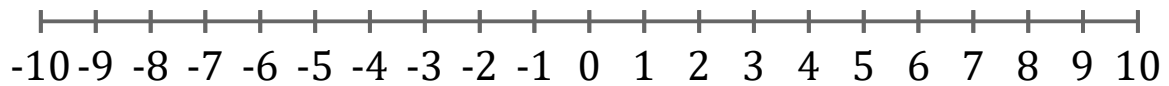
Graficar Inecuaciones (B)

Grafique cada inecuación en una recta numérica.

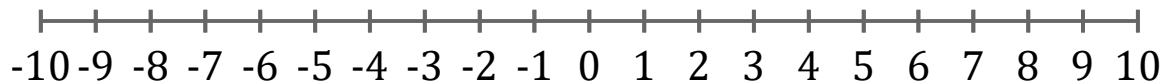
1. $x \geq -7$



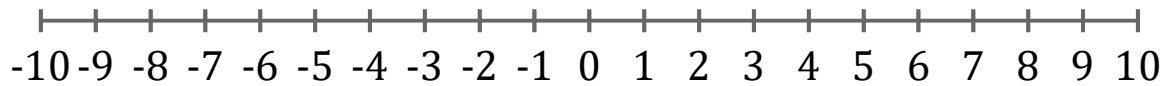
2. $x > -6$



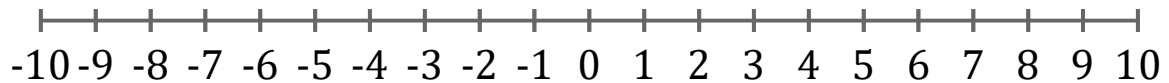
3. $x > 1$



4. $x > 1$



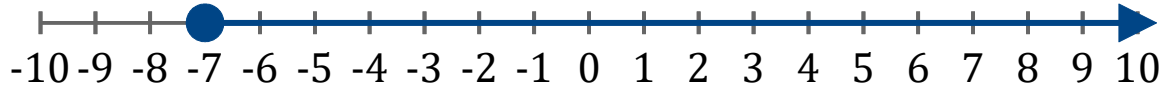
5. $x < -5$



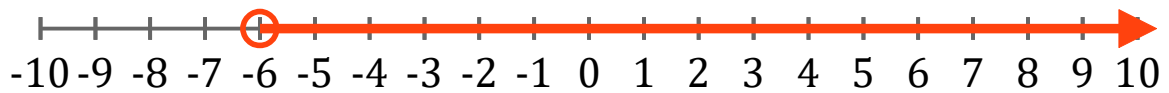
Graficar Inecuaciones (B) Respuestas

Grafique cada inecuación en una recta numérica.

1. $x \geq -7$



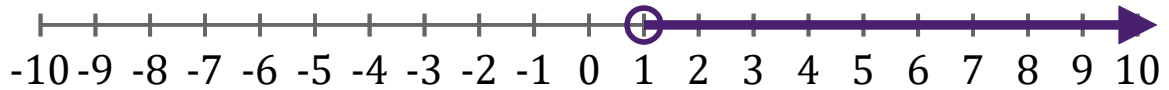
2. $x > -6$



3. $x > 1$



4. $x > 1$



5. $x < -5$

