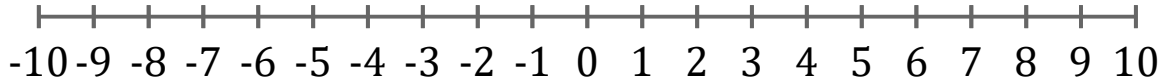


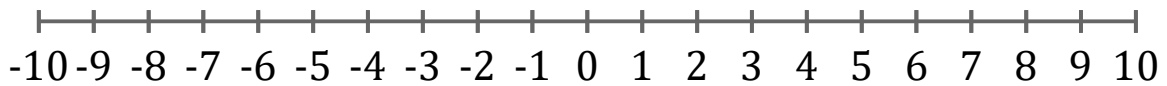
Graficar Inecuaciones (C)

Grafique cada inecuación en una recta numérica.

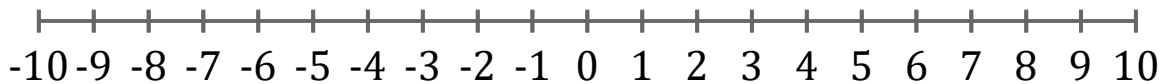
1. $x \leq 3$



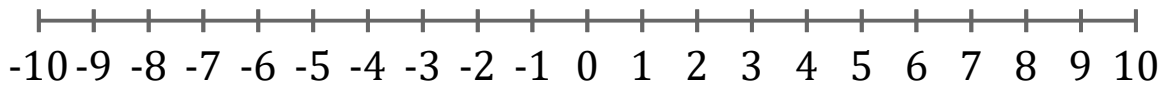
2. $x < -1$



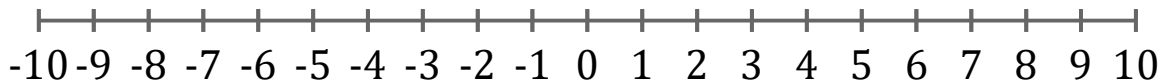
3. $x < -2$



4. $x < 4$



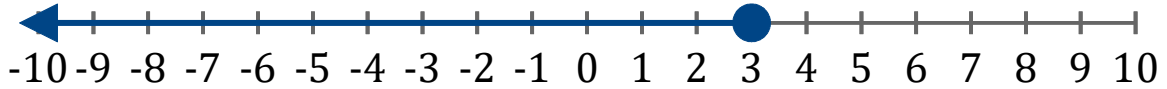
5. $x \leq 7$



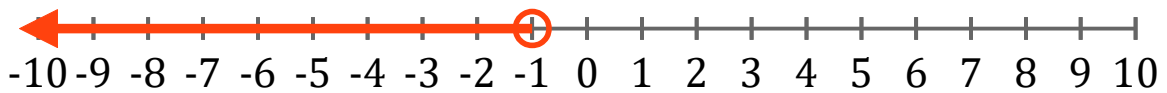
Graficar Inecuaciones (C) Respuestas

Grafique cada inecuación en una recta numérica.

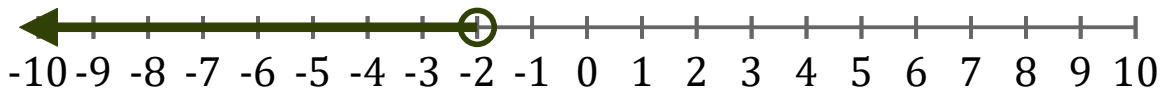
1. $x \leq 3$



2. $x < -1$



3. $x < -2$



4. $x < 4$



5. $x \leq 7$

