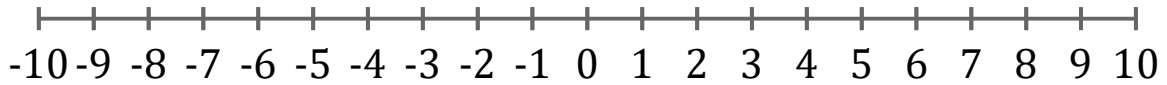


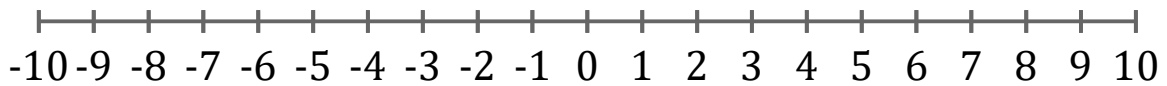
# Graficar Inecuaciones (D)

Grafique cada inecuación en una recta numérica.

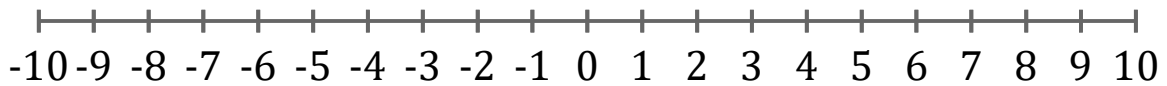
1.  $x > 7$



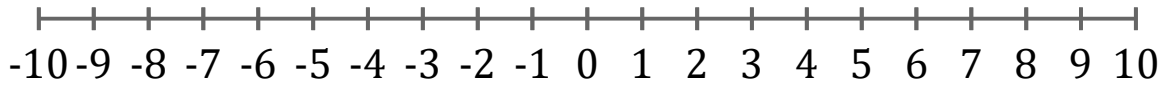
2.  $x > -5$



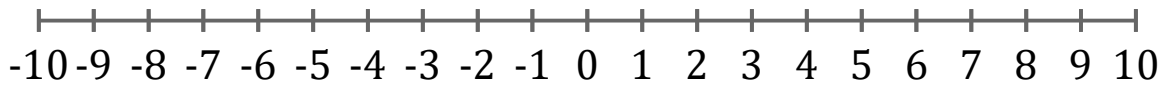
3.  $x \geq -5$



4.  $x > -2$



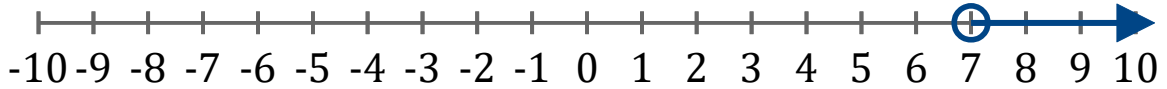
5.  $x > -9$



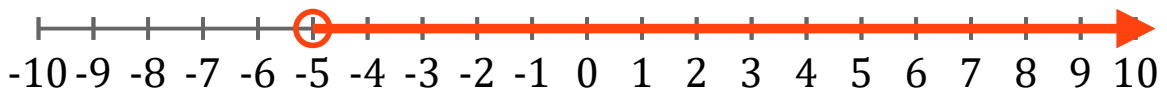
# Graficar Inecuaciones (D) Respuestas

Grafique cada inecuación en una recta numérica.

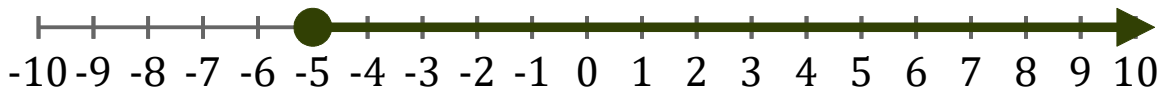
1.  $x > 7$



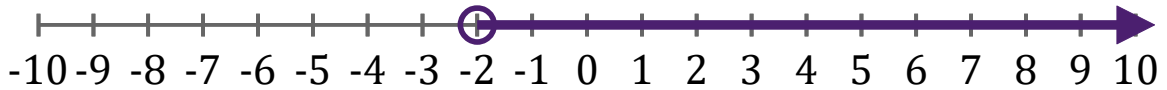
2.  $x > -5$



3.  $x \geq -5$



4.  $x > -2$



5.  $x > -9$

