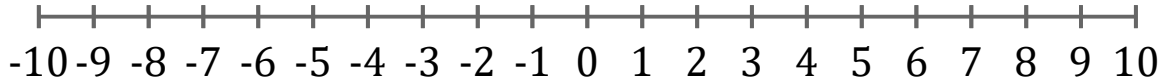


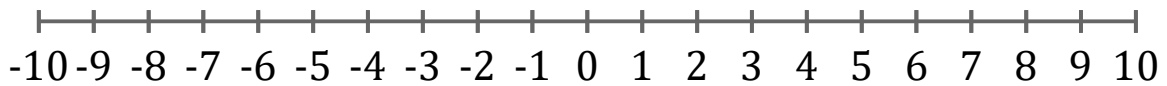
Graficar Inecuaciones (E)

Grafique cada inecuación en una recta numérica.

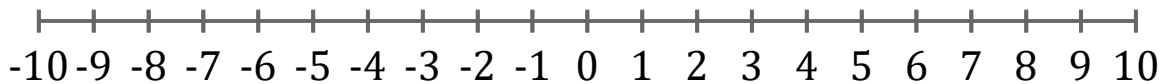
1. $x > 1$



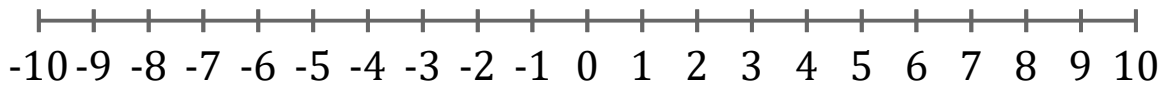
2. $x \leq 5$



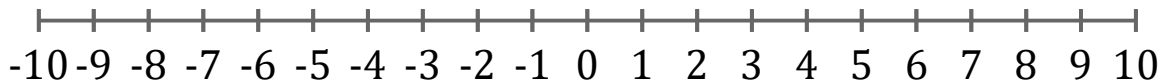
3. $x > -5$



4. $x \leq -8$



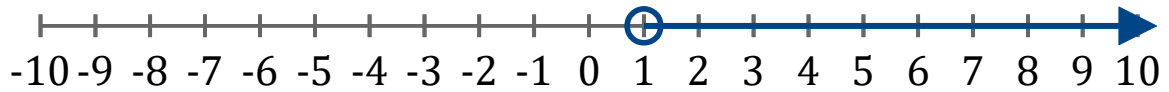
5. $x > -8$



Graficar Inecuaciones (E) Respuestas

Grafique cada inecuación en una recta numérica.

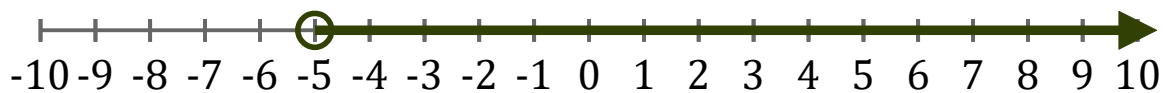
1. $x > 1$



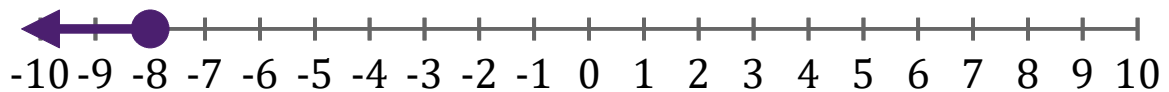
2. $x \leq 5$



3. $x > -5$



4. $x \leq -8$



5. $x > -8$

