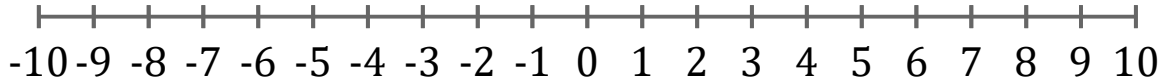


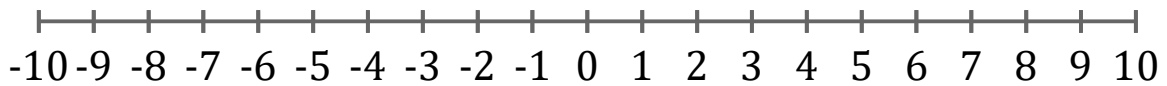
Graficar Inecuaciones (H)

Grafique cada inecuación en una recta numérica.

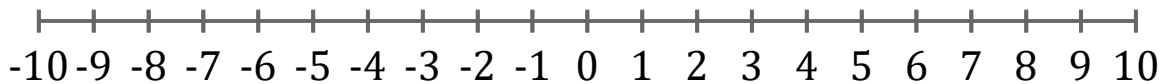
1. $x \leq 3$



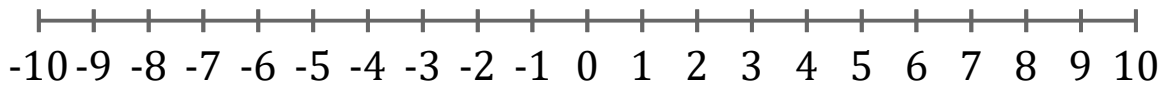
2. $x \geq -2$



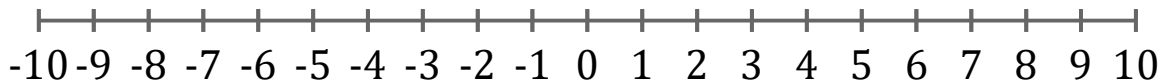
3. $x \leq 8$



4. $x > -5$



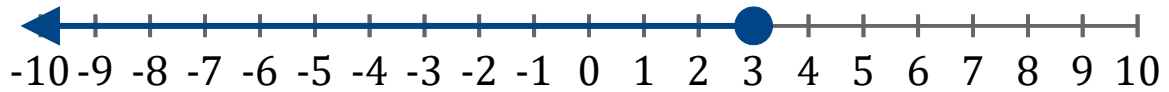
5. $x > -8$



Graficar Inecuaciones (H) Respuestas

Grafique cada inecuación en una recta numérica.

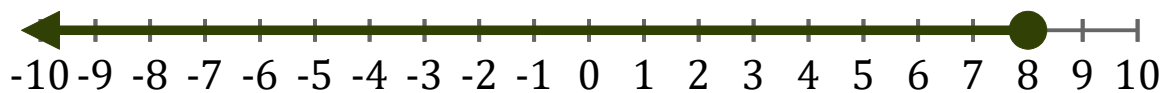
1. $x \leq 3$



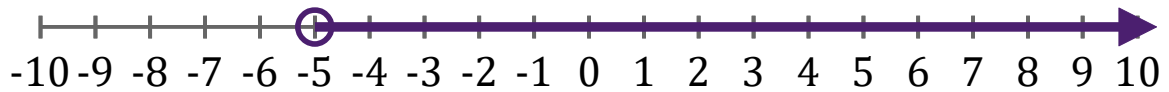
2. $x \geq -2$



3. $x \leq 8$



4. $x > -5$



5. $x > -8$

