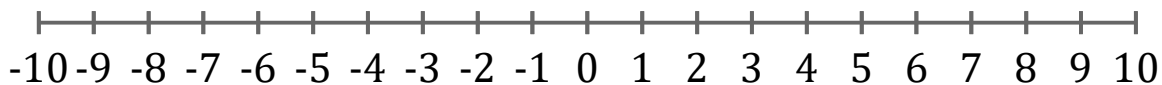


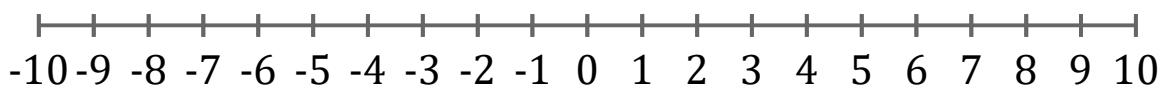
Graficar Inecuaciones (I)

Grafique cada inecuación en una recta numérica.

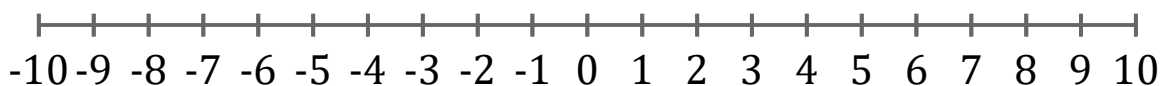
1. $x \leq 2$



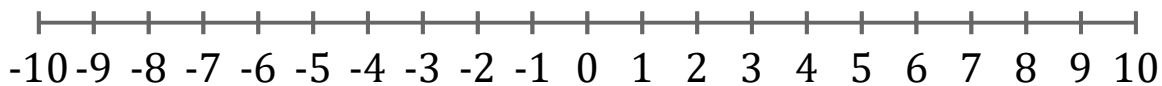
2. $x < 1$



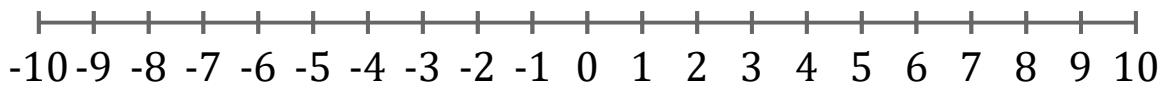
3. $x < 0$



4. $x > 9$



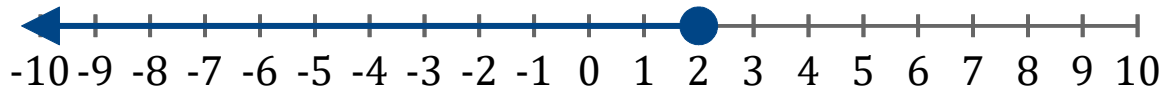
5. $x \leq -7$



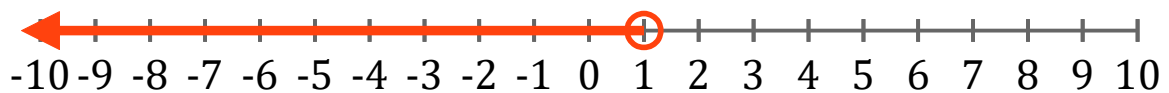
Graficar Inecuaciones (I) Respuestas

Grafique cada inecuación en una recta numérica.

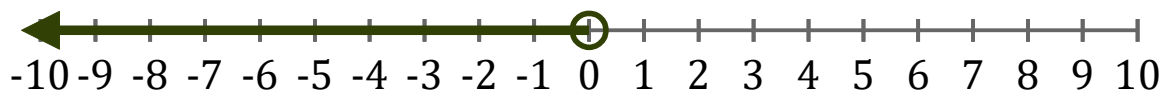
1. $x \leq 2$



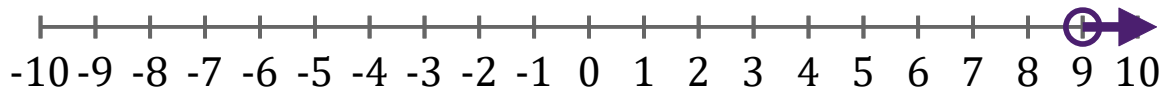
2. $x < 1$



3. $x < 0$



4. $x > 9$



5. $x \leq -7$

