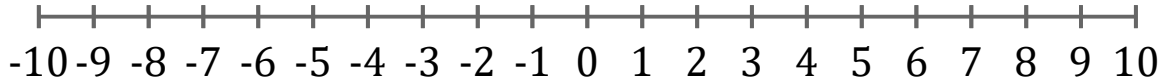


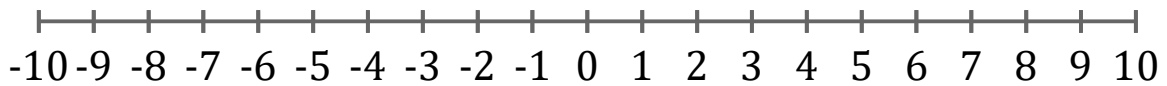
Graficar Inecuaciones (J)

Grafique cada inecuación en una recta numérica.

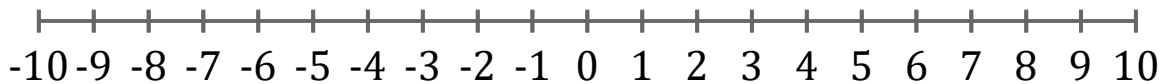
1. $x < 8$



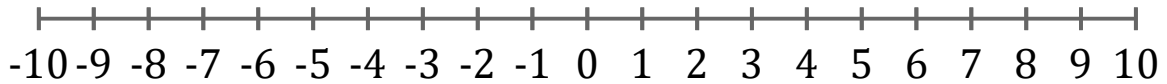
2. $x < 8$



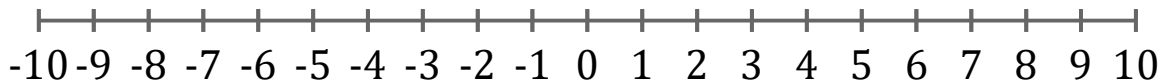
3. $x \leq 9$



4. $x \leq 3$



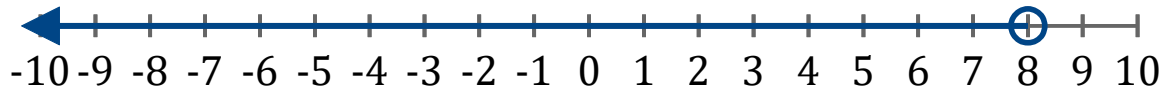
5. $x < -2$



Graficar Inecuaciones (J) Respuestas

Grafique cada inecuación en una recta numérica.

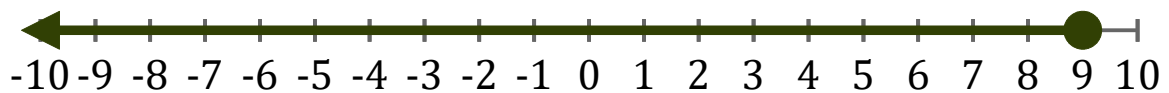
1. $x < 8$



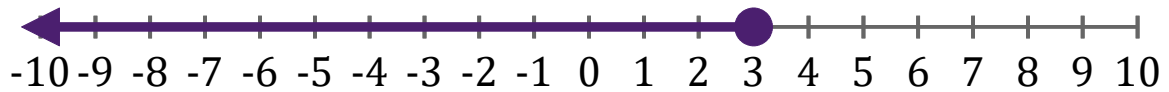
2. $x < 8$



3. $x \leq 9$



4. $x \leq 3$



5. $x < -2$

